



THE KENYA NATIONAL EXAMINATIONS COUNCIL

KCPE 2011**SOCIAL STUDIES AND
RELIGIOUS EDUCATION****0511K3**

Time: 2 hour 15 minutes

INSTRUCTIONS TO CANDIDATES (Please read these instructions carefully)

1. You have been given this question booklet and a separate answer sheet. The question booklet contains 90 questions.
2. Do any necessary rough work in this booklet.
3. When you have chosen your answer, mark it on the **ANSWER SHEET**, not in this question booklet.

HOW TO USE THE ANSWER SHEET

4. Use an ordinary pencil.
5. Make sure you have written on the answer sheet:

YOUR INDEX NUMBER
YOUR NAME
NAME OF YOUR SCHOOL

6. By drawing a **dark line** inside the correct numbered boxes mark your full Index Number (i.e. School Code Number and the three-figure Candidate's Number) in the grid near the top of the answer sheet.
7. Do not make any marks outside the boxes.
8. Keep the sheet as clean as possible and do not fold it.
9. For each of the questions 1 – 90 four answers are given. The answers are lettered A, B, C and D. In each case only **ONE** of the four answers is correct. Choose the correct answer.
10. On the answer sheet the correct answer is to be shown by drawing a **dark line** inside the box in which the letter you have chosen is written.

Example**In the Question Booklet:**

- 31.** Which one of the following groups of people belong to a nuclear family?

- A. Mother, Son, Grandfather.
- B. Father, Son, Uncle.
- C. Father, Daughter, Son.
- D. Grandmother, Father, Daughter.

The correct answer is "C"

On the answer sheet:

31 [A] [B] [C] [D] 32 [A] [B] [C] [D] 33 [A] [B] [C] [D] 34 [A] [B] [C] [D] 35 [A] [B] [C] [D]

In the set of boxes numbered 31, the box with the letter C printed in it is marked.



11. Your **dark line** **MUST** be within the box.
12. For each question **ONLY ONE** box is to be marked in each set of four boxes.

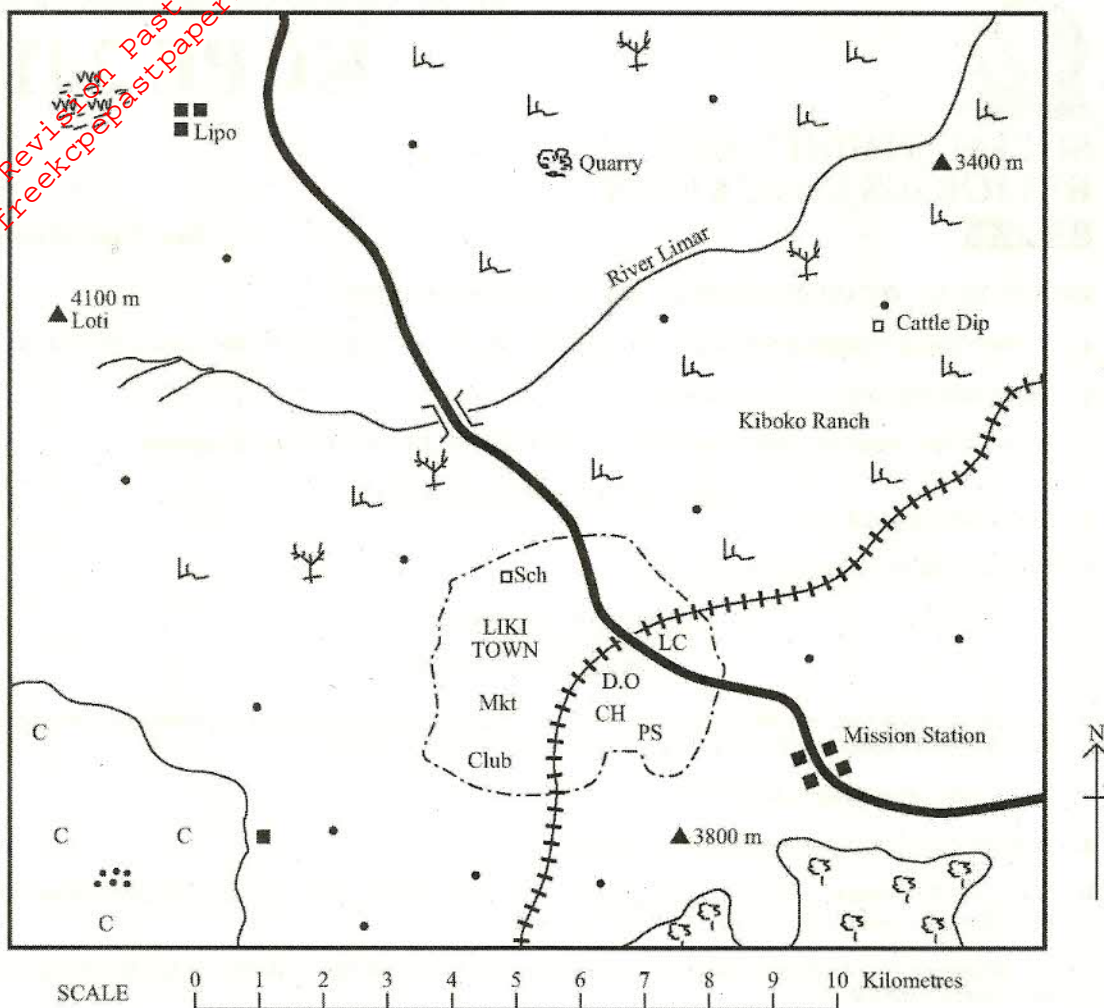
This question paper consists of 12 printed pages.

© The Kenya National Examinations Council, 2011

901506

**TURN OVER**

PART I SOCIAL STUDIES
LIKI AREA

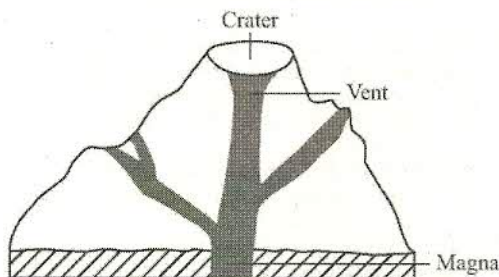


KEY	
	Tarmac Road
	Railway line
	River
	Bridge
	Municipal boundary
	Permanent buildings
	Houses
	Hill
	Forest
	Scrub
	Swamp
	Scattered trees
	Court House
	Coffee plantation
	Market
	District office
	Police station
	School
	Level crossing

Study the map of Liki area and answer questions 1 to 7.

1. What is the direction of Loti hill from the Mission Station?
A. North East
B. North West
C. South East
D. South West.
2. The approximate length of the railway line shown on the map is
A. 10 kilometres
B. 12 kilometres
C. 13 kilometres
D. 18 kilometres.
3. The main type of natural vegetation in Liki area is
A. forest
B. swamp
C. scrub
D. scattered trees.
4. Which one of the following statements is true about river Limar?
A. It is a seasonal river.
B. It has few meanders.
C. It flows westwards.
D. It is used for transport.
5. The following economic activities are carried out in Liki area except
A. fishing
B. mining
C. trading
D. cattle keeping.
6. The distribution of settlements in Liki area can mainly be described as
A. dispersed
B. clustered
C. linear
D. dense.
7. Which one of the following local authorities is in charge of Liki town?
A. City Council.
B. Municipal Council.
C. Urban Council.
D. County Council.
8. Which one of the following was a way of educating the youth in traditional African societies?
A. Using a fixed time table.
B. Attaching the learners to an expert.
C. Teaching boys and girls similar skills.
D. Asking the learners to write down points.
9. The migration of people into a country is called
A. immigration
B. emmigration
C. rural-urban migration
D. urban-urban migration.

10. Which one of the following is true about the interaction of Kenyan communities during the pre-colonial period?
A. Having a common standing army.
B. Organizing common initiation ceremonies.
C. Carrying out trading activities.
D. Worshipping the same gods.
11. Who among the following explorers carried out activities along River Zambezi?
A. Dr. David Livingstone.
B. Dr. Ludwig Krapf.
C. Johann Rebmann.
D. Vasco da Gama.
12. Which one of the following was the reason for the coming of the Portuguese to the East African coast?
A. They wanted to build Fort Jesus.
B. They were looking for the source of river Nile.
C. They wanted to trade with people in the region.
D. They wanted to establish maize plantations in the region.
13. The revolution of the earth causes
A. changes in the direction of wind
B. day and night
C. formation of clouds
D. the four seasons.
14. The diagram below shows the structure of a type of mountain. Use it to answer the question that follows.



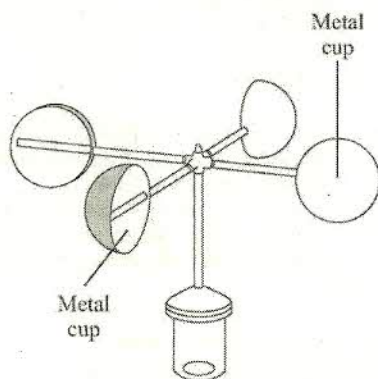
The type of mountain shown in the diagram was formed as a result of

- A. faulting of the rocks
 - B. folding of the rocks
 - C. deposition of eroded materials
 - D. accumulation of lava on the earth's surface.
15. Below are statements that describe the organization of traditional African Societies.
(i) They lived in caves.
(ii) They believed in a Supreme Being.
(iii) They practised the art of painting.
(iv) They were organized in clans.
(v) They were nomads.
Which one of the following combination of statements describes the social organization of the Khoikhoi.
A. (i), (ii) and (iv)
B. (i), (iii) and (v)
C. (ii), (iv) and (v)
D. (iii), (iv) and (v)

16. Which one of the following Kenyan communities belong to the same language group?

A. Nandi, Boran and Kipsigis.
B. Rendille, Galla and Nandi.
C. Kipsigis, Rendille and Orma.
D. Galla, Orma and Borana.

17. The diagram below shows an instrument used for measuring weather. Use it to answer the question that follows.



Which one of the following statements is **true** about the instrument shown in the diagram? It is used to

A. determine the direction of the wind
B. record the speed of the wind
C. determine the strength of the wind
D. record the distance moved by the wind.

18. Below are statements about the migration of a community into Kenya during the pre-colonial period.

(i) They migrated from the Congo Basin.
(ii) They travelled along the western shores of L. Victoria.
(iii) They entered Kenya through the Mt. Elgon area.
(iv) They migrated further eastwards in search of agricultural land.

The community whose migration pattern is describe above is

A. Agikuyu
B. Luo
C. Abagusii
D. Iteso.

19. One of the causes of soil erosion is

A. terracing
B. contour ploughing
C. crop rotation
D. monocropping.

20. The reason why children should help parents in carrying out family responsibilities is to

A. enable them earn some money
B. improve their performance in school
C. enable them grow faster
D. promote harmony in the family.

21. Which one of the following was the reason why European nations scrambled for colonies in Africa?

A. To acquire raw materials for their industries.
B. To promote the African culture.
C. To create job opportunities for the Africans.
D. To promote peace in the continent.

22. Three of the following are characteristics of the Mediterranean type of climate. Which one is **NOT**?

A. The annual range of temperature is high.
B. Rain occurs throughout the year.
C. Summers are hot and dry.
D. Dust storms are common.

23. Which one of the following is a reason why Lewanika allowed Christian missionaries to establish stations in the Lozi Kingdom?

A. He desired to use them to fight his enemies.
B. He obeyed the advice of Khama of Ngwato.
C. He wanted them to spread christianity.
D. He wanted them to assist him become wealthy.

24. The meaning of climate is

A. the daily weather condition of a given place
B. the average weather condition of a place over a long period of time
C. the daily temperature records of a given place
D. the amount of moisture in the atmosphere.

25. Below are some uses of soil

(i) Brick making.
(ii) Pottery making.
(iii) Building terraces.
(iv) Decorating walls.
(v) Decorating bodies.

Which one of the following combinations gives the traditional uses of soil?

A. (i), (ii) and (iv).
B. (i), (iii) and (iv).
C. (ii), (iii) and (v).
D. (ii), (iv) and (v).

26. Which one of the following factors led to the Hehe resistance of German occupation in Tanganyika?

A. They were influenced by the prophecy of Mkwawa.
B. They wanted to protect their cultural beliefs.
C. They had been promised support by the British.
D. They wanted to show their military power.

27. Which one of the following methods is used to catch fish in the deep sea?

A. Line fishing.
B. Trawling.
C. Basket fishing.
D. spearing.

28. Which one of the following pre-historic sites in Eastern Africa is **correctly** matched with the country where it is located?

Pre-historic site	Country
A. Hadar	Kenya.
B. Ishango	Ethiopia.
C. Olduvai Gorge	Tanzania.
D. Olorgesaille	Uganda.

29. Which one of the following ways indicates how pupils may be abused while at school?

- A. Asking them to clean the chalkboard.
- B. Retaining them in class during break time.
- C. Asking them to complete their home work.
- D. Retaining them for extra teaching.

30. Which one of the following is the main effect of HIV and AIDS on population growth?

- A. It lowers the life expectancy.
- B. It reduces the fertility rates.
- C. It leads to increased deaths.
- D. It lowers the birth rates.

31. The main reason for establishing settlement schemes in Kenya after independence was to

- A. improve standards of living in the rural areas
- B. provide farms to the people who had no land
- C. reduce pressure on land in densely populated areas
- D. increase crop and livestock production.

32. Below are some conditions necessary for the growing of a crop.

- (i) Deep well drained soils which are slightly acidic.
- (ii) Gently sloping land.
- (iii) Well distributed rainfall throughout the year.
- (iv) Temperatures of about 21°C

The crop that grows under the condition listed above is

- A. coffee
- B. pyrethrum
- C. tea
- D. wheat.

33. Below are contributions of an African leader towards the struggle for independence.

- (i) Supported African Liberation Movements.
- (ii) Organized non violent struggle.
- (iii) Negotiated for independence from colonialist.

The leader referred to is

- A. Leopold Senghor
- B. Julius Nyerere
- C. Gamel Nasser
- D. Haile Salasie.

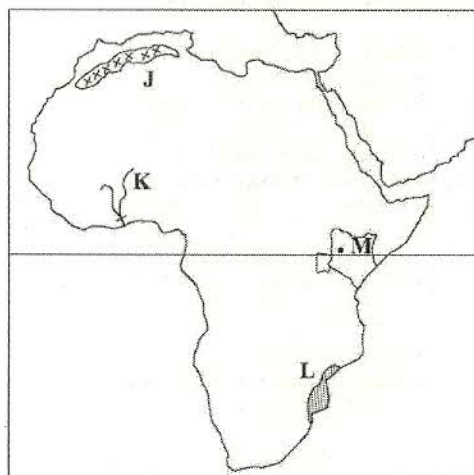
34. The following are characteristics of a type of traditional farming in Kenya.

- (i) Small portions of land are cultivated at a time.
- (ii) Trees are cut and burnt.
- (iii) Simple farming tools are used.
- (iv) Loss of soil fertility leads to movement of people to new areas.

The characteristics listed above describe traditional type of farming known as

- A. bush fallowing
- B. rotational farming
- C. shifting cultivation
- D. crop rotation.

Use the map of Africa below to answer questions 35 to 38



35. The relief feature marked J is

- A. Ahaggar plateau
- B. Adamawa Highlands
- C. Atlas Mountains
- D. Tibesti Mountains.

36. The multi-purpose river project marked K is

- A. Aswan High Dam
- B. Tana River project
- C. Kariba Dam
- D. Volta River Scheme.

37. The town marked M is

- A. Eldoret
- B. Nakuru
- C. Nairobi
- D. Thika.

38. Which one of the following colonial system of administration was applied in the country marked L?

- A. Direct rule.
- B. Indirect rule.
- C. Association.
- D. Assimilation.

39. The main contribution of sugar cane farming to the economy of Sudan is that it has led to the

- A. development of social amenities
- B. earning of foreign exchange
- C. creation of job opportunities
- D. development of transport network.

40. Below are statements about a mineral in Kenya.

- (i) It is mined on the floor of the Rift Valley.
- (ii) It is used for softening water.
- (iii) It is the leading mineral export.

The mineral described above is

- A. diatomite
- B. flourspar
- C. limestone
- D. soda Ash.

41. Which one of the following groups of factors has favoured the growth of Nakuru town?

- A.
 - Presence of volcanic soils
 - Availability of water
 - Existence of a rich hinterland
- B.
 - Presence of minerals
 - Early settlement by Asians
 - Presence of an international airport
- C.
 - Establishment of cultural centres
 - Existence of headquarters of U.N. agencies
 - Development of a Lake Port.
- D.
 - Presence of white settlers
 - Establishment of an administrative centre
 - Well developed transport network.

42. Three of the following are problems facing poultry farming in Kenya. Which one is **not**?

- A. Diseases that kill the birds.
B. Shortage of workers.
C. Expensive poultry feeds.
D. Changes in the prices of poultry products.

43. John, a standard six pupil, notices an elderly person lying along the pathway. The **best** action for John to take to assist the person is to

- A. try to talk to the person
B. call for help
C. let the person rest
D. try to move the person.

44. The **main** factor favouring large scale dairy farming in the Kenya highlands is

- A. existence of cool climate
B. availability of veterinary services
C. availability of labour
D. existence of milk storage facilities.

45. The **main** reason why there are many road accidents in Kenya is that

- A. roads are in poor condition
B. cyclists ride carelessly
C. roads lack road signs
D. drivers ignore traffic rules.

46. Which one of the following statements is **true** about inland fishing in both Kenya and Tanzania?

- A. Fishermen have inadequate modern fish preserving facilities.
B. Fishing is carried out during particular seasons.
C. Fish is mainly for export market.
D. Fish is mainly transported by railway.

47. Which one of the following industries is **correctly** matched with the main type of pollution it causes?

- | Industry | Type of pollution |
|-----------------------|-------------------|
| A. Leather tanning | – Noise pollution |
| B. Saw milling | – Water pollution |
| C. Cement manufacture | – Air pollution |
| D. Vehicle assembly | – Land pollution |

48. Below are some factors which are considered in the location of industries.

- (i) availability of water.
(ii) nearness to the market.
(iii) availability of raw materials.
(iv) government policy.
(v) availability of labour.

Which one of the following combinations of factors could be considered when locating a basket weaving industry?

- A. (i), (ii) and (v).
B. (i), (iii) and (v).
C. (ii), (iii) and (v).
D. (ii), (iv) and (v).

49. Kenya's philosophy of African Socialism is important in that it

- A. promotes traditional systems of government
B. encourages individuals to get wealth
C. encourages people to work as a team
D. promotes the use of different currencies.

50. Below are tourist attractions in Kenya and Switzerland.

- (i) Coastal beaches.
(ii) Winter sports.
(iii) Varied glacial scenery.
(iv) Hot sunny climate throughout the year.

Which one of the following combinations is made up of tourist attractions in Switzerland?

- A. (i) and (ii)
B. (i) and (iv)
C. (ii) and (iii)
D. (iv) and (iii).

51. The Organisation of African Unity (OAU) had its members drawn from

- A. independent states of Africa
B. English speaking states of Africa
C. states with similar systems of government
D. states with common currency.

52. Pupils should participate in school management so that they

- A. ensure the teachers do their work effectively
B. prepare their class timetables
C. understand the rules that guide them
D. take care of the school money.

53. The following are statements about a type of democracy.

- (i) Power is in the hands of citizen.
(ii) Citizens meet to make laws.
(iii) Citizens appoint officials to implement policies.
The type of democracy referred to is
A. direct democracy
B. indirect democracy
C. parliamentary democracy
D. civic democracy.

54. The reason why electric fences are constructed around some national parks is to

- A. prevent wild animals from destroying crops
B. make the parks beautiful
C. mark migration routes of wild animals
D. enable people to visit the parks.

55. It is important for citizens to participate in General Elections in order to
- choose responsible leaders
 - get a share of the national resources
 - assist their relatives to get jobs
 - settle their political differences.

56. One of the benefits of trade to Kenya's economy is that it
- encourages people to move to urban centres
 - makes people get to know each other
 - generates revenue for the government
 - reduces the importation of goods.

57. Which one of the following statements describes litigation as a way of resolving conflict in the society?
- Taking the matter to court.
 - Asking for forgiveness.
 - Discussing with one another.
 - Involving a third party.

58. In Kenya, a councillor may lose a civic seat if he/she is
- unable to contribute in council meeting
 - admitted in hospital
 - declared bankrupt by a court of law
 - unable to use the allocated funds.

59. The work of the police force in Kenya is to
- make laws
 - arrest law breakers
 - punish law breakers
 - protect the borders.

60. Two communities have disagreed over the ownership of a piece of grazing land. The best way through which peace could be maintained is by
- moving one of the communities to a new area
 - teaching the communities how to live together
 - negotiating over the matter
 - taking the matter to court.

PART II RELIGIOUS EDUCATION
SECTION A
CHRISTIAN RELIGIOUS EDUCATION

61. According to the stories of creation in Genesis chapter 1 and 2, human beings were to care for the environment by
- naming the animals
 - tilling the land
 - building shelters
 - building shrines.

62. The story of Noah and the flood mainly teaches Christians that
- they should protect their lives
 - families are important
 - they should protect the animals
 - those who sin are punished.

63. The promises that God made to Abraham mainly teach Christians to be
- faithful
 - courageous
 - humble
 - tolerant.

64. Who among the following people was the son of Isaac?
- Joseph.
 - Joshua.
 - Jacob.
 - Jonah.

65. During their last night in Egypt, the Israelites put the blood on the door posts in order to
- keep their enemies away
 - show their suffering
 - mark their houses
 - show that they were in a hurry.

66. Which one of the following actions was carried out by Moses at Mount Sinai?
- Building an altar.
 - Removing water from the stone.
 - Feeding people with manna.
 - Performing miraculous deeds.

67. Who among the following people led the Israelites against the Midianites?
- David.
 - Ahab.
 - Gideon.
 - Saul.

68. The Shunamite woman welcomed prophet Elijah into her house by
- giving him clothes
 - giving him a place to stay
 - pouring oil on his feet
 - washing his clothes.

69. The prophet who foretold about the suffering servant is
- Amos
 - Jeremiah
 - Micah
 - Isaiah.

70. Which one of the following was said about Jesus by Angel Gabriel? The child will
- be mighty
 - be called Holy
 - not drink any wine
 - be a light to the Gentiles.

71. Which one of the following reasons explains why the shepherds visited baby Jesus? They
- wanted to take gold to him
 - were sent by Herod
 - wanted to worship him
 - wanted to please his parents.

72. "Happy are those who work for peace; God will call them his children" (Matthew 5:9) These words were spoken by Jesus
- during the sermon on the mount
 - during his temptations
 - when choosing the disciples
 - when attending the wedding at Cana.

73. The **main** lesson christians learn from the miracle of the miraculous catch of fish is that they should
- be commended for their work
 - be ready to serve God
 - work with others
 - obey God's word.

74. A lesson that christians learn from the raising of Jairus' daughter is that they should
- ask for help
 - protect themselves against evil
 - give out their belongings
 - repent their sins.

75. Which one of the following parables teaches christians to accept others? The parable of the
- sower
 - mustard seed
 - lost son
 - rich man and lazarus.

76. Which one of the following statements was said by Jesus during the last super?
- "This is my body which is given for you."
 - "Do not worry about your life, what you will eat."
 - "Father if you are willing, take this cup from me."
 - "Do not put the Lord your God to the test."

77. Judas Iscariot betrayed Jesus because he wanted to
- please the Roman authorities
 - please the Jewish leaders
 - become famous
 - get riches.

78. Jesus made his eleven disciples to believe that He had resurrected by
- healing them
 - washing their feet
 - breaking the bread
 - showing them the scars.

79. Which one of the following practices was carried out by believers in the early church?
- Naming of the children.
 - Burning incense.
 - Sharing meals.
 - Pouring libations.

80. Who among the following people baptised the Ethiopian Eunuch?
- Philip.
 - Peter.
 - Paul.
 - Ananias.

81. Which one of the following is a gift of the Holy Spirit?
- Mercy.
 - Wisdom.
 - Kindness.
 - Self-control.

82. Which one of the following ways of worship is common to both the traditional African religion and christianity?
- Making sacrifices.
 - Reciting prayers.
 - Reading scriptures
 - Baptising believers.

83. The **main** reason why marriage is important in traditional African communities is
- to get security
 - to improve one's status
 - to provide companionship
 - for the continuity of the family line.

84. In traditional African communities children are taught their responsibilities by
- brothers
 - friends
 - parents
 - sisters.

85. Which one of the following actions by Christians **best** show their respect for leaders?
- Being obedient.
 - Paying visits.
 - Correcting the leaders.
 - Offering gifts.

86. Your classmate Tabitha makes a lot of noise during study time. This is affecting the performance of the class. As a Christian what is the **best** action to take?
- Inform her parents about it.
 - Inform the class teacher.
 - Advice her to stop the habit.
 - Tell others not to talk to her.

87. Which one of the following group of activities show the christian teaching on leisure activities?

A	B
<ul style="list-style-type: none"> • Reading the Bible • Helping at home • Playing soccer 	<ul style="list-style-type: none"> • Improving one's talent • Going to church • Playing computer games
C	D
<ul style="list-style-type: none"> • Attending church • Talking about others • Visiting the sick 	<ul style="list-style-type: none"> • Helping in communal work • Helping the elderly • Visiting prisoners

88. Your classmate John has been asked by the mother to help in doing housework. He refuses because he feels that this is a dirty job. As a christian, what advice would you give him? Tell him
- the benefit of working
 - to let the mother do it
 - to ask the mother to employ a house help
 - to leave home.

89. Timothy a standard seven pupil has been asked to give money to the Captain so as to be allowed to play in the school football team. As a Christian, what action should he take?
- Pay the money required.
 - Tell him it is wrong.
 - Announce it to the others.
 - Report the matter to the games master.
90. Which one of the following is a **main** reason why Christians condemn misuse of drugs?
- It leads to fights.
 - It leads to poverty.
 - It defiles the body.
 - It causes insecurity.

SECTION B ISLAMIC RELIGIOUS EDUCATION

61. Which one of the following *Surahs* mentions the place where Nabi Musa received revelation from Allah?
- At-takathur*.
 - At-tiin*.
 - Al-Humaza*.
 - Al-maun*.
62. Amina, a standard eight pupil is facing a lot of problems at home. *Surah Inshirah* teaches her that
- the hereafter is better than the present life
 - Allah guides the righteous
 - Allah rewards those who are patient
 - there is relief after every hardship.
63. Which among the following *Surahs* is recited by Muslims in order to seek for Allah's protection from evil?
- An-Nas*.
 - An-Nasr*.
 - Al-Alaq*.
 - Al-Asr*.
64. A lesson that Muslims learn from *Surah At-takathur* is that they should
- take care of orphans
 - worship only one God
 - keep away from worldly things
 - observe punctuality in salah.
65. The following are verses of *Surah Al-khlas*:
- "He begets not nor was He begotten"
 - "Say He is Allah the one"
 - "And there is none comparable to Him"
 - "Allah the self-sufficient master"
- The **correct** order of the above verses is
- (iii) (iv) (ii) (i)
 - (i) (ii) (iii) (iv)
 - (ii) (iv) (i) (iii)
 - (iv) (i) (iii) (ii)

66. "If you want to do something" Which one of the following statements completes the quoted *Hadith* of the Prophet?
- Think of its outcome.
 - Do it on your own.
 - Do it immediately.
 - Consult others.
67. Khamis, a standard five pupil was riding on a donkey when it suddenly stopped. According to the *Hadith* of the Prophet (Pb.u.h) Khamis should
- feed the donkey
 - force the donkey to move
 - get off the donkey
 - beat up the donkey.
68. The first wife of the prophet (Pb.u.h.) was known as
- Hafsa bint Umar-al-khattab
 - Khadija bint Khuwailid
 - Aisha bint Abubakar
 - Safiya bint Huyay.
69. According to the *Hadith* of the Prophet (p.b.u.h), the best person is the one who acquires knowledge and
- memorises it
 - preserves it
 - conceals it
 - teaches it.
70. Who among the following is **not** a prophet?
- Zakariya.
 - Lukman.
 - Yahya.
 - Yunus.
71. The **main** reason why hard work is important to Muslims is because it
- discourages laziness
 - discourages begging
 - is a way of earning lawfully
 - is a way of creating wealth.
72. Kassim's mother overworks their maid Halima. The **best** course of action for Kassim to take is to
- plead with his mother to be kind to Halima
 - advise his mother to increase Halima's salary
 - ask Halima to quit her job
 - assist Halima in her duties.
73. According to the teachings of the Prophet (Pb.u.h), *jazakallah* should be said when a person
- becomes sick
 - completes a task
 - wakes up from sleep
 - performs a good deed.
74. Which one of the following *Surahs* is recited by Muslims when going to sleep?
- An-Nas*.
 - Al-Asr*.
 - Al-Alaq*.
 - An-Nasr*.

75. Below are events in the history of Islam:

- (i) treaty of Hudaibiya
- (ii) farewell Hajj
- (iii) battle of Badr
- (iv) Hijra to Madina
- (v) Conquest of Makkah

The correct order of the above events is

- A. (i) (iv) (v) (ii) (i)
- B. (v) (iv) (ii) (i) (iii)
- C. (iv) (iii) (i) (v) (ii)
- D. (i) (ii) (iii) (v) (iv).

76. Fatma, a standard six pupil saw her classmate Zainab stealing some money. The right course of action for Fatma to take is to

- A. advise Zainab to stop stealing
- B. pretend that she did not see Zainab
- C. tell other pupils about Zainab's action
- D. ask Zainab to share the money with her.

77. A lesson that Muslims learn from the treatment of prisoners of war in the battle of Badr is that prisoners should be

- A. set free
- B. locked up
- C. denied food
- D. treated kindly.

78. Your classmate tells you that she would like to buy a dress for Idd celebrations. As a Muslim, you would advise her to buy a dress that is

- A. currently on fashion
- B. shiny and attractive
- C. very expensive
- D. modest and covers nakedness.

79. The major activity performed on the day of Idd-ul-Hajj is

- A. visiting the sick
- B. attending parties
- C. slaughtering animals
- D. visiting relatives.

80. The duty of Angel Israfil is

- A. blowing the trumpet
- B. removing the souls
- C. recording deeds
- D. bringing rain.

81. Which one of the following months is not among the ash-hurul-hurum?

- A. Muharram.
- B. Ramadhan.
- C. Dhulhijja.
- D. Rajab.

82. When Muslims are in need they should seek for assistance from

- A. Imam
- B. Allah
- C. Prophet
- D. Jibril.

83. Which is the Sunnah fast observed on the 9th of Dhul-hijja?

- A. Sitta-tul-shawwal.
- B. Ayyamul-beidh.
- C. Yaumul ashura.
- D. Yaumul arafa.

84. Which one of the following prophets is correctly matched with the scripture revealed to him?

- | Prophet | Scripture |
|------------|-----------|
| A. Musa | - Injil. |
| B. Daud | - Taurat. |
| C. Ibrahim | - Suhuf. |
| D. Issa | - Zabur. |

85. The salah which is performed at dawn is known as

- A. fajr
- B. dhuhir
- C. islah
- D. asr.

86. When Muslims perform halal acts, they are

- A. protected by Allah
- B. punished by Allah
- C. rewarded by Allah
- D. forgiven by Allah.

87. Muhammad a standard seven pupil forgot that he was fasting and ate a piece of cake.

The right action for him to take is to

- A. force himself to vomit
- B. break the fast and repent
- C. continue eating and fast later
- D. stop eating and continue fasting.

88. Three of the following items are liable for Zakat except

- A. household furniture
- B. clothes for sale
- C. cash savings
- D. farm produce.

89. A visit to the prophet's mosque in Madina during Hajj is important because

- A. it is a ritual of Hajj.
- B. it is the second holiest mosque in Islam.
- C. it is the first mosque in Islam.
- D. it is where the Sahaba were buried.

90. Which one of the following factors contributed to the spread of Islam along the Kenyan Coast?

- A. Colonisation.
- B. Holy war.
- C. Inter-marriage.
- D. Slavery.

SECTION C HINDU RELIGIOUS EDUCATION

61. Which one of the following attributes of Paramatma is seen in the creation of flowers?
A. Protection.
B. Perfection.
C. Generosity.
D. Justice.
62. Which one of the following elements of *panch mahabhoot* does the ashes of a dead person belong to?
A. Agni.
B. Vayu.
C. Akash.
D. Prithvi.
63. Guru Teg Bahadur showed that he was full of compassion when he
A. gave away his clothes to a poor naked boy
B. chose Baba Bakala as the next *Guru*
C. contributed in the writing of *Guru Granth Sahib*
D. accepted gold coins to fulfil Makhan Shah's wishes.
64. Lord Vishnu killed Hiranyakashipu during *Narsimha Avatar* with his
A. legs
B. teeth
C. claws
D. hands.
65. Which one of the following is a reason why Vyasji compiled the Veda?
A. To show the way to realise Paramatma.
B. To please the learned scholars.
C. To preserve the valuable knowledge.
D. To prove that he was a great *Rishi*.
66. In which one of the following scriptures was Arjun shown Virat Darshan by Lord Krishna?
A. *Bhagwad Gita*.
B. *Bhagvat Puran*.
C. *Shiksha Patri*.
D. *Ramayana*.
67. The Holy Scripture of *Kalpasutra* contains the teachings of
A. Lord Krishna.
B. Guru Nanak.
C. Lord Mahavir.
D. Gautam Buddha.
68. The Veda that contains the knowledge of Ayurvedic medicine is
A. *Rig Veda*
B. *Atharva Veda*
C. *Sam Veda*
D. *Yajur Veda*.
69. The main reason why Hindus follow the ten principles of Lord Manu is to
A. unite all human beings
B. establish peace in the society
C. learn religious knowledge
D. regulate human behaviour.
70. Preeti gave away all her extra text books to the needy pupils in her class. By doing so she is practising the principle of
A. *Ahimsa*
B. *Aparigraha*
C. *Anekantvad*
D. *Asteya*.
71. Which one of the following principles is correctly matched with its practice?

Principle	Practice
A. <i>Satya</i>	- perseverance
B. <i>Dhruiti</i>	- compassion
C. <i>Kshama</i>	- forgiveness
D. <i>Daya</i>	- truthfulness
72. The principle of *Dharma* in which the soul reincarnates in a new body is known as
A. *Punarjanna*
B. *Purushartha*
C. *Prarthana*
D. *Pranidaya*.
73. The best way Hindus can assist HIV/AIDS orphans is by
A. visiting them
B. counselling them
C. playing games with them
D. giving them basic needs.
74. The Sikhs practise the principle of *Dharam ki kirat* by
A. earning their livelihood honestly
B. participating in religious ceremonies
C. praying together at Gurudwara
D. offering services at *langar*.
75. Neera and her younger brother Mitesh went to a shop to buy groceries. While at the shop, Neera notices Mitesh putting sweets in his pocket. The right course of action for Neera to take is to
A. share the sweets with Mitesh
B. join Mitesh in stealing the sweets
C. report Mitesh to their parents
D. ignore the whole issue.
76. Which one of the following is not a proper way of caring for the environment in your estate?
A. Burning garbage.
B. Planting flowers.
C. Collecting dry leaves.
D. Gathering plastic bottles.

77. Pushkar, a standard eight pupil suffers from a kidney illness. His teachers and school mates raise funds towards his medical bills.

Which one of the following *Sadachar* is demonstrated by this action?

- A. Respect.
- B. Obedience.
- C. Gratitude.
- D. Compassion.

78. In Schools, pupils from different religions and cultures learn together. This practice promotes

- A. spiritual unity
- B. cultural unity
- C. tribal unity
- D. national unity

79. In a Hindu month, the full moon day is known as

- A. Panchmi
- B. Ashtami
- C. Purnima
- D. Amavasya.

80. Which season is experienced during the months of Magh and Phalgun in India?

- A. Shishir.
- B. Varsha.
- C. Sharada.
- D. Vasant.

81. The most important activity during *Diwali* celebration is

- A. hosting visitors
- B. lighting the *deepaks*.
- C. cleaning the house
- D. giving alms to the poor

82. The flag of *Nishan Sahib* in a *Gurudwara* is raised during the festival of

- A. Lohdi
- B. Vaisakhi
- C. Gurupurab
- D. Nanak Jayanti.

83. The Sikh ceremony of *Anand Karaj* is performed in the presence of

- A. *Panj Pyare*
- B. *Gyaniji*
- C. *Deepak*
- D. *Granth Sahib*.

84. *Stavan* is a prayer recited in praise of

- A. Sikh *Guru*
- B. Hindu *Rishi*
- C. Jain *Tirthankar*
- D. Buddha *Sadhu*

85. The following are rituals performed during a Hindu ceremony:

- (i) the priest puts *tilak* on the *yajman's* forehead
- (ii) cleansing *mantras* are recited
- (iii) a fire is lit and *samagri* offered
- (iv) *Shanti path* is recited

The ceremony during which the above rituals are performed is

- A. *Havan*
- B. *Saptah*
- C. *Paath*
- D. *Satsang*.

86. The festival of *Raksha Bandhan* strengthens the holy bond between

- A. mother and son
- B. father and son
- C. brother and sister
- D. mother and daughter.

87. On the last day of *Paryushan Parva*, Jains recite

- A. *Ek Omkar Satnam*
- B. *Aum Namah Shivaya*
- C. *Sangham Sharnam Gachhami*
- D. *Michhami Dukdam*.

88. Which one of the following *Asana* is performed for complete relaxation of body and mind?

- A. *Shavasana*.
- B. *Vajrasana*.
- C. *Padmasana*.
- D. *Sukhasana*.

89. Which one of the following statements is true about Bhagirath?

- A. He revived Hinduism through lectures on Veda.
- B. He brought River Ganga to earth to liberate his ancestors.
- C. He established *Math* to educate the youth.
- D. He preached about the principle of *Ahimsa* in Magadh.

90. The most essential quality of a follower of *Bhakti yoga* is

- A. friendliness to others
- B. kindness to animals
- C. devotion to Paramatma
- D. charity to the needy.