

Name _____

Learners Number

Gender Boy Girl

County Name _____ County code


Sub -County Name _____ Sub-county code

School Name _____ School code

1. In drawing the smearing of colour onto a surface is called _____

2. In a drawing the change of tone from dark to light is called _____

3. The diagram below shows a bucket, a basin and a cup.



The drawing above is called _____

(still life composition, cryon etching, tonal variation)

4. Write **four** materials you need for painting

(a) _____


(b) _____

(c) _____

(d) _____

5. Which is the **best** soil for modelling a cooking pot?

6. Draw and colour a human form




7. A rainbow has _____ colours.

MUSIC

1. The songs sung during religious activities like praising God are called _____
2. The songs that tell us to take care of our country and pray for our country are called _____
3. Name **four** musical instruments you know from your locality
 - (a) _____
 - (b) _____
 - (c) _____
 - (d) _____
4. When we sing loudly or softly, we say we are singing with _____
5. The **four** main voices in a choir are
 - (a) _____
 - (b) _____
 - (c) _____
 - (d) _____

6. Draw a drum in the space below



7. Complete the sentences in the song below.

O God of all creation, Bless

Justice be our shield and _____

may we dwell in _____

peace and _____

plenty be found within our

8. The song "Kenya Nchi Yangu Naipenda" is an example of

9. Jingles are played by _____
(hitting, blowing, shaking)

Teacher's scoring guide:

	LEVEL 1	LEVEL 2	LEVEL 3	LEVEL 4
SECTION A ART & CRAFT (1 - 7)				
SECTION B MUSIC (1 - 9)				