




1. Join the dots.



2. Colour the numbers.



3. Read the shapes.



4. Write the missing numbers.

1 ___ 3 ___ 5 ___ 7 ___

5. Write the number value

e.g = 4 = ○○○○

2= ○

1= ○

5= ○

3= ○

Assessment Rubric

Exceeds expectation (35-50)	Meet expectation (25-34)	Approaching expectation (13-24)	Below expectation (0-12)