

1. Put counters.

4= _____

5= _____

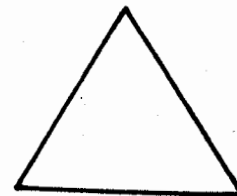



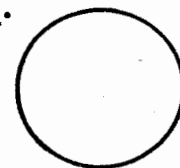
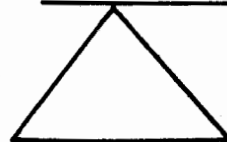
6= _____

2. Re-write these numbers.


6 9 10 2

7 3 8

3. Match the shapes.



4. Colour then read the number.



Assessment Rubric

Exceeds expectation (35-50)	Meet expectation (25-34)	Approaching expectation (13-24)	Below expectation (0-12)