

NAME:	
SCHOOL:	

Circle all the numbers.

1. 4 b c 3 2 a

2. m s 2 9 t h 5

3. 8 e 4 f g 2

4. j 6 p m 7 r 3

Write the next number.

5. 1, 2, 3, 4, _____, _____, _____

6. 10, 11, 12, 13, _____, _____, _____

7. 8, 9, 10, 11, _____, _____, _____

8. 20, 21, 22, 23, _____, _____, _____

Match the numbers.

9. 1 two

10. 7 nine

11. 5 one

12. 9 five

13. 2 seven

14. Which one is bigger 10 or 30? _____

15. Write numbers 1-20

_____, _____, _____, _____, _____, _____, _____,

_____, _____, _____, _____, _____, _____, _____,

_____, _____, _____, _____, _____, _____, _____

Draw enough balls.

16. 5 =

17. 8 =

18. 7 =

19. 6 =

20. 10 =

Add.

21. 5

2

+ 1

22. 2

1

+ 2

23. 3

1

+ 8

24. 13 + 4 =

25. 11 + 5 =

26. 7 + 3 =

Write the numbers.

27. Forty _____

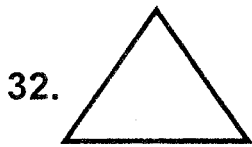
28. Twenty five _____


29. Thirty six _____

30. Ten _____

31. Eight _____

Name the shapes.





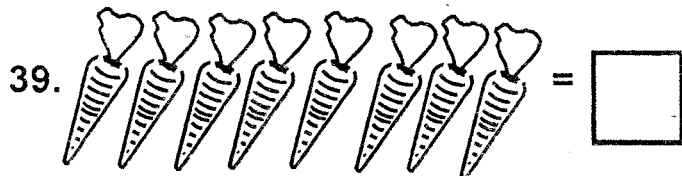
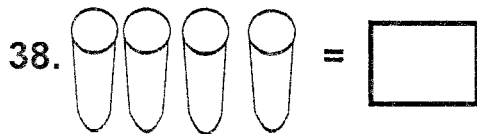




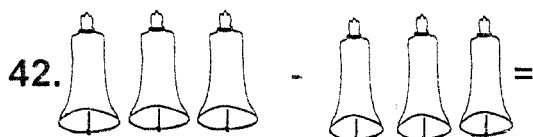


(oval, circle, triangle, rectangle, star)

Count and write



Take away.





43.
$$\begin{array}{r} 14 \\ -2 \\ \hline \hline \end{array}$$

44.
$$\begin{array}{r} 9 \\ -3 \\ \hline \hline \end{array}$$

Circle the container that holds more.



Match the same coins.



50. One week has _____ days
(7, 5)