

Name \_\_\_\_\_

Learners Number

Gender

Boy

Girl

County Name \_\_\_\_\_ County code

Sub -County Name \_\_\_\_\_ Sub-county code

School Name \_\_\_\_\_ School code

### ASSESSMENT RUBRICS

The teacher to fill the grid below after marking the learner's work.

	Exceeds expectation	Meets expectation	Approaching expectation	Below expectation
Numbers (1-17)				
Measurement (18 - 19)				
Geometry (20-25)				

**NUMBERS**

Writing the missing numbers.

1. 1, \_\_\_\_\_, 3, \_\_\_\_\_, 5, \_\_\_\_\_, 7

2. 5, 6, 7, \_\_\_\_\_, \_\_\_\_\_

3. 4, 6, \_\_\_\_\_ 10

Add

4.  $6 + 3 =$  \_\_\_\_\_

5.  $7 + 4 =$  \_\_\_\_\_

6.  $5 + 5 =$  \_\_\_\_\_

Write the missing numbers.

7.  $2 + \square = 3$

8.  $\square + 4 = 6$

9.  $5 + \square = 7$

10. 
$$\begin{array}{r} 6 \\ +5 \\ \hline \end{array}$$

11. 
$$\begin{array}{r} 5 \\ +3 \\ \hline \end{array}$$

Take away

12. 6 take away 2 is = \_\_\_\_\_

13. 4 take away 1 is = \_\_\_\_\_

14. 8 take away 6 is = \_\_\_\_\_

15.  $11 - 5 =$  \_\_\_\_\_


16.  $16 - 8 =$

17. 
$$\begin{array}{r} 6 \\ -1 \\ \hline \end{array}$$

18. 
$$\begin{array}{r} 12 \\ -6 \\ \hline \end{array}$$

**MEASUREMENT**

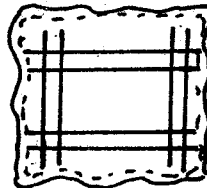
19. Which one holds less.



A.

B. \_\_\_\_\_

20. Which one is heavier



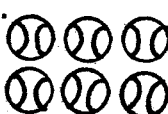

A.



B. \_\_\_\_\_

**GEOMETRY**

How many

20.  and  is = \_\_\_\_\_

21.  and  is = \_\_\_\_\_

22.  and  is = \_\_\_\_\_

Draw values

23.  $13 =$  \_\_\_\_\_

24.  $15 =$  \_\_\_\_\_

25.  $17 =$  \_\_\_\_\_