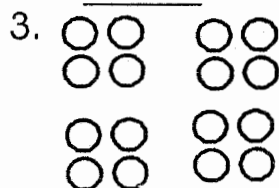




MATHEMATICAL ACTIVITIES

ASSESSMENT RUBRICS

Exceeds expectation	Meets expectation	Approaching expectation	Below expectation

Count and write



Add

4. $4 + 4 + 2 = \underline{\quad}$

5. $10 + 1 = \underline{\quad}$

6. $8 + 2 + 4 = \underline{\quad}$

7. $6 + 6 + 3 = \underline{\quad}$

8. $5 + 5 = \underline{\quad}$

Circle the larger number

9. 18 20

10. 17 7

11. 9 2

12. 4 3

Which one is bigger



13. A B



14.

A

B



Take away

15. $8 - 3 = \underline{\quad}$

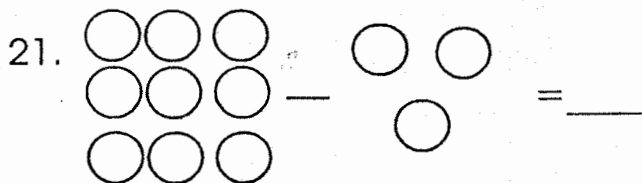
16. $6 - 4 = \underline{\quad}$

17. $6 - 4 = \underline{\quad}$

18. $10 - 8 = \underline{\quad}$

19. $3 - 2 = \underline{\quad}$

20. $9 - 2 = \underline{\quad}$



Which one holds more

22.

A

B



23.

A

B



24.

A

B


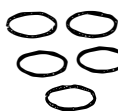





Colour the smaller number



25. 2 3 26. 4 5

I have

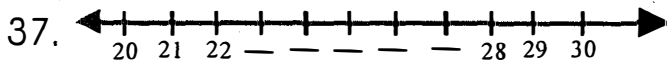
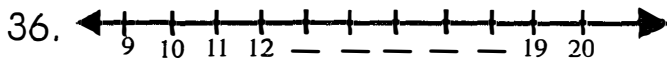
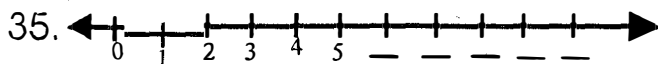
- 27. _____ eyes
- 28. _____ mouths
- 29. _____ heads
- 30. _____ hands
- 31. _____ legs

32.  +  +  = _____

33.  +  = _____

34.  +  = _____



Fill in the missing numbers.

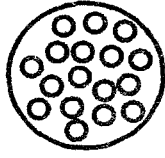
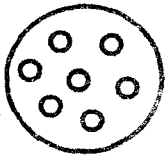


Which number comes after


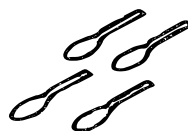
- 38. 14, _____
- 39. 22, _____
- 40. 18, _____
- 41. 9, _____
- 42. 12, _____

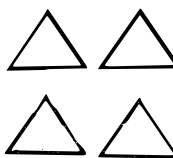
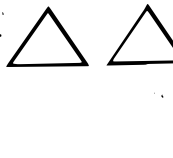
Which group contains more

43.  
 A B _____


44.  
 A B _____

Work out

45.  +  = _____

46.  +  = _____

Who is taller



James



John



Susan

Rina

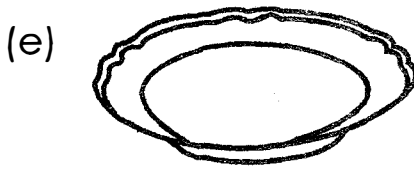
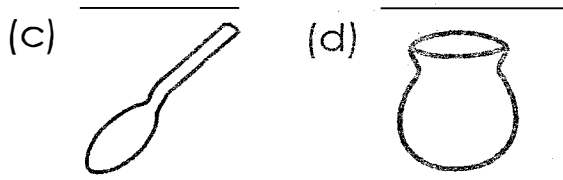
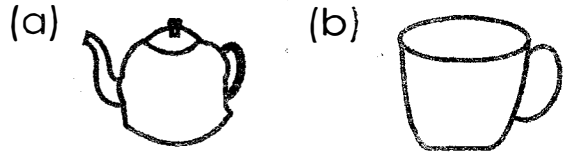
How much

49.  + 
 sh. 10 sh. 10 = sh. _____

50. What is eleven in figures _____

HYGIENE & NUTRITION ACTIVITIES

1. **Name and colour the following utensils.**



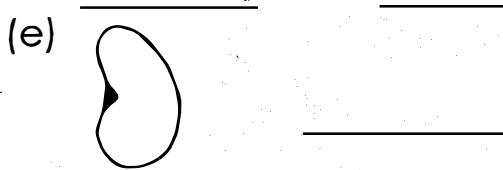
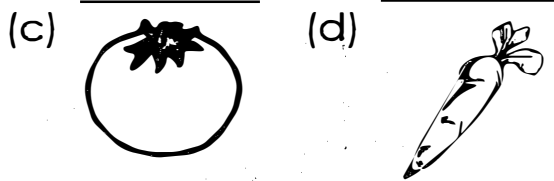
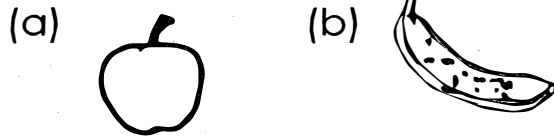
(kettle, plate, spoon, pot, cup)

2. We clean our teeth with _____ and _____

(3 marks)

(toothpaste, water, toothbrush, milk)

3. **Name the following foods.**
(5 marks)



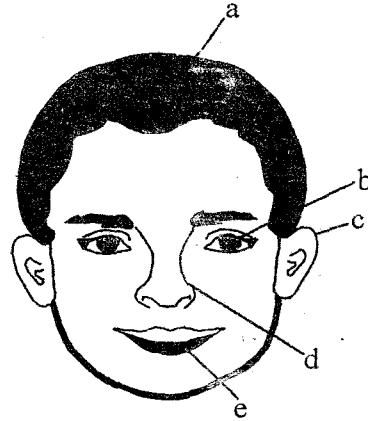
(bean, banana, apple, orange, carrot)

4. **Name the colour of (5 marks)**

- (a) milk _____
- (b) hair _____
- (c) teeth _____
- (d) blood _____
- (e) banana _____

(yellow, red, white, black)

5. **Name the body parts.**
(5 marks)




(mouth, nose, ear, hair, eye)

6. **Write yes or no (5 marks)**

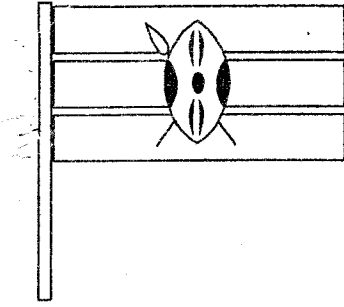
- (a) We should always drink clean water _____
- (b) We should not eat uncooked meat _____
- (c) When sick we take medicine _____
- (d) We use our eyes to see _____
- (e) We sleep on a bed _____

7. **Colour this cup. (2 marks)**

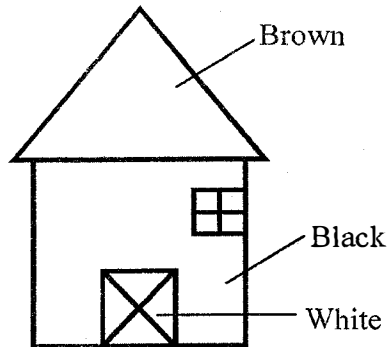


CREATIVE ARTS

1. Colour the following flag.





2. Colour this hut

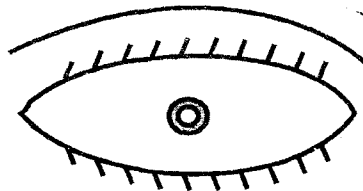



MUSIC

1. Colour the following music instruments.



2. Name the following body parts we use in singing.



(legs, mouth, hands)

RELIGIOUS ACTIVITIES

1. Children were created by _____

(Satan, God)

2. Jesus died on the _____

(cross, tree)

3. Jesus had _____ disciples.

(12, 10)

4. Good people will go to _____

(hell, heaven)

5. The parents of Jesus were _____ and _____

(Joseph, Mary, Ann, Adam)

6. Colour the following pictures

