

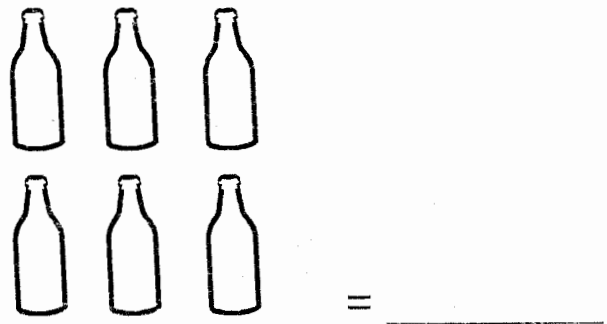
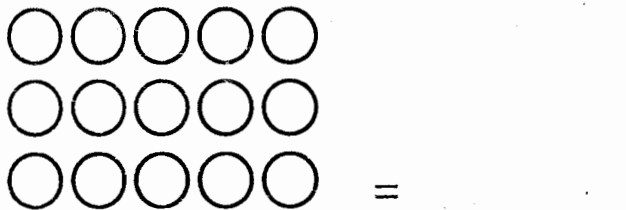

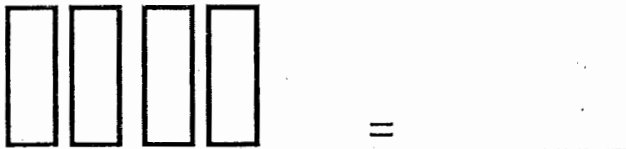
1. Match the following

0
2
3
10
4
1




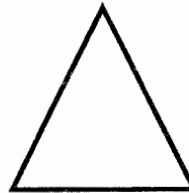
four
one
zero
two
three
ten

0 is connected to zero

2. Count and write



3. Colour the following shapes



4. Add

$1 + 1 =$ $2 + 1 =$

$3 + 2 =$ $3 + 0 =$

$4 + 1 =$ $2 + 2 =$

$5 + 1 =$