

Name:

Learner's Number

Gender: Boy

Girl

County Name: County Code:

Sub-County Name: Sub-County Code:

School Name: School Code:

TEACHER'S SCORING GUIDE

The grid below is to be filled by the teacher after making the learner's work.


	Level 1	Level 2	Level 3	Level 4
Section A:				
1-10				
Section B:				
11-25				

SECTION A


Write the position of these items.



First




Second



Third



Fourth



Fifth

1. The pencil is in the _____ position.
2. The hen is in the _____ position.
3. The tree is in the _____ position.

Write the missing numbers.

4. 101, 102, 103, _____, 105
5. 410, 420, 430, 440, _____

How many tens and ones.

6. 5 = _____ tens and _____ ones.
7. 84 = _____ tens and _____ ones.

Write the number.

8. Thirty four - _____
9. Fifty six - _____

Write the next number.

10. 7, 9, 11, 13, _____.

SECTION B

Addition.

$$\begin{array}{r} 11. \quad 34 \\ + \quad 4 \\ \hline \\ \hline \end{array}$$

$$\begin{array}{r} 12. \quad 28 \\ + \quad 32 \\ \hline \\ \hline \end{array}$$

13. Maria had **15** oranges. She bought **5** more oranges. How many oranges did she have altogether? _____

Subtract.

$$14. \quad 18 - 9 =$$

$$15. \quad 24 - 7 =$$

16.
$$\begin{array}{r} 39 \\ - 9 \\ \hline \\ \hline \end{array}$$

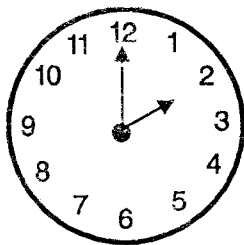
17.
$$\begin{array}{r} 56 \\ - 4 \\ \hline \\ \hline \end{array}$$

18. My hands have _____ gingers.

19. We are _____ pupils in Grade 3.

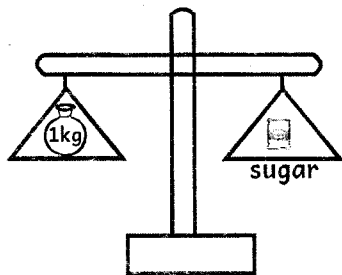
20. How many classrooms are in my school? _____

21. What is the time?



_____ O'clock.

22.



The mass of sugar is _____ kg.

23. Circle the shorter line _____



Geometry.

24. How many triangles are on the shapes below?



25. Complete the pattern.

