

Name \_\_\_\_\_

Learners Number

Gender

Boy

Girl

County Name \_\_\_\_\_ County code

Sub -County Name \_\_\_\_\_ Sub-county code

School Name \_\_\_\_\_ School code

### ASSESSMENT RUBRICS

The teacher to fill the grid below after marking the learner's work.

	Exceeds expectation	Meets expectation	Approaching expectation	Below expectation
Marks scored				


Write the missing numbers.

1. 35, 40, \_\_\_\_\_, \_\_\_\_\_, 55, 60


2. 70, 60, 50, \_\_\_\_\_, 30

Draw the shapes.


3. Triangle




4. Square



5. Oval



6. Zigzag



Add

7.  $16 + 4 =$  \_\_\_\_\_

8.  $35 + 2 =$  \_\_\_\_\_


Subtract

9. Take away 4 from 46.

10. Susan has 60 seedlings she planted 39 of the seedlings. How many seedlings is susan left with? \_\_\_\_\_

11. What is the place value of 5 in 510 \_\_\_\_\_

12. Write the number of dots \_\_\_\_\_



Add

13.  $47 + 10 =$  \_\_\_\_\_

14.  $89 + 40 =$  \_\_\_\_\_

Multiply


15.  $4 \times 6 =$  \_\_\_\_\_

16.  $10 \times 0 =$  \_\_\_\_\_


17.  $5 \times 3 =$  \_\_\_\_\_

What is the time according to the clock face.

18.



19.



Take away

20.  $48 - 13 =$  \_\_\_\_\_

21.  $56 - 5 =$  \_\_\_\_\_

22.  $17 - 5 =$  \_\_\_\_\_

Divide

23.  $9 \div 3 =$  \_\_\_\_\_

24.  $20 \div 14 =$  \_\_\_\_\_

25. One month has \_\_\_\_\_ weeks.