

Name _____

Learners Number

--	--	--	--	--

Gender

Boy

Girl

County Name _____

County code

--	--	--

Sub -County Name _____

Sub-county code

--	--	--	--

School Name _____

School code

--	--	--	--

ASSESSMENT RUBRICS

The teacher to fill the grid below after marking the learner's work.

	Exceeds expectation	Meets expectation	Approaching expectation	Below expectation
Marks scored				

Write the missing numbers.

- 1. 9, 7, 5, 3, _____
- 2. 22, 24, 26, _____
- 3. 35, 30, 25, 20, _____

Add


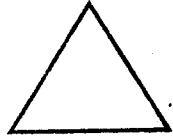
- 4. $2 + 7 + 3 =$ _____
- 5. $35 + 5 =$ _____
- 6. $83 + \quad = 85$
- 7.
$$\begin{array}{r} 56 \\ +3 \\ \hline \end{array}$$
- 8.
$$\begin{array}{r} 50 \\ +40 \\ \hline \end{array}$$

Take away

- 9. $10 - 3 =$ _____
- 10.
$$\begin{array}{r} 17 \\ -8 \\ \hline \end{array}$$
- 11. $8 - \square = 6$
- 12.
$$\begin{array}{r} 90 \\ -60 \\ \hline \end{array}$$
- 13. What is 13 take away 6? _____
- 14. How many tens and ones?
93 is _____ tens _____ ones.
- 15. $17 - \square = 9$
- 16. 85 is _____ tens _____ ones
- 17. Joy planted 60 trees, Juma planted 30 trees. How many trees did they plant altogether?

18. A class has 50 learners. Girls are 20. How many are boys?

Name the shapes

- 19.  _____
- 20.  _____

21. Use more than or less than

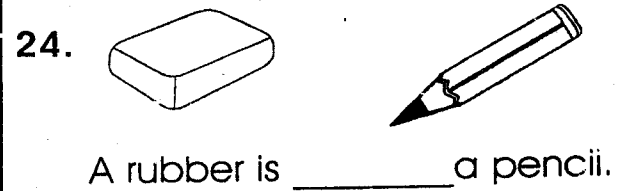



The tin holds _____ the sufuria.



The sufuria holds _____ the cup.

Write shorter than or longer than



25. **Write in words.**
8 _____