

Name \_\_\_\_\_

Learners Number

--	--	--	--	--

Gender

Boy

Girl

County Name \_\_\_\_\_

County code

--	--	--

Sub -County Name \_\_\_\_\_

Sub-county code

--	--	--	--

School Name \_\_\_\_\_

School code

--	--	--	--

### ASSESSMENT RUBRICS

The teacher to fill the grid below after marking the learner's work.

	Exceeds expectation	Meets expectation	Approaching expectation	Below expectation
Numbers (1-18)				
Measurement (19 - 21)				
Geometry (22-25)				

## NUMBERS

Write the next number

1. 2, 4, 6, \_\_\_\_\_ 10
2. 7, 9, 11, \_\_\_\_\_
3. 20, 18, 16, \_\_\_\_\_

Write in words

4. 3 \_\_\_\_\_
5. 7 \_\_\_\_\_
6. 5 \_\_\_\_\_

Add

7.  $14 + 3 =$  \_\_\_\_\_
8.  $21 + 7 =$  \_\_\_\_\_

9. 
$$\begin{array}{r} 15 \\ + 5 \\ \hline \end{array}$$

10. 
$$\begin{array}{r} 62 \\ + 3 \\ \hline \end{array}$$

11.  $63 + 2 =$  \_\_\_\_\_

12.  $6 + 1 + 2 =$  \_\_\_\_\_

13.  $27 + 12 =$  \_\_\_\_\_

14. 
$$\begin{array}{r} 22 \\ + 14 \\ \hline \end{array}$$

Take away


15.  $7 - 6 =$  \_\_\_\_\_      16.  $35 - 9 =$  \_\_\_\_\_

17. 
$$\begin{array}{r} 9 \\ - 4 \\ \hline \end{array}$$

18. 
$$\begin{array}{r} 39 \\ - 6 \\ \hline \end{array}$$

## MEASUREMENT

19. Which one is heavier



Stone

Pencil

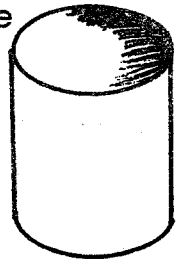
20. Which one holds less?



A

B

21. Which one holds more




A

B

## GEOMETRY

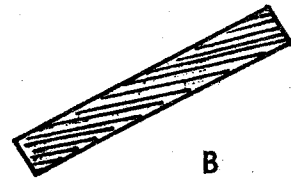
22. Which one is longer



A

B

23. Which one is shorter



A

B

Circle  $\frac{1}{2}$  where a half is shaded

