

**READ THESE INSTRUCTIONS CAREFULLY.**

1. You have been given this question paper and a separate answer sheet. The question paper contains 50 questions.

2. Make sure that you have written on the answer sheet.

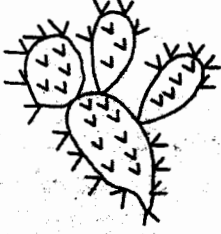
(i) Your name

(ii) Name of your school

- An adult has \_\_\_\_\_ teeth.  
A. 20                      B. 32  
C. 8                         D. 42
- A caterpillar protects itself by  
A. running away  
B. hiding in the shell  
C. using prickly hairs  
D. changing the colour
- The following are good behaviours when having meals. Which one is **not**?  
A. Chewing food properly  
B. Sitting uprightly when eating  
C. Avoid licking fingers  
D. Chewing with open mouth

4. The tooth drawn below is used for

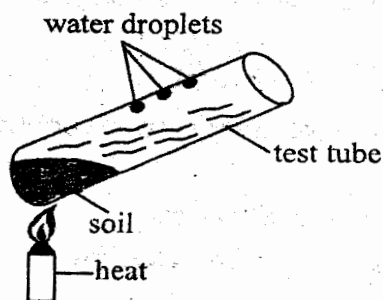


- tearing food
  - chewing food
  - cutting food
  - biting and grinding food
- Which one of the following is the meaning of letter D in AIDS?  
A. To have  
B. Protected from  
C. many signs  
D. To be without
  - Std 5 pupils come across the plant drawn below during their nature walk.  
  
The plants grows in \_\_\_\_\_  
A. dry areas  
B. wet areas  
C. water  
D. rainy areas
  - The clouds that are found low in the sky also:  
A. brings heavy rains  
B. indicate fair weather  
C. are feathery  
D. have flat base
  - Which one of the following weeds below is used as vegetable?  
A. Thorn apple  
B. Pig weed  
C. Black jack  
D. Sodom apple
  - Which one of the crop below is a legume?  
A. Sorghum                      B. Barley  
C. Greengrams                 D. Millet
  - Which one of the following is not a problem of the teeth?  
A. Tooth cavity                 B. Decay  
C. Bleeding gum                 D. Swollen lips

11. The phase of the moon drawn below is called



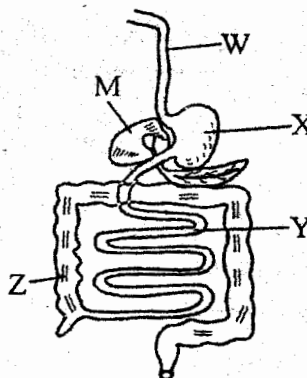
- A. new moon                      B. full moon  
C. crescent                      D. waxing moon
12. Which pair of teeth is used for the same function?
- A. Canine and incisor  
B. Premolar and molar  
C. Premolar and canine  
D. Molar and incisor
13. Which one of the following is **not** a requirement for good health?
- A. Exercise                      B. Sleep  
C. House                      D. Rest
14. Which of the following is **not** a reason why animals move?
- A. Escape predator  
B. To make food  
C. Look for shelter  
D. Look for water
15. The following are all poultry **except**
- A. Turkey                      B. Ducks  
C. Goose                      D. Ostrich
16. Which one of the following groups of food is made up of body building foods only?
- A. Beans, maize, irish potato  
B. Eggs, milk, beans  
C. Sorghum, avocado, beef  
D. Fish, yams, arrowroot
17. The diagram below shows an experiment done by grade 4 pupils to investigate a certain soil component



Which component were they investigating?

- A. Water                      B. Humus  
C. Air                      D. Living things
18. Which tool is used to sharpen a knife?
- A. Hoe                      B. Panga  
C. File                      D. Wood
19. Which soil is used in making the pot?
- A. Sand                      B. Silt  
C. Loam                      D. Clay
20. Which one of them following is **not** part of human breathing system?
- A. Trachea                      B. Lungs  
C. Gullet                      D. Diaphragm

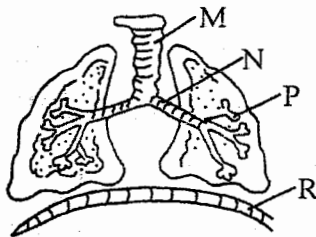
The figure below shows digestive system. Use it to answer quesitons 21 to 22.



21. Absorption of food takes place in the part marked
- A. X                      B. Y  
C. Z                      D. W
22. Proteins are digested in the part marked
- A. X                      B. Y  
C. Z                      D. W
23. Which one of the following is **not** a way of maintaining simple tools?
- A. Cleaning after use  
B. Sharpening  
C. Safe storage  
D. Proper use
24. The amount of medicine to be taken at one given time is known as:
- A. prescription                      B. dose  
C. first aid                      D. drug

25. The excess medicine that remains after completing the dose should be  
 A. given to neighbour  
 B. kept for later use  
 C. destroyed  
 D. taken back to hospital
26. The type of medicine given to a sick person to treat a known illness is called  
 A. curative                      B. painkiller  
 C. vaccine                        D. saviour
27. HIV virus are easily transmitted from an infected person to a healthy person through  
 A. utensils                      B. food  
 C. air                                D. body fluids
28. Which one of the following is not a green plant?  
 A. Mushrooms                B. Cactus  
 C. Pine                              D. Sugar cane
29. The air we breath in is mainly cleaned in  
 A. mouth                        B. lungs  
 C. nose                            D. diaphragm

The diagram below shows a human breathing system. Use it to answer questions 30 and 31.



30. The part marked R is called  
 A. ribs                              B. lungs  
 C. trachea                        D. diaphragm
31. In which part shown above does the exchange of gases take place?  
 A. M                                B. P  
 C. N                                D. R
32. A tongue is used for  
 A. chewing food  
 B. making noise  
 C. tasting food  
 D. smelling food











33. Which group comprises of tubers only  
 A. Irish potato, arrowroot, millet  
 B. avocado, tomato, guava  
 C. Sorghum, millet, oats  
 D. Yams, carrot, cassava
34. Which one of the following is not a special sound?  
 A. Car hooting  
 B. Ambulance siren  
 C. Thunder storm  
 D. School bell ringing
35. Clothes dry fastest when the weather is  
 A. calm and cloudy  
 B. sunny and windy  
 C. windy and rainy  
 D. hot and calm
36. The daily condition of the atmosphere at a given place at a particular time is called  
 A. environment  
 B. weather  
 C. temperature  
 D. surrounding
37. What is the name of the weed drawn below.



- A. oxalis  
 B. pigweed  
 C. sodom apple  
 D. wandering jew
38. The shortest shadow is likely to be seen  
 A. 8.00 am                      B. 8.00 pm  
 C. 12.00 noon                D. 5.00 pm
39. The following are uses of water for enjoyment **except**  
 A. boat rowing  
 B. sport fishing  
 C. swimming  
 D. carrying goods

40. Which one of the following is a wild animal?
- A. Dog                      B. Cat  
C. Camel                    D. Fish

The table below shows a weather chart use it to answer question 41 and 42.

	Morning	Afternoon
Monday		
Tuesday		
Wednesday		
Thursday		
Friday		

41. Which day was rainy throughout?

- A. Friday  
B. Tuesday  
C. Thursday  
D. Wednesday

42. What was the kind of the weather on Wednesday

- A. sunny and cloudy  
B. sunny and calm  
C. rainy and windy  
D. sunny and windy

43. The animal drawn below moves by



- A. slithering                      B. gliding  
C. crawling                        D. biting

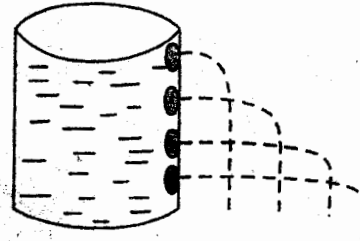
44. Which digestive juice is produced in the mouth?

- A. Starch  
B. Gastric juice  
C. Saliva  
D. Bile juice

45. Water and minerals are absorbed in part of alimentary canal called:

- A. stomach                      B. large intestine  
C. small intestine              D. rectum

46. The set up below was used by class 5 pupils



What did they conclude:

- A. Pressure in liquid decreases with height  
B. Liquids exerts pressure in all directions  
C. Pressure in liquids is equal at the same depth  
D. Holes throw out water differently in a container

47. The second stage of HIV infection is called

- A. window stage  
B. asymptomatic  
C. symptomatic  
D. full blown AIDS

48. Which is the most dangerous stage of HIV infection?

- A. Window stage  
B. Incubation  
C. Symptomatic stage  
D. Full blown AIDS

49. Which tool is used for cutting timbers?

- A. Saw                              B. Panga  
C. Jembe                          D. Ladder

50. What happens to the ribs when you breath in?

- A. Ribs move downwards and inwards  
B. Ribs flattens  
C. Ribs expands  
D. Ribs move upwards and outwards