

Name \_\_\_\_\_

Learners Number 

--	--	--	--	--

Gender                      Boy                       Girl

County Name \_\_\_\_\_ County code 

--	--	--

Sub -County Name \_\_\_\_\_ Sub-county code 

--	--	--	--

School Name \_\_\_\_\_ School code 

--	--	--	--

**ASSESSMENT RUBRICS**

The teacher to fill the grid below after marking the learner's work.

	Exceeds expectation	Meets expectation	Approaching expectation	Below expectation
Marks scored				

1. Name two crops grown for food at home. (2 marks)  
(i) \_\_\_\_\_  
(ii) \_\_\_\_\_

2. A cactus plant grow in the \_\_\_\_\_ area. (1 mark)

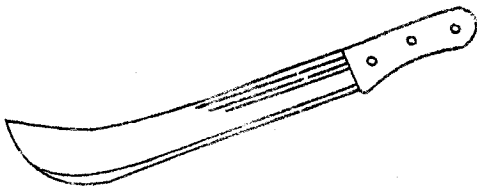
3. When sweeping our classrooms we use \_\_\_\_\_ (1 mks)

4. Moving air is called \_\_\_\_\_ (1 mks)

5. A human being has \_\_\_\_\_ common senses. (1 mks)

6. The doctor who treats our teeth is called \_\_\_\_\_ (1 mks)

7. The tool drawn below is called



\_\_\_\_\_

8. The natural place where a plant grow is called \_\_\_\_\_ (1 mks)

9. Classify the following animals as either domestic or wild animals.

**Eagle, Elephant, Dog, Hen, Donkey, Hare**

(6 mks)

Domestic animal	Wild animal
_____	_____
_____	_____
_____	_____

10. Name **four** characteristics of plants as living things (4mks)

(i) \_\_\_\_\_

(ii) \_\_\_\_\_

(iii) \_\_\_\_\_

(iv) \_\_\_\_\_

11. We irrigate our crops during \_\_\_\_\_ season. (1mks)

12. Name **three** uses of water at home. (3mks)

(i) \_\_\_\_\_

(ii) \_\_\_\_\_


(iii) \_\_\_\_\_

13. We clean our hands using \_\_\_\_\_ and \_\_\_\_\_ (3 mks)

14. Which soil has big particles when felt between fingers? \_\_\_\_\_  
(loam, sand, clay)

15. Loam soil is **best** used for \_\_\_\_\_ (1mks)  
(farming, building, modelling)

16. The figure below shows a house for




\_\_\_\_\_

17. Which plant do we eat roots? (1 mks)  
(cabbage, carrots, sugarcane)

18. Farmers keep cows for  
(i) \_\_\_\_\_  
(ii) \_\_\_\_\_

19. The diagram below indicates a \_\_\_\_\_ days. (1 mks)



20. We wear gumboots when the weather is \_\_\_\_\_ (1 mks)