

Name _____

Learners Number

--	--	--	--	--

Gender

Boy

Girl

County Name _____

County code

--	--	--

Sub -County Name _____

Sub-county code

--	--	--	--

School Name _____

School code

--	--	--	--

TEACHER'S SCORING GUIDE

The teacher to fill the grid below after marking the learner's work.

	Exceeds expectation	Meets expectation	Approaching expectation	Below expectation
SECTION A	Level 1	Level 2	Level 3	Level 4
1 - 27				
SECTION B				
28 - 36				

1. The **two** kinds of things in the environment are:

(a) _____

(b) _____

2. The things that eat, breathe and grow are called?

3. Things that do not eat, breathe or grow are called?

4. Plants feed by making their own food through a process called _____.

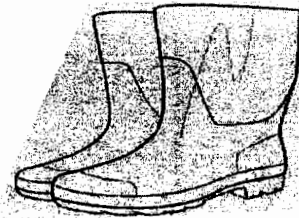
5. During the day green plants take in part of the air called _____ and gives out _____.

6. Boys planted cooked maize and beans seeds in soil, did the seed germinate?

7. When a plant grow it moves in the direction of.

8. What is the name of the items drawn below.

(a)



(b)



9. The animals kept at home are called _____.

10. Name **four** domestic animal that you know.

(a) _____

(b) _____

(c) _____

(d) _____

11. Animals that feed on plants are called.

12. The animals that feed on meat only are called?

13. Several young ones born at the same time to the same mother are known as

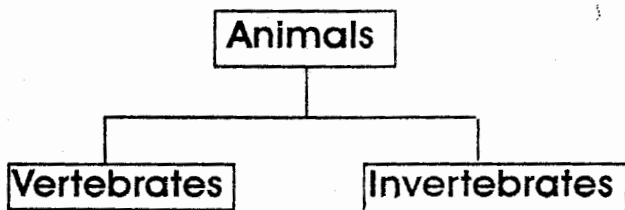
14. Ducks reproduce by

15. The solid wastes removed by animals is called _____

16. A dog removes its tongue and pants when the weather is

17. The animals with backbone are called _____

18. Fill the chart below

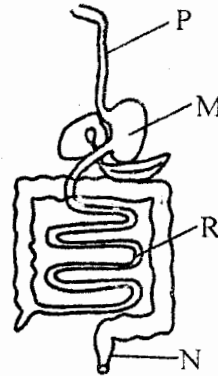


- | | |
|-----------|-----------|
| (a) _____ | (a) _____ |
| (b) _____ | (b) _____ |
| (c) _____ | (c) _____ |

(dog, hen, snail, butterfly, grasshopper man)

19. The breaking down of food into small particles that are absorbed by our bodies is called _____

The figure below shows digestive system



(small intestine, rectum, food pipe or trachea, oesophagus, stomach)

20. Name the part marked

- P _____
- M _____
- R _____
- N _____

21. Digestion of food starts in the _____ and ends in the _____

22. The large intestines are also called _____

23. Human being has _____ types of teeth.


(4, 32, 20)

24. The type of tooth drawn below is called _____



25. Which type of tooth is used for biting food

26. **Draw a molar**



27. Write **three** types of food that are harmful to our teeth

- (a) _____
- (b) _____
- (c) _____
- (d) _____
- (e) _____

AGRICULTURE

28. The **three** major types of soils are

- (a) _____
- (b) _____
- (c) _____

29. Which is the **best** soil for farming? _____

30. Which soil has very fine particles?

31. Which soil keeps a lot of water for a long time?

32. Which soil is likely to be found in areas that flood easily after rains?

33. The type of manure made from plants and kitchen wastes is called

34. State **four** uses of water in the farm.

- (a) _____
- (b) _____
- (c) _____
- (d) _____

35. The **best** method of irrigation that saves water is called

36. Draw the drip irrigation in space below.

