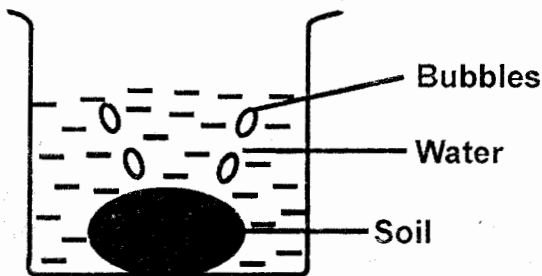


1. The sharp and pointed teeth next to the incisors are used for
 - A. cutting food
 - B. tearing food
 - C. grinding food
 - D. biting food.
2. Which one of the following is an energy giving food?
 - A. Beans
 - B. Vegetables
 - C. Pineapple
 - D. Maize
3. Which food is digested in the mouth?
 - A. Proteins
 - B. Starch
 - C. Fats and oils
 - D. Vitamins
4. The following are uses of light **except**
 - A. taking photographs
 - B. controlling traffic
 - C. to see clearly
 - D. warming the house.
5. Which sense organ helps us to tell the size of an object?
 - A. Sight
 - B. Eyes
 - C. Touch
 - D. Nose
6. A goat provide all the following products **except**
 - A. wool
 - B. mohair
 - C. milk
 - D. mutton
7. Pupils carried out the experiment below.



- What were they investigating?
 - A. Water in the soil.
 - B. Air in the water.
 - C. Soil in the air.
 - D. Air in the soil.
8. In the initial AIDS, the letter "**S**" means
 - A. group of signs and symptoms.
 - B. to be without.
 - C. to be protected.
 - D. to have.
9. Which group of objects below sinks in water?
 - A. Paper, stone, rice.
 - B. Wool, coin, marble.
 - C. Glass, marble, sand.
 - D. Pin, cork, feather.
10. Which one of the following is **not** a weed?
 - A. Oxalis
 - B. Pig weed
 - C. Sorghum
 - D. Black jack
11. Which type of soil makes the shortest ribbons?
 - A. Loam
 - B. Clay
 - C. Sand
 - D. Silt
12. The dark grey clouds that often bring rain are also
 - A. low in the sky
 - B. flat based
 - C. feathery
 - D. high in sky

13. The diagram below shows a simple tool.



Which one of the following is **not** true about the tool above?

- A. Used for cutting.
- B. Maintained by sharpening.
- C. It is made of metal and wooden handle
- D. should be oiled and greased to reduce friction.

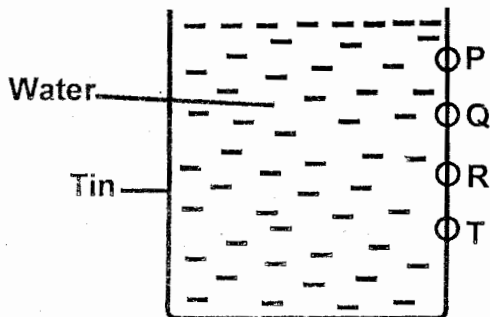
14. Boat rowing is a use of water in

- A. recreation
- B. homes
- C. industries
- D. farms

15. The **best** method of controlling weeds in a nursery bed is

- A. use of chemical
- B. uprooting
- C. digging out
- D. slashing.

16. Std 4 pupils did the experiment below.



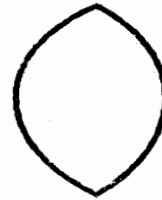
Which hole jetted water the nearest?

- A. P
- B. Q
- C. R
- D. T

17. How many molars are there in an adult human being?

- A. 20
- B. 32
- C. 8
- D. 12

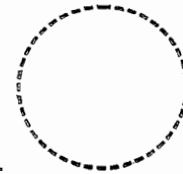
18. Which phase of the moon shows new moon?



A.



B.



C.



D.

19. Which animals below is domestic?

- A. Horse
- B. Ostrich
- C. Hare
- D. Gazelle

20. Which food below is used to repair worn out tissues in the body?

- A. Honey
- B. Cabbage
- C. Carrots
- D. Beans

21. The natural place where a plant is growing is its

- A. environment
- B. habitat
- C. surrounding
- D. bush.

22. Which one of the following is **not** a method of maintaining simple tools?

- A. Safe storage.
- B. Proper use.
- C. Oiling and greasing.
- D. Sharpening.

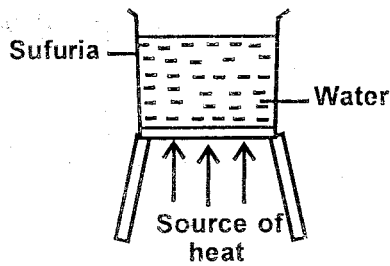
23. The diagram below shows a tooth related problem.



The problem of the tooth above is known as

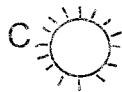
- A. cavity
- B. bleeding gum
- C. decay
- D. bad breath

24. Class 5 pupils did the experiment below



- A. sources of water.
- B. making water safe for drinking.
- C. playing with water.
- D. uses of water

25. The best weather for drying grains is



- 26. Organic matter in soil is made up of
 - A. water and air
 - B. sand and mineral salts
 - C. plants and animals waste
 - D. stones and dead animals.

27. Which crop below is classified as a vegetable and a tuber?

- A. Cabbage
- B. Carrots
- C. Yams
- D. Tomatoes

28. Which of the following activities is not carried out during the dry season?

- A. Weeding
- B. Ploughing
- C. Harvesting
- D. Irrigation

29. Digestion of food starts in the _____ and ends in the _____

- A. mouth, anus
- B. stomach, anus
- C. mouth, small intestines
- D. stomach, large intestines.

30. In human breathing system the exchange of gases takes place in the part called

- A. nose
- B. diaphragm
- C. lungs
- D. trachea

31. A small piece of metal sink while a large piece of wood floats on water. This is due to their difference in _____

- A. shape
- B. size
- C. weight
- D. materials


32. A frog moves by

- A. crawling
- B. hooping and leaping
- C. slithering
- D. walking

33. We breath in air by the help of

- A. mouth
- B. nose
- C. trachea
- D. lungs

34. The farm tool drawn below is used for

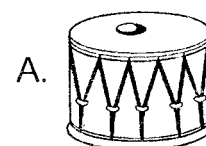


- A. lifting heavy loads
- B. climbing high places
- C. carrying heavy loads
- D. cutting woods

35. The best soil for modelling is

- A. sand
- B. loam
- C. silt
- D. clay

36. Which one of the following produces sound when blown?



37. The **best** method of transporting water in town is by using
- A. animals B. dams
C. pipes D. tankers
38. Which one of the following is an importance of exercising?
- A. To become young.
B. To gain strength.
C. To feed well.
D. To improve our health.
39. Which group of crops below are all oil crops?
- A. Simsim, sunflower, sisals.
B. Yams, arrow roots, groundnuts.
C. Maize, coconuts, tea.
D. Coconuts, simsim, sunflower.
40. Which one of the following animals is **not** poultry?
- A. Duck B. Turkey
C. Ostrich D. Goose
41. Which one of the following **cannot** cause death in animals?
- A. Old age
B. Diseases
C. Accidents
D. Good health
42. Which statement below is **not** correct about all the animals?
- A. They breath.
B. They give birth.
C. They feed.
D. They remove wastes.
43. The following are personal items except
- A. socks
B. handkerchief
C. desks
D. underwear
44. The following are sources of water **except**
- A dam B. well
C. rain D. tank
45. The exchange of gases takes place in the _____.
- A. trachea
B. airsacs
C. nose
D. bronchioles
46. Making fountains is use of water in
- A. farms
B. industries
C. recreation
D. transport
47. Which one of the following is a translucent material?
- A. Milk
B. Air
C. Mirror
D. Oiled paper
48. The **main** source of light is
- A. stars B. moon
C. sun D. fire
49. Which animals below change colour to hide from the enemies?
- A. Housefly
B. Shake
C. Wasp
D. Chameleon
50. Which soil cracks when dry?
- A. Clay
B. Loam
C. Sand
D. Mixture of sand and loam.