

Name _____

Learners Number

Gender Boy Girl

County Name _____ County code

Sub -County Name _____ Sub-county code

School Name _____ School code

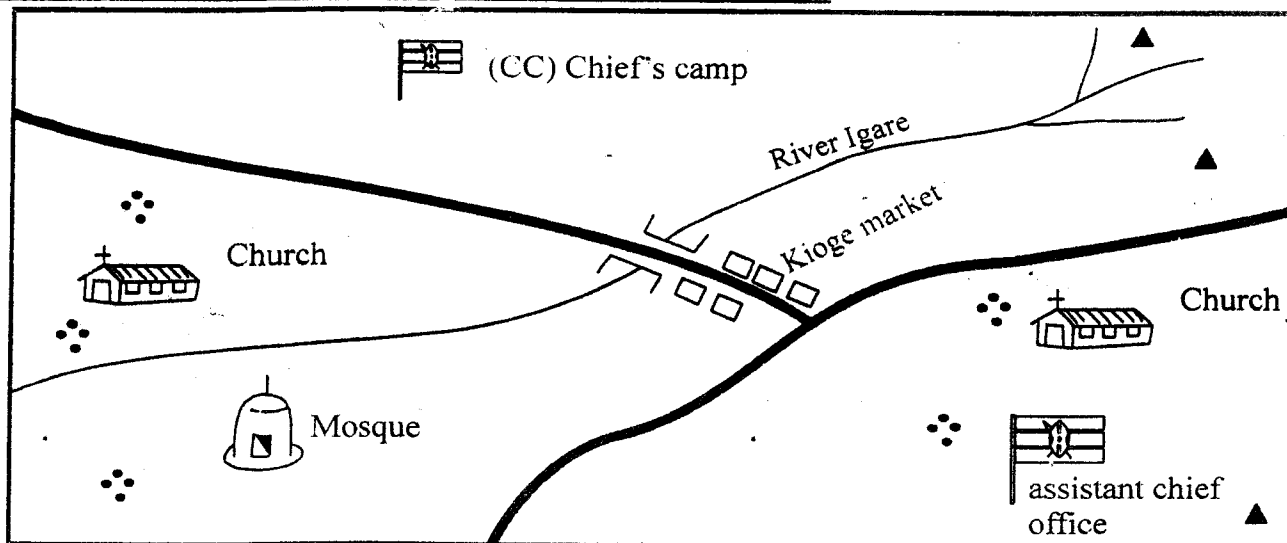
ASSESSMENT RUBRICS

The teacher to fill the grid below after marking the learner's work.

	Exceeds expectation	Meets expectation	Approaching expectation	Below expectation
SECTION A (SST)				
SECTION B (CRE)				
SECTION C (IRE)				

KIOGE AREA

Study the map of Kioge area and use it to answer questions 1 - 4




Settlement
 Bridge
 Road
 Hill

1. There are _____ rivers in kioge area _____
 2. The **best** means of transport in the area is by _____
(water, road, railway)
 3. Who is the head of kioge area?

 4. How many bridges are there in kioge area? _____
 5. The direction marked **K** in the figure below is _____
-
6. The rivers which flow throughout the year are called _____
(permanent, seasonal, plenty)
 7. The change in the air around us is called.
(weather, temperature, rainfall)
 8. A _____ treats sick people in our country _____
 9. The Aembu, Agikuyu, Taita and kamba are all _____
(nilotes, semites, bantus, cushites)
 10. The president of Kenya is called _____
 11. The sun rises in the _____
 12. Coffee, tea, sisal and wheat are all called _____
(food crops, cash crops, food)
 13. The physical feature below is called a _____
-
14. The way of life of the people in a community is called _____
(religion, culture, worship)

15. The meat of a cow is called

16. The roof of this traditional house is made of _____



17. The fastest means of transport is by

18. The top colour on our flag is

19. The _____ help to maintain law and order in our country.

(president, governor, police)

20. Cows, goats, sheep and donkeys are all _____ animals.

21. If I stand facing west, my back is facing _____


22. The head of a school is called

23. The area of very wet land is called

a _____

(swamp, plain, valley)

24. This is a _____



25. The black colour in the national flag stands for

26. People who grow crops are called

27. The people who live next to our home are our _____

28. People travelling by bus are called

29. Drivers in Kenya keep _____ mostly on the road.

(right, left, north, west)

30. This road sign shows that there is a

_____ nearby.



SECTION B

CHRISTIAN RELIGIOUS EDUCATION

1. We speak to God through _____
2. _____ build the ark.
3. The first woman to be created by God was _____
4. Zacheaus was a _____ collector.
5. Adam and Eve lived in the garden of _____
6. Jesus feed 5,000 men with five loaves of bread and _____ fish
7. Write one gospel book _____
8. _____ was swallowed by big fish.
(Noah, Jonah)
9. Who taught the Lords prayer _____
(Jesus, John)
10. Jesus changed water into _____

SECTION B

ISLAMIC RELIGIOUS EDUCATION

1. The prophet had _____ sons.
2. The second pillar of Islam is _____
3. The prayer are led by _____
4. We pray _____ rakaas per day.
5. How many prophets are mentioned in the Quraan _____
6. The first month in the Islamic calender is _____
7. There are _____ pillars of Iman.
8. While drinking we should pause times _____
9. Kauthar means _____
10. While praying we face _____