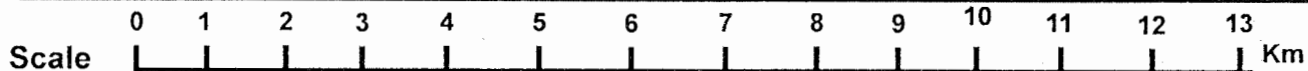
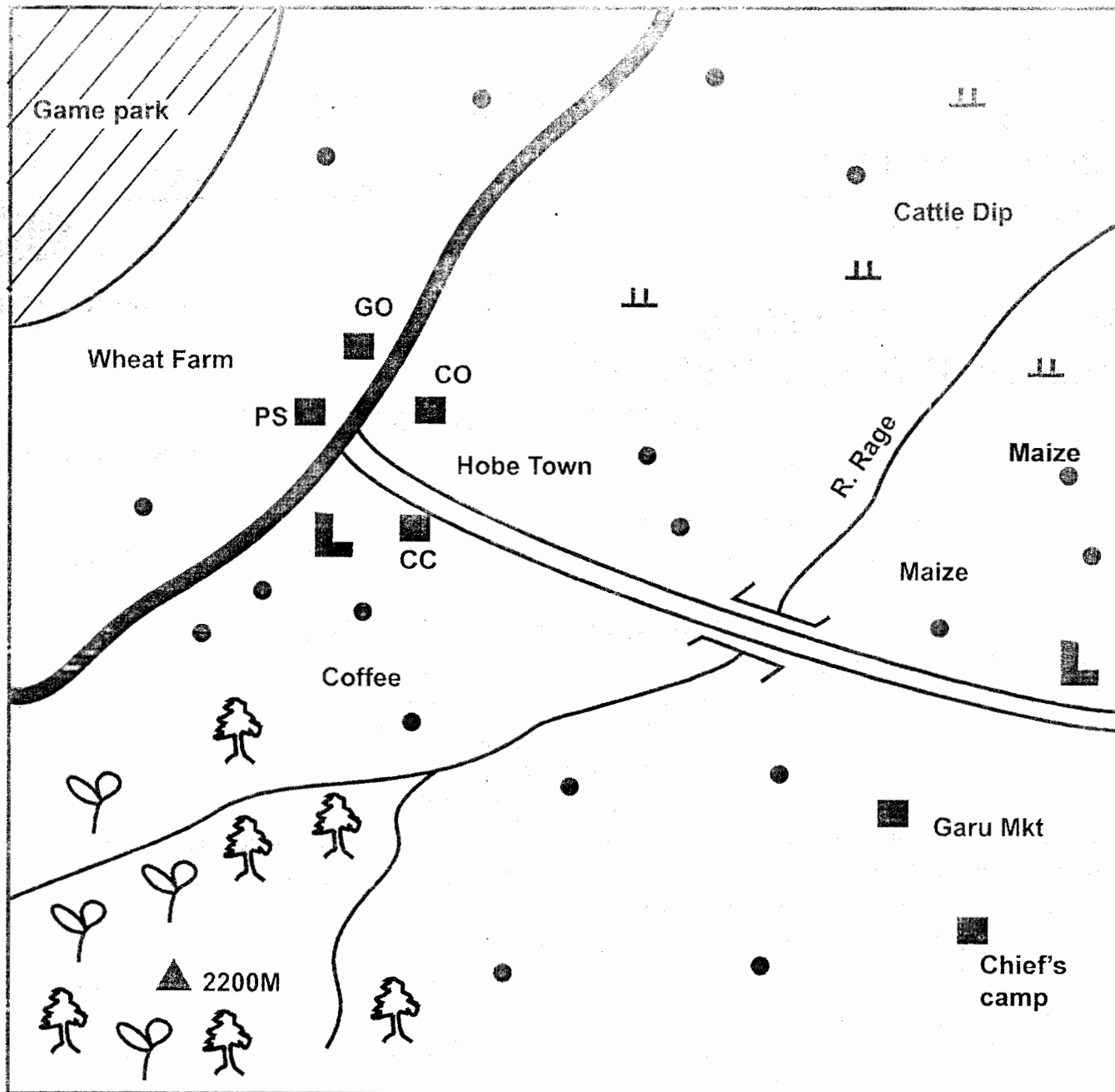


# GOSA AREA



## KEY

	Tea Farms		Settlements	CO	County Offices
	Tarmac Road	GO	Governor's Office		Planted Forest
	Murram Road	CC	County Commissioner		Grass
	Build-up areas	PS	Police Station		School

77. The first person to meet the resurrected Christ was  
 A. Cleopas B. Mary Magdalene  
 C. Peter D. Thomas
78. The disciples went back to Jerusalem after the ascension of Jesus to  
 A. wait for the coming of the Holy Spirit.  
 B. preach in the temple.  
 C. baptise new converts.  
 D. drive traders from the temple.
79. The reason why Stephen was stoned to death by the Jews was that he  
 A. refused to pay taxes  
 B. mixed with sinners  
 C. preached in the name of Jesus  
 D. worked on the Sabbath.
80. The Ethiopia Eunuch riding on a chariot was baptized by  
 A. Philip B. Peter  
 C. Paul D. Stephen
81. Which one of the following books is Gospel?  
 A. Ephesians B. Mark  
 C. Judge D. Acts
82. Some people in Traditional African communities pray facing mountains because they are  
 A. burying places for ancestors  
 B. high  
 C. considered sacred  
 D. forested
83. Which one of the following statements about prayers in traditional African communities is **correct**? They are  
 A. said through ancestors  
 B. read from books  
 C. read at fixed times  
 D. written on paper
84. People in traditional African communities ask for forgiveness from God through  
 A. shaking hands  
 B. offering sacrifices  
 C. skipping meals  
 D. wearing torn clothes
85. In traditional African societies, people show respect to unborn life through  
 A. reading the scriptures  
 B. dressing pregnant women in special clothes  
 C. exempting pregnant women from heavy work.  
 D. taking pregnant women to hospital.
86. The **best** way of serving the community for pupils during school holiday is  
 A. visiting and helping the aged  
 B. organizing birthday parties  
 C. reading story books at home.  
 D. playing games.
87. When Christians donate food to the needy it shows that  
 A. they have plenty of food  
 B. the needy people are their relatives  
 C. they are obeying the law  
 D. they are doing the will of God.
88. The Church has established schools in the country in order to  
 A. offer free medical services  
 B. promote literacy and good health in the society  
 C. get money to build churches  
 D. create employment in the country
89. The parents of Dorcas, a standard seven pupil do not go to church. The **best** action for her to take is  
 A. tell a church elders to talk to them  
 B. to go and live with her aunt  
 C. buy a Bible for them  
 D. run away from home.
90. The first Missionary school was established at  
 A. Thogoto in Kikuyu  
 B. Mangu near Thika  
 C. Rabai near Mombasa  
 D. Maseno in Kisumu

## SECTION II

### ISLAMIC RELIGIOUS EDUCATION

61. Who among the following caliphs of Islam was known as Assidiq?  
 A. Umar B. Uthman C. Abubakr D. Ali
62. Which one among the following surahs of the Quran talks about oneness of Allah?  
 A. Ikhlas B. Fatiha C. Falaq D. Kauthar
63. Which one among the following is not one of the signs of a hypocrite?  
 A. Telling lies B. Untrustworthy  
 C. Not fulfilling promises D. Backbiting
64. Which one of the following festivals takes place during the month of Rabiul-Awwal?  
 A. Idd-ul-fitr B. Milad-un-Nabii  
 C. Isra-wal-Miraj D. Aqiiqa
65. According to the hadith of the prophet (s.a.w), if a person wants to be loved by Allah (s.w) he/she should \_\_\_\_  
 A. pray a lot  
 B. fast everyday  
 C. love other people  
 D. keep off people's affairs
66. Which one of the following terms refers to cheating in business?  
 A. Hoarding B. Ghush  
 C. Riba D. Usury
67. Which one of the following animals is haram for a Muslim to eat?  
 A. Elephant B. Zebra  
 C. Cow D. Pig

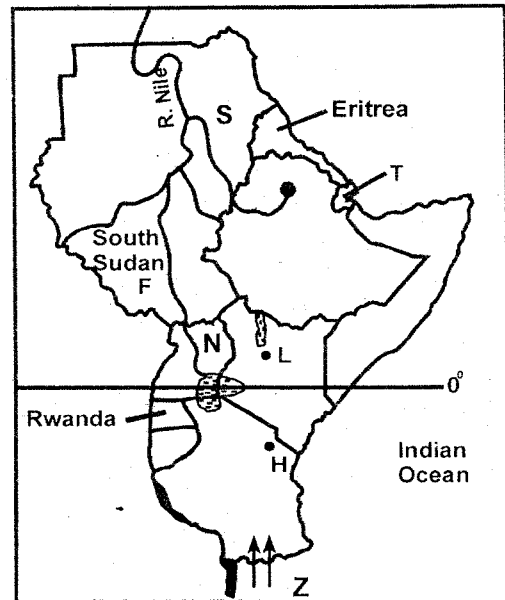
68. Which one of the following was the main reason why Iblis was cursed by Allah (s.w)?  
 A. He was stubborn  
 B. He refused to be a Muslim  
 C. He was proud  
 D. Allah (s.w) did not like him.
69. "We created man in the best shape and mould." The above quotation is a verse from surah  
 A. Tiin B. Humaza C. Alaq D. Kauthar
70. Which one of the following is a verse from surah Al-Ikhlās?  
 A. "You alone we worship and seek for help"  
 B. "To you be your religion and to me my religion"  
 C. "Woe to every slanderer and backbiter."  
 D. "Say He is Allah the one"
71. What action should you take if your close friend starts abusing drugs?  
 A. Join him  
 B. Report him to the classteacher  
 C. Inform all your friends  
 D. Explain to him why drugs are haram
72. Which one of the following surahs is known as the mother of Quran?  
 A. Falaq B. Fatiha C. Nas D. Humaza
73. Farouq a standard Seven boy ate biscuits accidentally during the day of Ramadhan. What was the correct course of action for him to take?  
 A. Continue fasting  
 B. Ask for Allah's forgiveness  
 C. Rinse his mouth and continue fasting  
 D. Complete eating and continue fasting.
74. How many signs does a Munafiq have according to the hadith of the prophet (s.a.w)?  
 A. Four B. Two C. Three D. Five
75. Mohammed, who is a businessman in a local trading centre gave these his secrets to success. Which one of them is against teaching of Islams?  
 A. Weighing goods accurately.  
 B. Lending money to charge interest.  
 C. Issuing receipts when selling  
 D. Selling goods on credits
76. Which one of the following attributes of Allah (s.w) means 'the giver' ?  
 A. Al-wahhab B. Al-Razzaq  
 C. Al-Muhaimin D. Al-Musawwir
77. Amina a standard four girl heard her teacher sneeze. What should Amina say?  
 A. Alhamdulillah B. Subhanallah  
 C. Jazakallah D. Yarhamkallah
78. Who among the following angels of Allah (s.w) is in charge of paradise?  
 A. Mekail B. Ridhwan  
 C. Izrai D. Malik
79. Which one of the following diseases is incurable?  
 A. Malaria B. Cancer  
 C. HIV/AIDS D. Cholera
80. Fasting during the month of Ramadhan promotes three of the following except  
 A. Sympathy B. Self-discipline  
 C. Good health D. Appetite
81. Which month did the journey of Isra-wal-miraj take place?  
 A. Rajab B. Ramadhan  
 C. Dhul-hajj D. Shaban
82. Which one of the following is the correct nisab for goat and sheep?  
 A. 40 B. 30 C. 20 D. 5
83. Which one of the following is **not** a function of a Mosque?  
 A. Performing prayers B. Islamic lectures  
 C. Islamic weddings D. Selling of Kanzu
84. Rehema a standard eight got the news that her friend Maimuna had been admitted in hospital. What was the correct action for her to take?  
 A. Visit Maimuna in hospital.  
 B. Ask Allah (s.w) to forgive her sins.  
 C. Buy good flowers and snacks.  
 D. Inform her classmates to make contribution.
85. Who among the following prophets of Allah (s.w) suffered from a strange disease?  
 A. Ibrahim B. Nuh  
 C. Ayub D. Mohammad
86. The **main** reason why begging is discouraged in Islam is  
 A. it makes some people rich.  
 B. it promotes laziness.  
 C. it is a good form of worship.  
 D. it can cause one to go to hell.
87. Which one of the following is the mother of all sins?  
 A. Murder B. Fighting  
 C. Zina D. Alcohol
88. During which month was the holy Quran revealed?  
 A. Ramadhan B. Muharram  
 C. Shaban D. Rajab
89. Which year was the treaty of Hudaibiyah signed?  
 A. 9 A.H B. 9 A.H  
 C. 10 A.H D. 6 A.H
90. The first female Muslim martyr was  
 A. Maimuna B. Sumaya  
 C. Maryam D. Maryam

Use the map of Gosa area above to answer questions 1 to 7.

- The administrative head of Gosa area is a
  - county commissioner
  - governor
  - county office
  - the chief.
- A forest was established in Gosa area **mainly** to
  - provide timber for building houses
  - attract rainfall in the area
  - make the landscape beautiful
  - protect sources of river.
- The general slope of land in Gosa area is from
  - North to South
  - South West to North East
  - North East to South West
  - South to North.
- Which one of the following economic activities is carried out in the North Eastern part of Gosa area?
  - Lumbering
  - Livestock keeping
  - Mining
  - Tourism
- Tea is grown in the South Western part of Gosa area **mainly** because the area
  - is hilly
  - has a tea processing factory
  - experiences cool and wet climate
  - has good roads for transporting tea.
- Which one of the following facilities is the **most** important to build in Hobe town?
  - A stadium
  - An airstrip
  - A hospital
  - A library
- Which one of the following is a food crop grown in Gosa area?
  - Maize.
  - Bananas.
  - Tea.
  - Coffee.
- Which one of the following statements **correctly** describes the continent of Africa?
  - It lies in the Southern hemisphere.
  - It lies to the West of the Atlantic Ocean.
  - It is crossed by the three main tropics.
  - The largest part is a lowland plain.
- A school routine is prepared in order to
  - outline the roles of teachers
  - enable pupils behave well
  - prepare pupils for school test
  - allocate time for school activities.
- Bananas are grown around lake Victoria in Uganda because
  - the lake provides water for irrigation
  - bananas are in great demand in the area
  - bananas are the main staple food
  - the area has good climate for bananas growing.
- Which one of the following statements about the political organization of the Nyamwezi people before the coming of Europeans is **correct**?
  - People elected their leaders.

- Kingship was hereditary.
- They were organized in chiefdoms.
- A council of elders made laws.

Use the map of Eastern Africa below to answer questions 12 to 15.



- Which community entered Tanzania through the route marked Z?
  - Ngoni
  - Nyamwezi
  - Makonde
  - Hehe
- The country marked T was colonized by
  - Italy
  - Britain
  - Spain
  - France
- The source of the River marked S is \_\_\_\_
  - L. Victoria
  - L. Tana
  - Ethiopian highlands
  - L. Turkana
- The main mineral export of the country marked N is \_\_\_\_
  - soda ash
  - diamond
  - copper
  - fluorspar
- Bananas in Uganda are intercropped with
  - tea
  - maize
  - beans
  - coffee
- Which one of the following is **not** a principle of democracy?
  - Use of government resources to campaign.
  - Equality opportunities to all citizens.
  - Equal before the law.
  - Justice for all.
- Which one of the following mountains in Africa was formed when underneath rocks folded?
  - Mount Ruwenzori.
  - Danakil Alps.
  - Usambara mountains.
  - Cape Ranges.
- Bantu communities migrated from the Congo basin to Eastern Africa **mainly** in search of
  - water and pasture for their livestock
  - goods for trade
  - fertile land for farming
  - iron for tool making.

20. Which one of the following groups of people forms a nuclear family?  
 A. Grandfather, uncle, nephew.  
 B. Mother, son, daughter.  
 C. Father, cousin, uncle.  
 D. Grandmother, aunt, son.
21. Which one of the following is a problem facing Kenyan fishermen in Lake Victoria?  
 A. Lack of adequate fishing skills.  
 B. Scarcity of fish in Lake Victoria.  
 C. Low demand for fish in the Kenya market.  
 D. Disagreements over fishing areas with neighbouring countries.

22. The following are events that took place in Tanganyika during the colonial period.

(i) **Tanganyika African Association was formed.**

(ii) **Tanganyika became a trust territory.**

(iii) **Julius Nyerere became chief minister.**

The **correct** order in which these events took place from first to last is

- A. (ii), (i), (iii)                      B. (iii), (ii), (i)  
 C. (i), (ii), (iii)                      D. (ii), (iii), (i)
23. Which one of the following Ocean currents causes dry misty conditions along the African Coast?  
 A. Aguhlas currents.      B. Somali currents.  
 C. Guinea currents.      D. Benguela currents

24. Which one of the following pairs is made up of exotic breeds of beef cattle?

A. Sahiwal Zebu	B. Jersey Ashyire
C. Hereford Aberdeen Angus	D. Zebu Boran

25. The following are statements about an early visitor to Eastern Africa.

(i) **He came in 1866.**

(ii) **He explored areas around River Zambezi.**

(iii) **He established Mission stations in Tanganyika.**

The early visitor described above is


- A. John Speke  
 B. David Livingstone.  
 C. Johann Rebmann.  
 D. Henry Morton Stanley.
26. Which one of the following is the **main** characteristic of Equatorial type of climate. It is \_\_\_\_\_  
 A. hot and wet throughout the year.  
 B. cool and wet in summer.  
 C. having savannah grassland as the main vegetation.  
 D. hot and dry in winter.

27. The Hehe people were defeated by the German in Tanganyika **mainly** because

- A. the Germans were helped by the British.  
 B. Germany had a large army.

- C. they used traditional weapons.  
 D. the Hehe people were not united.

**The diagram below represents formation of relief rainfall.**



28. The side marked **B** receives less rainfall because

- A. the area lies at a low altitude  
 B. the area is far from a large water body  
 C. it lacks dense vegetation  
 D. it experiences hot and dry winds.

29. The migration of the Pokomo people from the Shungwaya area was caused by

- A. attacks by Cushitic Speakers  
 B. overpopulation in the area  
 C. dry conditions in the area  
 D. outbreak of diseases.

30. Which one of the following rivers drains into the Atlantic Ocean?

- A. River Limpopo.      B. River Orange.  
 C. River Zambezi.      D. River Rufiji.

31. The East Africa community (EAC) collapsed in 1977 **mainly** due to

- A. lack of trade goods in the region.  
 B. production of similar goods.  
 C. political different between member states.  
 D. use of different language in the region.

32. African socialism was introduced in Kenya in 1963 **mainly** to

- A. promote fast development of the country  
 B. promote use of Kiswahili in the country  
 C. enable formation of political parties  
 D. support countries struggling for independence.

33. The collaboration of Laibon Lenana and the British in Kenya led to

- A. building of schools in Maasai land  
 B. loss of Maasai land to the British  
 C. Maasai acquiring cattle from the British  
 D. intermarriage between Maasai and British.

34. Mountains on the floor of the Rift Valley were **mainly** formed through

- A. erosion                      B. faulting  
 C. folding                      D. volcanicity

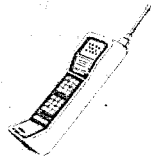
35. The **most** effective way of reducing water pollution by industries is by

- A. building industries away from rivers  
 B. treating waste before disposing  
 C. building industries in the rural areas  
 D. controlling use of water in industries.

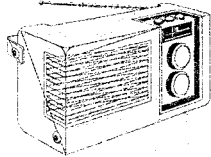
36. Which one of the following is a planted forest in Kenya?  
 A. Arabuko Sokoke forest.  
 B. Ngong forest  
 C. Timboroa forest  
 D. Kakamega forest
37. Citizens are encouraged to promote peace in the society **mainly** to  
 A. reduce the work of police officers.  
 B. enable the country to develop.  
 C. make people live in towns.  
 D. enable elections to be held frequently.
38. Which one of the following duties was performed by Buganda Kings?  
 A. Leading people to war.  
 B. Leading people in the planting season.  
 C. Make people live in towns.  
 D. Deciding difficult cases.
39. Which one of the following items was made in traditional industries?



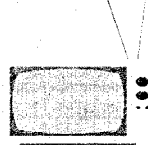
A.



B.



C.



D.

40. Which one of the following physical features is **correctly** matched with the country it is found?

	<i>Physical features</i>	<i>Country</i>
A.	Jos Plateau	Nigeria
B.	Okavango swamp	Zambia
C.	Danakil Alps	Botswana
D.	Lake Bangweulu	Ethiopia

41. The Imperial British East Africa Company (IBEAC) was founded by  
 A. Seyyid Said                      B. Vasco da Gama  
 C. William Mackinon              D. Carl Peters
42. Salt is extracted from the sea near Malindi in Kenya using  
 A. dredging method  
 B. scooping method  
 C. open cast method  
 D. evaporation method.
43. Which one of the following pairs is made up of Plain Nilote in Eastern Africa?  
 A. Samburu and Jie.  
 B. Sanye and Dahalo.  
 C. Nandi and Kipsigis.  
 D. Acholi and Luo.
44. People who have a common ancestor in African communities form  
 A. a tribe                              B. an age group  
 C. a clan                                D. an age set

45. The collaboration of the Agikuyu of Dagoretti with the British was led by  
 A. Waiyaki wa Hinga      B. Nabongo Mumia  
 C. Mukite wa Nameme    D. Laibon Lenana
46. A school motto is important in a school because  
 A. it outlines the school activities  
 B. it encourages learners to work hard  
 C. it makes learners pass school tests  
 D. it outlines the rules of the school.
47. The following are statements about a relief region in Africa.  
 (i) **Average altitude is 900 metres.**  
 (ii) **It covers the largest area.**  
 (iii) **It is wide in Eastern and Southern Africa.**  
 The relief region described above is  
 A. Coastal lowlands  
 B. Highland region.  
 C. Lake Victoria region.  
 D. Plateaus region.
48. Which one of the following efforts is being made to decongest major towns in Eastern Africa?  
 A. Creating more jobs in towns.  
 B. Building decent houses in towns.  
 C. Setting up industries in rural areas.  
 D. Rehabilitating street children in towns.
49. Which one of the following factors makes mountains slopes good for settlement?  
 A. They receive adequate rainfall.  
 B. They have gentle slopes.  
 C. They are free from tse tse flies.  
 D. They are sheltered from strong winds.
50. Which one of the following crops is grown at Kenana Irrigation Scheme in Sudan?  
 A. Rice                                      B. Sugarcane  
 C. Cotton                                    D. Bananas
51. Which one of the following is the **main** contribution of industries in Eastern Africa?  
 A. Creation of employment.  
 B. Migration of people to towns.  
 C. Increase of population.  
 D. Decrease in crime.
52. Which one of the following rivers drains into an inland drainage basin?  
 A. River Rufiji.                      B. River Niger.  
 C. River Omo.                        D. River Zambezi.
53. During the colonial period in Kenya, the title of the head of state was  
 A. prime minister.                  B. emperor  
 C. president                              D. governor
54. Which one of the following game parks is **correctly** matched with the country where it is found?

	<i>Game park</i>	<i>Country</i>
A.	Mikumi	Kenya
B.	Omo	Tanzania

C.	Sibilo	Ethiopia
D.	Bwindi	Uganda

55. Some lakes in the Rift Valley are salty because  
 A. they are deep  
 B. they have rivers draining into them  
 C. they do not have outlets  
 D. they are below sea level.
56. Which one of the following commodities is imported by most countries of Eastern Africa in large quantities?  
 A. Petroleum                      B. Meat  
 C. Rice                                D. Sugar
57. Which one of the following is a Semitic Speaking community in Ethiopia?  
 A. Oromo                              B. Somali  
 C. Amharans                        D. Sindano
58. Members of the county assemblies are elected to represent  
 A. locations                        B. counties  
 C. constituencies                D. wards
59. A requirement for a Kenyan to vote is that the person should  
 A. be able to read English language  
 B. be a registered voter  
 C. have a birth certificate  
 D. have been born in Kenya
60. The arm of the government that interprets the law is headed by  
 A. Chief Justice                  B. Speaker  
 C. Attorney General            D. President

## SECTION II

### CHRISTIAN RELIGIOUS EDUCATION

61. God created moons and starts on the  
 A. second day                      B. third day  
 C. fourth day                       D. fifth day
62. A Christian value shown by Noah when he accepted to build the ark was  
 A. obedience                        B. patience  
 C. humility                            D. tolerance
63. Before Abraham went to live in Canaan, he lived in the land of  
 A. Midian                              B. Haran  
 C. Morian                              D. Egypt
64. Which one of the following Christian values was shown by Joseph when he met his brothers in Egypt?  
 A. Faithfulness                      B. Kindness  
 C. Obedience                        D. Loyalty
65. Moses commanded the Israelites on the night of the Passover to  
 A. kill Egyptian first born males  
 B. offer burnt sacrifice  
 C. circumcise all the males  
 D. eat roasted meat.
66. The person who accompanied Moses on mount Sinai to receive the ten commandments was

- A. Jetro                                B. Caleb  
 C. Joshua                              D. Aaron
67. The story of Naomi and Ruth teaches Christians to be  
 A. repentant                        B. forgiving  
 C. kind                                 D. loyal
68. The action of King David that annoyed God was when he  
 A. took Uriah's wife  
 B. planned the murder of Naboth.  
 C. refused to build the temple.  
 D. married many wives.
69. The prophet who healed a Syrian army offices of a skin diseases was  
 A. Nathan                              B. Elisha  
 C. Ahijah                                D. Elijah
70. The message brought to Zechariah by Angel Gabriel was that  
 A. the Messiah would come from his family  
 B. he would die at an old age  
 C. his son would prepare people ready for the Lord  
 D. his Kingdom would never end.
71. When Jesus was presented in the temple, Simeon described Him as  
 A. the King of the Jews.  
 B. the lamb of God  
 C. the suffering servant  
 D. the light to the gentiles.
72. "Human beings cannot live on bread alone" (**Luke 4:4**). Jesus said these words when he  
 A. multiplied bread and fish.  
 B. was tempted by the devil.  
 C. changed water into wine.  
 D. ate the last supper.
73. The parable of Jesus that teaches Christians to bring more people to the Church is  
 A. the good samaritan  
 B. the ten young women.  
 C. the lost sheep  
 D. the friend at midnight
74. Zacchaeus climbed a tree because  
 A. he wanted to see Jesus.  
 B. he wanted to hear Jesus preach.  
 C. there was a large crowd.  
 D. he wanted to invite Jesus to his house.
75. In the miracle of healing the ten lepers, the one who went back to give thanks to Jesus was  
 A. a Roman                              B. a Samaritan  
 C. an Ethiopian                        D. a Syrian
76. Which one of the following events took place when Jesus was praying in the garden of Gethsemane?  
 A. Moses and Elijah appeared.  
 B. His clothes changed to dazzling white.  
 C. A voice was heard from heaven.  
 D. An angel came down and comforted him.