

**READ THESE INSTRUCTIONS CAREFULLY.**

Time : 2 Hours 15 min

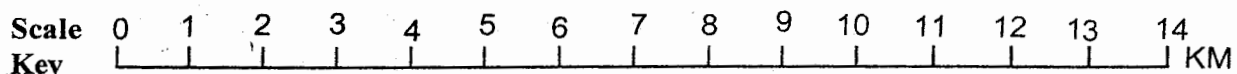
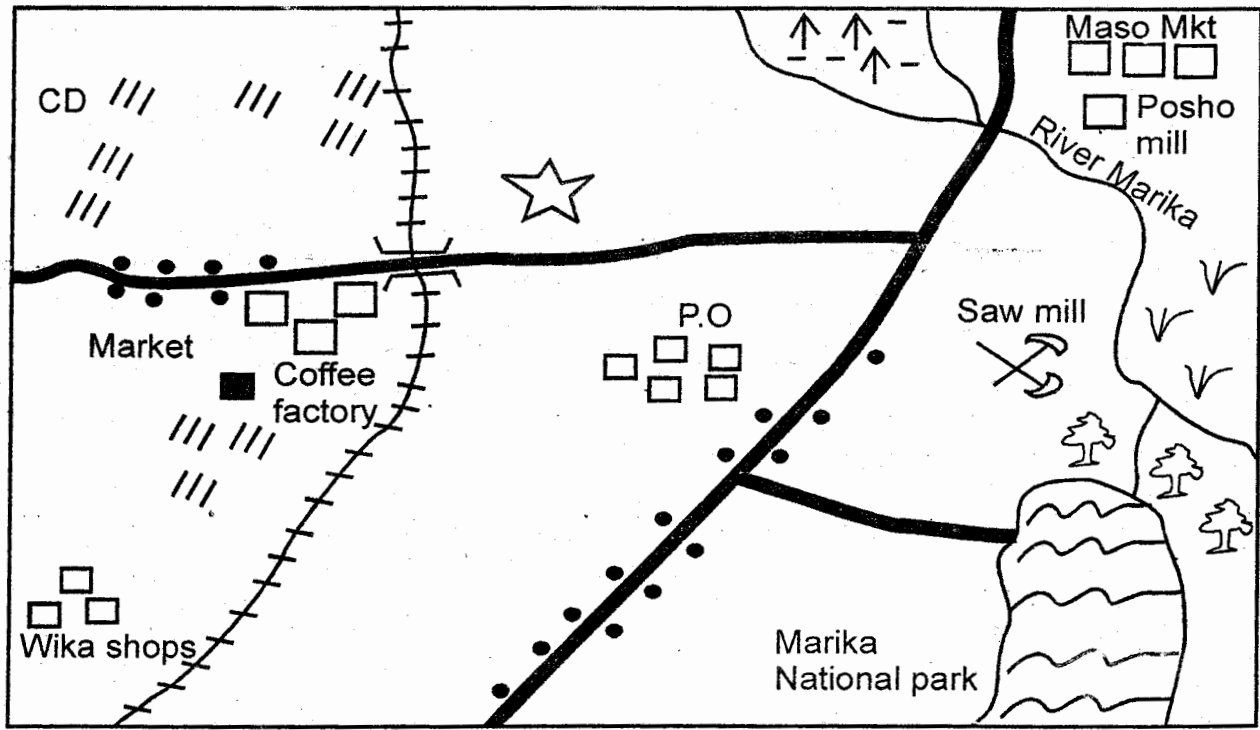
1. You have been given this question paper and a separate answer sheet: The question paper contains 50 questions.
2. Make sure that you have written on the answer sheet.

(i) Your name

(ii) Name of your school

**Study the map of Marika area and answer questions 1 - 7**

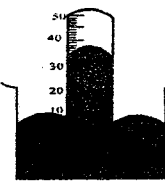
**MARIKA AREA**



CD- Cattle Dip	C	Coffee	Fish trap	Saw Mill	P.O- Post Office
Railway	Bridge	River	Quarry	Forest	

1. People in Marika area were asked by their member of parliament to pick a project of their choice. Which of the following projects did the majority chose  
A. school                      B. posho mill  
C. saw mill                      D. coffee factory
2. Which commodity is **likely** to be transported using the railway?  
A. Soda ash                      B. Tea  
C. Livestock                      D. Coffee
3. What is the direction of the coffee factory from Maso market?  
A. East                              B. South East  
C. South West                      D. North East
4. Which evidence is there is the map to show that most parts of the area receive a lot of rainfall?  
A. Shops                              B. Saw mill  
C. Coffee                              D. National park

5. The general direction of flow of river Marika is from
  - A. North to South
  - B. North East to South West
  - C. North West to South West
  - D. South West to North East
6. People living in Marika area would have their land disputes solved by the
  - A. County Commissioner
  - B. Forest offices
  - C. Police office
  - D. Religious leaders
7. The **main** source of water for the residents of Marika area is
  - A. the river
  - B. the borehole
  - C. the pond
  - D. the swamp
8. The biggest problem facing commercial development of the fishing industry in lake Turkana is
  - A. the failure to use modern methods of fishing
  - B. the long distance to the markets
  - C. the mismanagement of co-operative societies
  - D. the small size of fish caught in the lake
9. The most important reason for protecting **forests** in Kenya is that forests
  - A. create employment in the sawmills.
  - B. are important source of fuel wood.
  - C. are sources of plants used to produce medicine.
  - D. are water catchment areas and tourist attractions.
10. Which of the following was **mainly** acquired through apprenticeship?
  - A. Skills on how to avoid danger
  - B. Iron smelting skills
  - C. The history of the community
  - D. Social values
11. Which of the following elements of a map can determine the amount of information to be included in the map?
  - A. Scale
  - B. Title
  - C. Key
  - D. Frame
12. Which Kenyan community is correctly matched with its area of origin?
  - A. Maasai → Eastern Ethiopia
  - B. Iteso → Congo forest
  - C. Taita → Shungwaya
  - D. Luo → Bahr - el- Ghazal
13. One of the measures taken in Kenya to reduce road accidents is
  - A. removing old vehicles from the roads
  - B. introducing speed governors in public transport vehicles
  - C. building more tarmac roads
  - D. introducing seat belts in vehicles
14. Which one of the following was a role of traditional forms of governments?
  - A. Building roads in the areas where they ruled
  - B. Conducting marriage ceremonies in the community
  - C. Maintaining peace among members of the community
  - D. Allocating land to traditional members of the community
15. The following are members of the executive executed in Kenya **except**
  - A. the Speaker
  - B. Civil servants
  - C. The Attorney General
  - D. Cabinet minister
16. Which of the following types of vegetation grows well along rivers?
  - A. Water vegetation
  - B. Dense vegetation
  - C. Riverine vegetation
  - D. Mangrove vegetation
17. All the following countries are crossed by the equator **except**
  - A. equatorial Guinea
  - B. Gabon
  - C. Congo
  - D. Uganda
18. Which one of the following is not an effect of the revolution of the earth?
  - A. The revolution of the earth causes different lengths of day and night
  - B. The revolution of the earth causes different seasons
  - C. The revolution of the earth causes day and night
  - D. The revolution causes changes in the position of midday sun
19. The weather instrument below is used to
 



  - A. air pressure
  - B. the speed of wind
  - C. the direction of wind
  - D. amount of rainfall

56. In which one of the following areas in Kenya are mangrove forests found?  
 A. On the floor of the Rift Valley  
 B. In the lake basin  
 C. In the Coastal region  
 D. At the floor of mountain
57. The Tigre and Amhara communities lives **mainly**  
 A. Ethiopia                      B. Uganda  
 C. Kenya                        D. Somalia
58. Which one of the following colours of the national flag of Kenya represents land of plenty?  
 A. Black                          B. White  
 C. Red                              D. Green
59. Three of the following are reasons that may make a member of county assembly lose his /her seat. Which one is **not**?  
 A. If one is convicted of an election offence by a Court of law  
 B. If one is a registered voter in the ward intended to contest in  
 C. If one loses his/her Kenya citizenship  
 D. If one is sentenced to death
60. The countries listed below are members of IGAD **except**  
 A. Uganda                        B. Tanzania  
 C. Kenya                        D. South Sudan

**SECTION B**  
**CHRISTIAN RELIGIOUS EDUCATION**

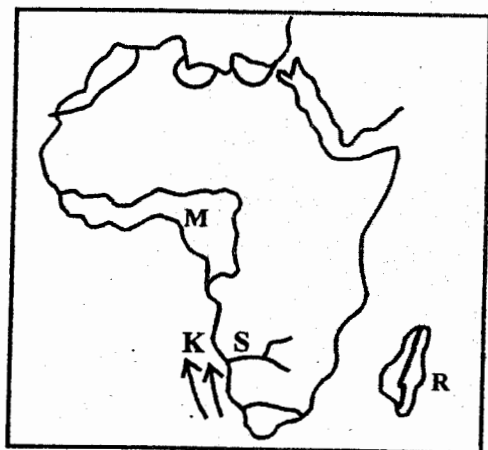
61. Human beings were given authority to all of the following **except**  
 A. control the rest of God's creation  
 B. to misuse and conserve the environment responsibly  
 C. care for and maintain God's creation  
 D. use God's creation to provide food for themselves and animals
62. Why did people marry in traditional African societies?  
 A. To bear children for the community  
 B. To prevent immorality  
 C. To have a partner for a life time  
 D. To have many shamba helpers
63. All of the following are ways in which we can use our talents at home **except**  
 A. sewing  
 B. cutting the grass  
 C. visiting homes for the aged  
 D. knitting

64. \_\_\_\_\_ was the commander of the army of the king of Aram according to 2 Kings 5: 2 - 4.  
 A. Gideon                        B. David  
 C. Moses                         D. Naaman
65. Which one of the following is **not** a way of demonstrating peace?  
 A. Humility                      B. Dislike  
 C. Faithfulness                 D. Patience
66. The nine beatitudes are recorded in the book of  
 A. Luke                            B. John  
 C. Matthew                      D. Mark
67. According to the Lord's prayer, God forgives us only when we  
 A. forgive others  
 B. love Him  
 C. pray for our enemies  
 D. forgive ourselves
68. New life in Traditional African society was marked by the following **except**  
 A. circumcision                B. marriage  
 C. baptism                        D. birth
69. Which one of the following is not a value acquired in education?  
 A. Wisdom                        B. Fairness  
 C. Love                             D. Teamwork
70. All of the following are importance of prayer and fasting **except**  
 A. helps us to live a holy life  
 B. takes us away from God  
 C. renews our relationship with God  
 D. enables us to practice self denial and self-discipline
71. Which one of the following is **not** an element of prayer?  
 A. Praise                         B. Conviction  
 C. Thanksgiving               D. Petition
72. What made human beings get separated from God in the beginning?  
 A. Human beings killed the snake  
 B. Human beings and the snake were enemies  
 C. The snake had disobeyed God  
 D. Human beings had disobeyed God
73. Eternal life means all of the following **except**  
 A. life that starts when one accepts Jesus  
 B. life that is everlasting  
 C. life that ends when one dies  
 D. life that continues in heaven when we die

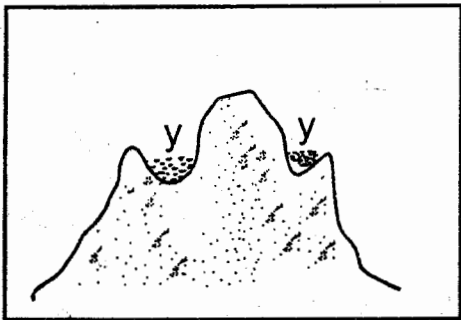
74. Three of the following are ways in which the people of the African Traditional society shared their possessions. Which one is **not**?
- Had fundraising to take their children to school
  - Gave land to the relatives
  - Gave food to the hungry
  - Gave dowry to those who were getting married
75. Your classmate Tom has refused to lend you a book. As a Christian, what action would you take?
- Tell her it is good to help others
  - Report her to the classteacher
  - Take the book from her
  - Ask your friend to talk to her
76. The following are importance of sharing a meal. Which one is **not**?
- Is a sign of generosity
  - It promotes love and disunity
  - It creates good relationship
  - It brings togetherness
77. Prophet \_\_\_\_\_ prophesied the birth of Jesus.
- Micah
  - Joel
  - Isaiah
  - Jeremiah
78. Which one of the following is the **main** reason why God created man?
- To work hard and sweat
  - To disobey Him
  - To be proud of Him
  - To worship Him and take care of His creation
79. Which one of the following is not true according to traditional African belief on life after death?
- It continued after death
  - They could communicate with spirits through prayers
  - The daily lives of members of the community were influenced by the dead
  - By naming their children after the dead, bad relationships were witnessed
80. In 1 Thessalonians 4: 13 - 18, Christians believe in all of the following **except**
- Jesus died and rose again
  - Jesus will come down from heaven
  - Those who died believing in Jesus will rise to life again
  - All Christians will enter heaven
81. In 1 Thessalonians 4: 13 - 18, Christians believe in all of the following **except**
- Jesus died and rose again
  - Jesus will come down from heaven
  - Those who died believing in Jesus will rise to life again
  - All Christians will enter heaven
82. **Stephen was stoned death** mainly because of his
- faith
  - obedience
  - love
  - humility
83. Three of the following values were taught in the sermon at the mount **except**
- charity
  - purity
  - hardwork
  - mercy
84. Israelites celebrate the feast of passover simply to
- to remember the days they were in desert
  - to remember the day they left Egypt where they were slaves
  - remember the coming of the Holy Spirit
  - remember the death and resurrection of Jesus
85. Which one of the following is true?
- Adam and Eve pleased God
  - Adam and Eve were created first
  - Sin brings us closer to God
  - Man was given authority over creation
86. Which one of the following is correct according to Matthew 5: 1 - 11? Happy are those who work for peace for
- the kingdom of God belongs to them
  - God will satisfy them fully
  - they will see God
  - God will call them His children
87. Jesus grew up to be a very obedient boy. He helped his father Joseph who was a
- fisherman
  - carpenter
  - farmer
  - doctor
88. \_\_\_\_\_ baptised the Ethiopian Eunuch.
- Philip
  - John
  - Isaiah
  - Gideon
89. Who among the following people is not needy?
- An orphan
  - A patient
  - A pupil
  - A blind man
90. We should use our talents to serve God and \_\_\_\_\_
- our neighbours only
  - ourselves
  - others
  - our relatives

20. Which one of the man made lake is found in Sudan?  
 A. Merowe                      B. Kiambere  
 C. Masinga                      D. Grandfall
21. Which of the following climatic regions experiences rainfall throughout the year?  
 A. Coastal tropical  
 B. Modified equatorial  
 C. Equatorial  
 D. Tropical
22. The **main** factor influencing the distribution of forest vegetation is  
 A. human activities such as construction  
 B. well - drained slopes  
 C. presence of fertile soils  
 D. availability of high rainfall
23. Which of the following Bantu communities belongs to the group that used the lake Tanganyika - lake Malawi migration route?  
 A. Fipa                              B. Gogo  
 C. Abaluhya                      D. Nyamwezi
24. Below is a list of family members.  
 i) Aunt                              ii) Mother  
 iii) Children                      iv) Grandparents  
 v) Uncle  
 Which of the following combinations consists of members of the extended family?  
 A. (iii), (iv), (v)                  B. (ii), (iii), (i)  
 C. (ii), (iii), (iv)                  D. (i), (iv), (v)
25. Large farms where beef cattle are kept are called  
 A. farms                              B. ranches  
 C. paddocks                      D. units
26. Three of the following statements are **true** about the climatic region marked M. Which one is **not**?  
 A. Rainfall is experienced mainly in winter  
 B. Rainfall is accompanied by lightning and thunderstorms  
 C. The hottest months in the year are March and September  
 D. The type of rainfall received is **mainly** convectional.
27. The river marked S is  
 A. Zambezi                      B. Limpopo  
 C. Orange                      D. Cunene
28. The ocean current marked K is  
 A. Guinea current  
 B. Mozambique  
 C. Canary current  
 D. Benguela current
29. The Island marked R is  
 A. Comoros                      B. Madagascar  
 C. Lamu                              D. Zanzibar
30. One may become a Kenyan citizen through  
 A. marriage                      B. migration  
 C. employment                      D. registration
31. The most senior civil servant in a government ministry in Kenya is the  
 A. Governor  
 B. Principal secretary  
 C. The cabinet secretary  
 D. Chief of general staff
32. Sand is used in the building industry. It is mined through  
 A. Adit method                      B. Scooping  
 C. Open cast                      D. Shaft method
33. The highest Court in Kenya is  
 A. Court martial B. high Court  
 C. Supreme Court                  D. Court of appeal
34. All the following are basins in Africa **except**  
 A. Great Karoo                      B. Sudan  
 C. Chad                              D. Kenya
35. Apart from the Turkana, which other community practices pastoralism in Kenya  
 A. Samburu                      B. Luo  
 C. Akamba                      D. Abakuria
36. Which of the following was **not** an occasion in the traditional African society?  
 A. Burial                              B. Naming  
 C. Marriage                              D. Baptism

Use the map of Africa below to answer questions 26 - 29 below.

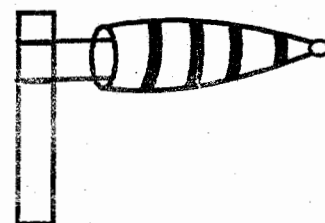


Use the diagram below to answer questions 37 and 39.



37. The above diagram was formed through the process of  
 A. folding                      B. faulting  
 C. volcanicity                D. compression
38. Lakes X and Y were formed through  
 A. deposition                B. faulting  
 C. downwarping            D. glacial erosion
39. An example of a lake formed in the same way as one shown in the diagram is  
 A. lake Turkana            B. Lake Kivu  
 C. Lake Teleki             D. Lake Kyoga
40. Goods that brought by a country from another country are  
 A. exports                    B. external goods  
 C. domestic goods        D. imports
41. Which is the **main** problem facing sisal industries in Africa?  
 A. Competition from synthetic fibre.  
 B. Bulkness of the sisal.  
 C. Lack of skilled labour.  
 D. Lack of enough capital.
42. The constitution of Kenya is divided into how many chapters?  
 A. 20                            B. 27  
 C. 12                            D. 18
43. Which of the following towns is associated with a seaport?  
 A. Eldoret                    B. Mombasa  
 C. Nakuru                    D. Kisumu
44. The Bantus were dispersed from Shungwaya by the.  
 A. Galla                        B. Burji  
 C. Somali                     D. Boran
45. A national population census is carried out in Kenya after a period of  
 A. 12 years                    B. 4 years  
 C. 5 years                     D. 10 years

46. The main sugarcane growing areas in Sudan is the  
 A. Gezira                      B. Khartoum  
 C. Kenana                    D. Bahr- el- Ghazal
47. The early explorers who discovered the source of river Nile was  
 A. John Speke  
 B. Vasco Dagama  
 C. Richard Burton  
 D. Henry Morton Stanley
48. Kariandusi area near Gilgil in Kenya is popular for the mining of  
 A. gemstones                B. limestone  
 C. diatomite                 D. flourspar
49. Kenya gets most of its revenue from  
 A. harambee contribution  
 B. loans  
 C. taxes  
 D. grants
50. Which one of the following towns is the headquarters of SADC?  
 A. Lusaka                    B. Gaborone  
 C. Lagos                     D. Durban
51. Maintenance of law and order in Kenya is a function of.  
 A. prisons  
 B. national police service  
 C. Kenya army  
 D. Judiciary
52. Flowers are exported by air mainly because they  
 A. Fetch high prices  
 B. Are in high demand  
 C. Get spoilt easily  
 D. Are light in weight
53. Which one of the following towns in Kenya is an important mining centre?  
 A. Nyeri                      B. Voi  
 C. Magadi                    D. Eldoret
54. In Kenya law are made by  
 A. the public service commission  
 B. the two assemblies  
 C. the Judicial service commission  
 D. the High Court
55. The diagram below is used to measure an element of weather.



- Which of the following elements of weather is measured using the above instrument?  
 A. Rainfall                    B. Temperature  
 C. Wind direction            D. Air pressure