

ENGLISH
SECTION A:
LANGUAGE

Time: 1hr 40mins

Complete the following passage using the correct word from number 1 - 14

One day, God was 1 about the way people 2 dying in great numbers on 3. He 4 chameleon 5 tell the people that 6 would not die again. Chameleon was very 7. Before he 8 the earth, people annoyed God by 9 down trees and clearing the bushes. God 10 His mind. He sent weaverbird with a new 11. "Tell the people that they will 12 to die 13 before". Weaverbird 14 very fast. She overtook chameleon on the way and told the people what God had 15.

- | | | | | | | | | |
|-----|----|---------|----|----------|----|-----------|----|------------|
| 1. | A. | happy | B. | unhappy | C. | glad | D. | grateful |
| 2. | A. | were | B. | is | C. | was | D. | are |
| 3. | A. | erth | B. | oerth | C. | earth | D. | world |
| 4. | A. | sends | B. | sent | C. | send | D. | sended |
| 5. | A. | and | B. | but | C. | to | D. | or |
| 6. | A. | they're | B. | there | C. | their | D. | they |
| 7. | A. | slowly | B. | slow | C. | quick | D. | quickly |
| 8. | A. | reached | B. | reach | C. | arrive | D. | arrived |
| 9. | A. | cutted | B. | catting | C. | cutting | D. | cuting |
| 10. | A. | changed | B. | knocked | C. | exchanged | D. | crossed |
| 11. | A. | mesage | B. | message | C. | messange | D. | massage |
| 12. | A. | not | B. | continue | C. | continued | D. | continuing |
| 13. | A. | and | B. | or | C. | as | D. | but |
| 14. | A. | flew | B. | fly | C. | flied | D. | flown |
| 15. | A. | says | B. | saying | C. | say | D. | said |

For question 16-17 complete the sentences with the correct prepositions.

16. The pupil is peeping _____ the window.

- A. with B. at
C. in D. through

17. He was asked to look _____ matter.

- A. into B. in
C. at D. onto

Read the sentence and select the word which is a pronoun.

18. She swam across the river today.

- A. across B. swam
C. today D. she

19. We were in class reading.

- A. we B. in
C. class D. reading

Choose the word that is opposite to the underlined word.

20. She visited her aunt in the morning.

- A. noon B. afternoon
C. evening D. mid day

21. They live in a modern house.

- A. old B. ancient
C. new D. rotten

Write the correct question tag in question 22-23

22. The boy is very naughty, _____?

- A. isn't he B. is he
C. naughtiest he D. is it

23. Hornbills are noisy, _____?

- A. are they B. is it
C. aren't they D. isn't it

Complete the similies

24. As timid as a

- A. mouse
B. kitten
C. pig
D. puppy

25. As easy as

- A. crying
B. laughing
C. eating
D. winking

Pick an adverb from the following sentences.

26. John is walking quickly.

- A. John
B. quickly
C. walking
D. is

27. The train is moving very slowly.

- A. slowly
B. train
C. moving
D. is

Fill in the gap with the correct word.

28. He is the _____ footballer in the team.

- A. worse
B. worst
C. worstest
D. bad

29. A frog leaps but a _____ gallops.

- A. goat
B. cow
C. dog
D. horse

30. A person who eats too much food is a

- A. glutton
B. greedy
C. hero
D. delicious

Use the following passage below to answer questions 31 - 40.

The parents and the visitors began to arrive at ten o'clock. At half past ten all the children went to the field behind the school where the visitors were seated. There was a short opening ceremony and then standard five children sang their songs. Everyone clapped loudly when they had finished.

After that, the children started getting ready for the races. Soon it was the turn of standard five children. The boys had a three-legged race. Each of them had to run with a partner. Njogu said, "Let me run with you, Leteipa. We can run fast". Together, Njogu tied his left leg to Leteipa's right one.

"Ready, go!" shouted Miss Maina again. The girls ran as fast as they could, but it was not easy. Some of them dropped their potatoes and had to go back to the beginning. The winner was Nduta. The visitors cheered loudly as she crossed the finishing line.

31. Who began to arrive at ten o'clock?
- The parents and visitors.
 - The parents and visitor.
 - The parents and standard five.
 - The parents and Miss Maina.
32. Where was the field?
- Where the parents were seated.
 - In front of the school.
 - Behind the school.
 - Near the school.
33. There was a short opening
- prayer.
 - ceremony.
 - chorus.
 - song.
34. Why did everyone clap loudly when they had finished?
- Because of the visitors and parents.
 - Because of the children.
 - Because of the visitors only.
 - Because the standard five sang.
35. The words "getting ready" are underlined in the passage. They mean
- running.
 - going.
 - preparing.
 - starting.
36. Who started the race first?
- Boys
 - The girls.
 - Njogu and Leteipa.
 - The wind.
37. It is true to say that
- the visitors laughed because of the girls' race.
 - the visitors laughed because of the boys' race.
 - Njogu and Leteipa fell over.
 - the boys had a three-legged race.
38. What does the word "pairs" mean in the passage.
- Miss Maina and the children.
 - A potato and a spoon.
 - The parents and the visitors.
 - Groups of two children.
39. In potato and spoon race, what must you do when you drop your potato?
- You must cross the finishing line.
 - You must leave the race.
 - You must go back and start again.
 - You must cheer the others.
40. What can you say about Nduta?
- She was the winner of all the races.
 - She was the first in the potato and the spoon race.
 - She was the winner of the three-legged race.
 - She was the first in class.

Read the following passage below and answer questions 41 to 50.

Once upon a time there lived a man who liked stealing honey. He was also lazy and never liked making his own hives. He often found holes in trees where bees lived and stole honey from people's beehives.

One day he went to a village which was a long way from his village. There he saw a huge tree with a hole in its trunk. "This hole must contain a lot of honey," he said to himself as he put his hand inside the hole. He was very unlucky, the bees had left a long time ago and a huge snake had made a home there. The snake bit his hand.

He was in great pain but luckily he did not die. He vowed to make his own hives and never steal people's honey again.

41. According to the passage, what did the man like?
A. Eating.
B. Making hives.
C. Stealing honey.
D. Preaching.
42. How can you describe the man's character?
A. He liked working.
B. He was lazy and a thief.
C. He was working in the shamba.
D. He liked huge trees.
43. What did the man think was in the hole?
A. A snake.
B. Honey.
C. Food.
D. We are not told.
44. Were there bees in the big tree?
A. No.
B. Yes.
C. We are not told.
D. They had gone hunting.
45. What happened to the man when he put his hand in the hole?
A. Bees stung him.
B. He got honey.
C. He was unlucky.
D. He was bitten by a snake.
46. The word huge is underlined in the passage. It means
A. small.
B. big.
C. medium.
D. wide.
47. What happened to the man after the snake bit him?
A. He died.
B. He became blind.
C. He got healed.
D. He became paralysed.
48. How far was the village he went from his own village?
A. Very near.
B. A few metres away.
C. Far away.
D. A stone's throw away.
49. What happened to the old man after healing from the snake bite?
A. He continued stealing.
B. He never lived after the snake bite.
C. He made his hives and never stole again.
D. He married.
50. The word vowed is underlined. It also means
A. decided.
B. pretended.
C. wanted.
D. promised.

DARASA LA TANO

MTIHANI SPESHILI

KISWAHILI

SEHEMU YA KWANZA:

LUGHA

Soma taarifa ifuatayo halafu ujaze nafasi 1 hudi 15 kwa kuchagua neno sahihi kati ya yale uliyopewa

Wanyama wa nyumbani wana manufaa _____ 1 _____ kwetu. Ng'ombe na mbuzi _____ 2 _____ nyama na maziwa. _____ 3 _____ wanyama hao wanatupatia ngozi _____ 4 _____ hutumiwa _____ 5 _____ kutengeneza ngoma. Punda na farasi hutubebea _____ 6 _____. Kuku na bata hutupa mayai _____ 7 _____. Wao hutuamsha _____ 8 _____. Wakulima wengine _____ 9 _____ pia _____ 10 _____ sababu ya nyama.

- | | | | |
|-----------------|--------------|-----------------|--------------|
| 1. A. wengi | B. nyingi | C. mengi | D. kingi |
| 2. A. hutupatia | B. hutupitia | C. hutupatianga | D. hawatupi |
| 3. A. Wala | B. Maana | C. Pia | D. Poa |
| 4. A. ambalo | B. ambacho | C. ambaye | D. ambayo |
| 5. A. na | B. kwa | C. kwenye | D. kuna |
| 6. A. maziigo | B. msigo | C. mizigo | D. zigo |
| 7. A. moja | B. mmoja | C. wanyama | D. pembe |
| 8. A. asubuhi | B. usubuhi | C. jioni | D. magharibi |
| 9. A. huamsha | B. hulima | C. hufuga | D. husema |
| 10. A. nguruwe | B. foronya | C. kinyesi | D. nguruwa |

Koo aliwacha vifaranga _____ 11 _____ na kuwaambia _____ 12 _____ nje. Aliwambia wakiona mwewe ametua katika mti karibu _____ 13 _____ nyumba _____ 14 _____ wajifiche. Walitii maneno ya mama _____ 15 _____.

- | | | | |
|----------------|-------------|------------|-------------|
| 11. A. yake | B. wake | C. zake | D. chake |
| 12. A. msitoke | B. visitoke | C. isitoke | D. wasitoke |
| 13. A. mwa | B. na | C. za | D. cha |
| 14. A. wao | B. zao | C. yao | D. lao |
| 15. A. yao | B. wao | C. wenu | D. yenu |

Jibu swali la 16 hadi 30 kulingana na maagizo ya kila swali:

16. Mkeka ulikatika

- A. wenyewe
- B. mwenyewe
- C. chenyewe
- D. penyewe

17. Kamau anaishi _____ na shamba lake.

- A. bali
- B. mbali
- C. bari
- D. mbalimbali

18. Magari _____ yameharibika.

- A. hiyo
- B. hizo
- C. hayo
- D. hizo

19. Sehemu inayoshikilia meno ni

- A. ufizi
- B. ubongo
- C. ini
- D. kichwa

20. Andika kwa tarakimu:

Elfu nane mia nane na nane.

- A. 8088
- B. 8808
- C. 8888
- D. 8880

21. Umbo hili huitwaje?



- A. Mche
- B. Pia
- C. Mraba
- D. Mstatili

22. Mtoto wa simba huitwa?

- A. Kinewe
- B. Ndama
- C. Shibli
- D. Kiyoyo

23. Tegua kitendawili:

Halo halo mpaka Lamu.

- A. Rununu
- B. Barua
- C. Maneno
- D. Masomo

24. Ugonjwa wa kuanguka na kuzimia ni

- A. kichaa
- B. kifafa
- C. kichocho
- D. kifaduro

25. Humusi moja ni sawa na

- A. $\frac{1}{5}$
- B. $\frac{1}{3}$
- C. $\frac{1}{6}$
- D. $\frac{1}{7}$

26. Andika - wingi

Embe ni tamu.

- A. Maembe ni matamu.
- B. Maembe matamu.
- C. Embe ni matamu.
- D. Maembe ni tamu.

27. Mamaye alimpiga _____ hasira.

- A. na
- B. mwa
- C. wa
- D. kwa

28. Mtu asiyekuwa na meno huitwa?

- A. Kiwete
- B. Kibogoyo
- C. Kiziwi
- D. Kipofu

29. Koti lisilo na mikono huitwaje?

- A. Kizibao
- B. Kanchiri
- C. Surupwenye
- D. keti

30. Mtoto wa mtoto wangu nitamwitaje?

- A. Mjukuu
- B. Mpwa
- C. Shangazi
- D. Ami

Siku moja mbweha mjanja alimwona punda mnono akatamani kumla. Akasongea kwa yule punda na kumwambia, “Rafiki yangu punda, unaonekana mgonjwa, ninaweza kukupa dawa?” Punda akamjibu, “Ni kweli rafiki yangu, mini ni mgonjwa. Guu langu linauma kwa kufungwa kamba kila siku. Tafadhali njoo karibu unipake dawa.”

Yule mbweha mwovu akasongea kwa punda ili autazame mguu wake. Punda hodari akainua mguu wake na kumpiga teke, kwa nguvu. Yule mbweha akaanguka na kuumia vibaya. Akashindwa kuinuka. Punda akapata nafasi ya kukimbia na kuokoa maisha yake.

31. Mbweha alitamani kumla nani?

- A. Punda
- B. Fisi
- C. Sungura
- D. Mbuzi

32. Kwa nini mbweha alitamani kumla rafiki yake?

- A. Alikuwa mnono
- B. Alikuwa mgonjwa
- C. Alikuwa mdogo
- D. Alikuwa mjinga

33. Mbweha alimdanganyaje punda?

- A. Atampa chakula
- B. Atampa dawa
- C. Atampeleka hospitali
- D. Atampeleka punda akalale

34. Punda alisema kuwa anaumwa wapi?

- A. Mkia
- B. Mgongo
- C. Ngozi
- D. Mguu

35. Kwa nini punda alimwita mbweha ampake dawa?

- A. Alikuwa ameumia
- B. Alikuwa mjinga
- C. Alitaka kumpiga teke
- D. Mbweha ni rafiki yake

36. Ni nani aliyepigwa teke?

- A. Punda
- B. Mbweha
- C. Ndovu
- D. Mbwa

37. Mbweha aliposhindwa kuinuka, punda

- A. Alilia
- B. Alicheka
- C. Alitoroka
- D. Aliketi chini

38. Neno lenye maana sawa na mjinga ni

- A. mwerevu
- B. mpumbavu
- C. mpole
- D. mkali

39. Kufuatana na vile punda alivyofanya ni methali ipi inayofaa?

- A. Mwenye nguvu mpishe
- B. Ajali haina kinga
- C. Haba na haba hujaza kibaba
- D. Akili ni mali

40. Kichwa kifaacho hadithi hii ni

- A. Mbweha mjanja
- B. Punda mjinga
- C. Mbweha mnono
- D. Punda mjanja

Shule ya Msingi ya Matopeni,

S.L.P 863,

Embu.

20/2/2007.

Kwa rafiki yangu Tumbo,

Natoa salamu nyingi kutoka kwetu hapa mjini. Wewe jujambo hapo ulipo? Je, masomo yanaendeleaje? Natumai unafanya mitihani yako vyema. Hapa tunafanya bidii za mchwa katika masomo yetu. Kaka anajitayarisha kwa mtihani wake wa darasa la nane.

Mimi na dada yangu tunasoma sana ili tusishindwe na wenzetu darasani. Mwisho wa muhula uliopita nilishikilia nafasi ya tatu. Baba, mama na wajomba walifurahi sana. Walinipatia zawadi kila mmoja. Wasalimie wote na tafadhali niandikie haraka. Asante.

Ni rafiki yako,

Kichwa

42. Barua hii iliandikwa mwezi upi?

- A. Septemba
- B. Juni
- C. Februari
- D. Julai

42. Barua hii ni ya aina gani?

- A. Maadui
- B. Rasmi
- C. Yoyote
- D. Kirafiki

43. Kichwa alisomea shule iliyokuwa wapi?

- A. Kangete
- B. Embu
- C. S.L.P
- D. Msingi

44. Aliyeandika barua hii ni

- A. Tumbo
- B. hatujaambiwa
- C. Kichwa
- D. sijui

45. Maandishi S.L.P humanisha

- A. sanduku la posta
- B. sanduku la pili
- C. sanduku la upili
- D. Shule la posta

46. Mwandishi anaishi wapi?

- A. Hatujaambiwa
- B. Pwani
- C. Mjini
- D. Shuleni

47. Ukisalimiwa hujambo utajibu

- A. sijambo
- B. jambo
- C. njema
- D. marahaba

48. Aliye katika darasa la nane ni


- A. Kichwa
- B. kakaye mwandishi
- C. dadaye mwandishi
- D. kakaye anayeandikiwa

49. Aliyeandikiwa barua ni

- A. Embu
- B. Tumbo
- C. Kichwa
- D. Kaka

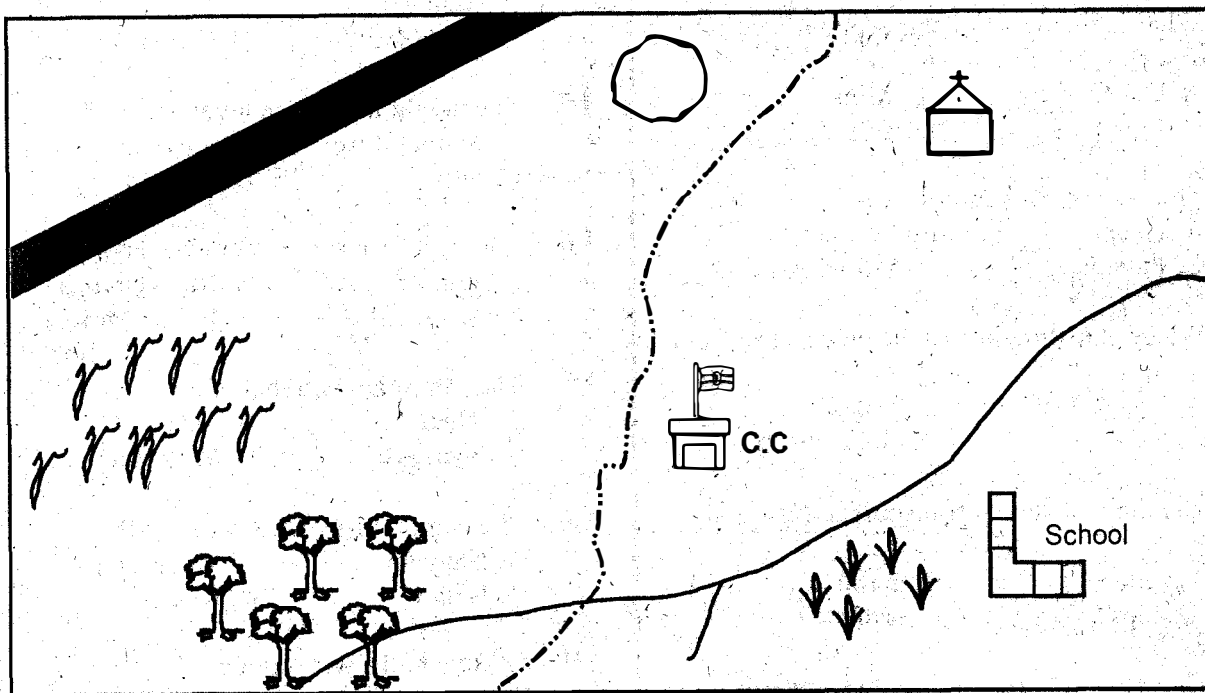
50. Katika barua hii unaweza kusema

- A. Kichwa na Tumbo walisomea shule moja
- B. Kichwa na Tumbo walikuwa marafiki
- C. Kichwa na Tumbo waliishi mjini
- D. Walikuwa wa tumbo moja



PART I: SOCIAL STUDIES

NDARU AREA

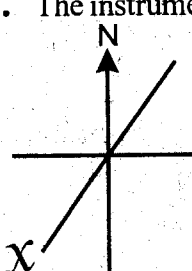


	Murram road		C.C. Chief's Camp
	Maize		Forest
	Quarry		Sub-locational boundary
	Cotton		A river

Use the map of Ndaru area above to answer questions 1-23

1. What is the direction of the church from the maize farm?
A. North West B. North East
C. South West D. North West
2. What is the main economic activity in Ndaru area?
A. Transport B. Lumbering
C. Farming D. Fishing
3. What is the name of the economic activity associated with quarry?
A. Construction B. Mining
C. Lumbering D. Fishing
4. The people of Ndaru area are
A. Hindu B. Muslims
C. Pagans D. Christians
5. What is the direction of the maize farm from the quarry?
A. North East B. South
C. East D. South West
6. The main means of transport in Ndaru area is
A. vehicles B. aeroplanes
C. ships D. trains
7. The river in Ndaru area flows towards
A. North B. South
C. North East D. South West
8. The four points of a compass are known as
A. compass points B. windsock
C. direction D. cardinal points
9. The instrument used to measure temperature is called
A. thermometer B. anemometer
C. compass D. barometer
10. The weather of a place is made up of _____ temperature and rainfall
A. thermometer B. time
C. wind D. rain gauge
11. Natural vegetation is vegetation that
A. planted by man B. grows tall
C. grow naturally D. in the forest

12. Which of the following groups belong to Plateau Notes?
A. Kikuyu B. Somali
C. Luo D. Maasai
13. A place created or built to honour the spirits of dead ancestors is called a
A. cave B. shrine
C. grave D. church
14. Which of the following is a traditional industry?
A. Mining B. Bakery
C. Basketry D. Garage
15. The height above sea level is called
A. temperature B. longitude
C. latitude D. altitude
16. The first Prime Minister of Kenya was
A. Jomo Kenyatta B. Raila Odinga
C. Mwai Kibaki D. Daniel Moi
17. The Maasai called their God
A. Ngai B. Enkai
C. Nyasaye D. Murungu
18. The capital city of Kenya is called
A. Nanyuki B. Mombasa
C. Nairobi D. Kisumu
19. Gikuyu had a wife called
A. Wanjiku B. Agikuyu
C. Mumbi D. Achieng
20. We get _____ from pigs.
A. veal B. pork
C. mutton D. beef
21. A fairly low flat land is called
A. plain B. lowland
C. plateau D. hills
22. The highest mountain in Kenya is called
A. Mt. Elgon B. Mt. Longonot
C. Mt. Rwenzori D. Mt. Kenya
23. The rite of passage from childhood to adulthood is called
A. circumcision B. mutilation
C. initiation D. festivals

24. _____ is a person or someone who foretells about the future.
- A. Prophet B. Rainmakers
C. Cobbler D. Initiator
25. Which one of the following is NOT a type of vegetation?
- A. Forest vegetation
B. woodland vegetation
C. Scrub vegetation
D. Palm vegetation
26. Many sub-counties make up a _____
- A. Country B. District
C. County D. Division
27. Which one of the following is NOT a natural resource?
- A. Forests B. Water
C. Land D. Industries
28. Three of the following are examples of dairy cattle. Which one is NOT?
- A. Fresian B. Zebu
C. Ayrshire D. Jersey
29. Ranches are subdivided into small portions known as _____
- A. portions B. cattle dips
C. paddocks D. zero-grazing
30. Chickens, ducks, geese and turkey are all known as _____
- A. goose B. layers
C. chicks D. poultry
31. Which one of the following is NOT a use of a tree?
- A. Made into firewood
B. Provide timber for building houses
C. Attract rain
D. Create deserts
32. The slowest means of transport is called _____
- A. railway B. water
C. road D. air
33. The proper use of our roads by pedestrians, cyclists, drivers and passengers is known as _____
- A. road safety B. road care
C. road signs D. traffic
34. Arabica is an example of a _____
- A. tea B. country
C. coffee D. continent
35. Planting new trees to replace the ones cut down is called _____
- A. deforestation B. reafforestation
C. afforestation D. forestry
36. In our country, long rainy season is between _____
- A. March and May
B. May and October
C. October and December
D. December and January
37. Moving air is called _____
- A. wet B. cloudy
C. wind D. sunlight
38. Washing away of soil by rainwater or wind is called _____
- A. soil conservation
B. soil fertility
C. soil wasting
D. soil erosion
39. The instrument below is called _____
- A. Rain gauge
B. Rain cross
C. Compass
D. Direction
- 
40. The above instrument is marked X. What is the direction that the letter X represent?
- A. South
B. South West
C. South East
D. North East
41. The two liquids found inside a maximum and minimum thermometer are _____
- A. metal index and vacuum
B. alcohol and mercury
C. mercury and water
D. alcohol and milk
42. Which of the following is not a good moral value?
- A. Kindness B. Honest
C. Forgiveness D. Hatred

43. A County is headed by
 A. Governor
 B. Deputy governor
 C. Senator
 D. Member of parliament
44. The harvesting of fish from water is called
 A. mining
 B. fishing
 C. catching
 D. drying
45. Which soil is best used for modelling?
 A. Loam soil
 B. Sandy soil
 C. Clay soil
 D. None
46. The vegetation that grows along rivers is known as
 A. mangrove B. riverine
 C. hyacinth D. bamboo
47. Which one of the following is **NOT** a basic need?
 A. Television
 B. Food
 C. Shelter
 D. Clothing
48. The people who are employed in game parks to protect wild animals are called
 A. Poachers
 B. Veterinary officers
 C. Tourists
 D. Game rangers
49. How many stanzas are in our National Anthem?
 A. 4 B. 3
 C. 2 D. 1
50. Which form of communication reaches many people?
 A. Newspaper
 B. Radio
 C. Telephone
 D. Television
51. People who fought for independence are called
 A. Soldiers
 B. Warriors
 C. Freedom fighter
 D. Majimaji
52. The raw materials for making clothes is called
 A. sisal
 B. paper
 C. cotton
 D. clay
53. Which of the following was not done by girls in traditional society?
 A. Grinding millet
 B. Feeding children
 C. Cleaning the house
 D. Hunting wild animals
54. What is population?
 A. Number of people living in a place
 B. Number of people initiated together
 C. The number of communities in a country
 D. People living in charge of education in a county.
55. Road users on foot are called
 A. pilots
 B. cyclist
 C. pedestrians
 D. drivers
56. General elections are held after how many years in Kenya?
 A. 5 B. 10
 C. 20 D. 15
57. What do we call the type of farming where animals are **NOT** allowed to go out in the field to graze?
 A. Beef farming
 B. Cattle farming
 C. Dairy farming
 D. Zero grazing
58. A place where dead bodies are burnt is known as
 A. Mortuary
 B. Cemetery
 C. Crematorium
 D. Morgue

59. Red traffic lights tell the driver to
- A. slow down
 - B. stop
 - C. move faster
 - D. mark time

60. The President of the Republic of Kenya is called
- A. Raila Amollo Odinga
 - B. Daniel arap Moi
 - C. Mwai Kibaki
 - D. Uhuru Kenyatta

43. County is headed by
- A. Governor
 - B. Deputy governor
 - C. Senator
 - D. Member of parliament

44. The president of the National Assembly is called
- A. Speaker
 - B. Deputy Speaker
 - C. Member of parliament
 - D. Member of parliament

PART II RELIGIOUS EDUCATION

SECTION A: CHRISTIAN RELIGIOUS EDUCATION

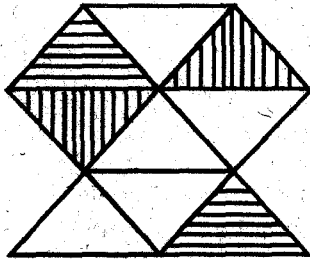
61. God created everything in six days and rested on the seventh day. This special day is called
- A. weekend B. resting day
C. Lord's day D. Christian day
62. God sent _____ to tell the people to get ready to receive Jesus Christ.
- A. Isaiah B. John the Baptist
C. Angel D. Mary
63. Which of the following is a bad effect of weather?
- A. Uprooting plants
B. Warming
C. Providing water
D. Winnowing cereals
64. Jesus Christ had power over death for
- A. He calmed the storm
B. He fed the 5000 people
C. He raised Lazarus from death
D. He walked on water
65. Believers in Jesus Christ were first called Christians in
- A. Galatia
B. Jerusalem
C. Judea
D. Antioch
66. How can a Christian overcome temptations?
- A. Being baptised
B. Fasting only
C. Prayer and the word of God
D. Singing and being baptised
67. Acts 5: 1-11 _____ and _____ died because they chose to be selfish and dishonest.
- A. Sapphira and Peter
B. Annanias and Sapphira
Peter and Annanias
D. Barnabas and Sapphira
68. 2nd Corinthians 9:7 say that we should give
- A. humbly B. reluctantly
C. sadly D. cheerfully
69. Which of the following set of gifts was NOT brought as gift to baby Jesus?
- A. Gold and myrrh
B. Silver and frankincense
C. Frankincense and gold
D. myrrh and frankincense
70. Jacob had twelve sons. Among them who was the youngest?
- A. Benjamin B. Isaac
C. Joseph D. Reuben
71. Abraham's nephew was called
- A. Sarah B. Isaac
C. Lot D. Aaron
72. God commands us to _____ our neighbours as we love ourselves.
- A. love ourselves B. love
C. obey D. help
73. The disciples waited patiently for the gift that was to be sent. The gift was
- A. Jesus
B. commandments
C. holy spirit
D. manna from heaven
74. The first four books in the New Testament are called
- A. John B. Gospels
C. Mathew D. Epistles
75. Jesus fed 4,000 people with
- A. seven loaves and few fish
B. few fish and five loaves
C. five loaves and two fish
D. five fish and seven loaves
76. Church leaders and helpers should
- A. have two wives
B. love money
C. be good character
D. be boastful and proud
77. Jesus went to pray with his disciples on the Mt. of Olives at a place called
- A. Gethsemane B. Golgotha
C. Eden D. Moriah
78. Your friend Wambui was given money by a stranger when going home from school. What advice would you give her?
- A. Report the matter to her parents
B. Buy sweets for her classmates
C. Throw away the money
D. Keep the money
79. Which one of the following organisation does NOT promote peace?
- A. Church
B. Peace club
C. Market place
D. Police force

ISLAMIC RELIGIOUS EDUCATION

80. The parable of the tax collector and the Pharisee in the temple tells us that we should be _____ when praying.
- A. boastful B. happy
C. proud D. humble
81. In the traditional society, which of the following was not a way of expressing peace?
- A. Offering sacrifices
B. Fighting other tribes
C. Talking to each other
D. Sharing a meal
82. Traditional people worshipped in the
- A. Temple B. Church
C. Shrines D. Rivers
83. The father of Jesus was a
- A. priest B. fisherman
C. tax collector D. carpenter
84. Who among the following people climbed a sycamore tree in order to see Jesus?
- A. Mathew B. Zaccheaus
C. Pilate D. Herod
85. The sign of the covenant between God and Abraham was the
- A. rainbow B. floods
C. dove D. fire
86. Jesus performed his first miracle at
- A. Nazareth B. Bethany
C. Judea D. Cana of Galilee
87. How many books are there in the Old Testament?
- A. 27 B. 39
C. 38 D. 66
88. Which one of the following values was not taught to children in the traditional African society
- A. Honesty B. Humility
C. Disobedience D. Tolerance
89. Christians should pray.
- A. always
B. on Sunday
C. in the morning
D. before sleeping
90. Christians celebrate the birth of Jesus Christ during
- A. Christmas
B. Passover
C. Pentecost
D. Easter
61. Surah Fiyl tells us what happened in the year of
- A. sorrow B. elephant
C. opening Makka D. migration
62. It is TRUE to say that Allah (s.w)
- A. Has only one son
B. He was born
C. Is only one
D. Gives birth
63. Which surah is for protection?
- A. Surah Falaq B. Surah Ikhlas
C. Surah Fatiha D. Surah Nasr
64. When angel Jibril brought Qur'an first, he told prophet Muhammad to
- A. wake up B. pray
C. read D. stand
65. Which word of a surah means "The unbelievers"?
- A. Al-maun
B. Al-kauthar
C. Al-asr
D. Al-Kaafirum
66. We should NOT greet people who are
- A. in a meeting
B. reading Qur'an
C. praying
D. talking
67. Allah (s.w) created jinns from
- A. light B. fire
C. stone D. soil
68. We should always respect mothers because _____ is under their feet.
- A. clouds B. universe
C. heaven D. paradise
69. Muslims DON'T eat pork because a pig is just like a
- A. donkey B. dog
C. warthog D. deer
70. _____ prophets of Allah are mentioned in the holy Qur'an.
- A. 25 B. 30
C. 5 D. 50

71. During Isra wal Miiraj the prophet prayed two rakaas in _____ town.
A. Makka B. Shaam
C. Jerusalem D. Madina
72. Who among these was prophet Muhammad's father?
A. Abdul Mutwalib
B. Abu Talib
C. Abdallah
D. Banu Hashim
73. The attribute of Allah "AL KHAALIQ" means
A. the source of peace
B. the source of truth
C. the creator
D. the provider
74. We are NOT allowed to _____ in the mosque.
A. read books B. sell things
C. sleep D. discuss
75. We are rewarded 27 darajaas if we perform a _____ prayer
A. jamaa B. fardh
C. sunna D. daily
76. Which one is NOT a name of an angel?
A. Malik B. Israfil
C. Idris D. Raqib
77. When we start salaah we say the words
A. allahu akbar
B. audhubillahi mina sheitwan
C. bismillahi rahmaan rahiim
D. as-salaam alykum
78. The first ceremony in a Muslim's life is
A. aqiqa
B. miladun nabii
C. ashura
D. nikah
79. Allah (s.w) cursed _____ at mount Swafa.
A. Abu Jahal B. Abu Talib
C. Abu Lahab D. Abu Huraira
80. Heavy najis of a dog and a pig is washed seven times with the use of
A. ash
B. steel wool
C. stones
D. sand
81. New born babies should NOT
A. be circumcised
B. have their ears pierced
C. be given good names
D. be shaved
82. Allah brought a spring called _____ to prophet Isma'il.
A. Jimar
B. Sa'y
C. Zamzam
D. Twawaf
83. "Almuslim akhul Muslim" means that a Muslim is a _____ to another Muslim.
A. neighbour B. visitor
C. relative D. brother
84. Who confuses people and make them to do sins?
A. Malaika B. Iblis
C. Jinn D. Rasuul
85. We fast for _____ days in the month of Ramadhan.
A. 30 B. 10
C. 20 D. 40
86. We should be happy for Sumayya after passing her exams by telling her
A. jazaakallah B. marhaba
C. yaa habiib D. maashallah
87. Knowing and understanding the language of all animal creatures was a miracle of prophet
A. Musa B. Suleiman
C. Daud D. Ibrahim
88. While walking home, you see your best friend Ali smoking. The BEST thing to do is
A. avoid him
B. abuse him
C. advice him on its bad effects
D. tell others about him
89. Jum'a prayer is prayed on Friday
A. midday
B. evening
C. early morning
D. at night
90. King _____ of Habesh was kind and welcoming to Muslims who went there.
A. Najash B. Firaun
C. Namrud D. Ahab

MATHEMATICS**Time: 2 hours**

1. Write forty two thousand, seven hundred and seventy three in symbols.
A. 42173
B. 42773
C. 40773
D. 47732
2. What is the place value of 8 in the number 8439?
A. Ones
B. Hundreds
C. Thousands
D. Eight thousands
3. Which one of the following pairs of factors are for 48?
A. 4 and 8
B. 6 and 7
C. 6 and 8
D. 8 and 4
4. Which of the following numbers is divisible by 2, 5 and 10?
A. 488
B. 925
C. 930
D. 583
5. Find the sum of 4783 and 3241.
A. 7924
B. 8024
C. 7024
D. 1542
6. In the year 2013, Kenya imported 95693 vehicles. In the year 2012, it had imported 3850 more vehicles than in 2013. How many vehicles were imported in the two years altogether?
A. 99543
B. 91843
C. 195236
D. 99453
7. What fraction is unshaded?
- 
- A. $\frac{4}{9}$
B. $\frac{9}{9}$
C. $\frac{5}{9}$
D. $\frac{3}{9}$
8. What is a ninth of 72?
A. 9
B. 8
C. 81
D. 17
9. $\frac{7}{12} + \frac{3}{12} =$
A. $\frac{4}{12}$
B. $\frac{10}{12}$
C. $\frac{9}{12}$
D. $\frac{10}{24}$

10. Work out: $\frac{3}{8} \times 16 =$

- A. 16 B. 8
C. 3 D. 6

11. What is 0.06 as a fraction.

- A. $\frac{6}{10}$ B. $\frac{10}{6}$
C. $\frac{6}{100}$ D. $\frac{100}{6}$

12. What is the place value of 7 in 263.975?

- A. Tens B. Tenths
C. Hundredths D. Thousandths

13. Work out: 125

$$\begin{array}{r} 125 \\ - 97.875 \\ \hline \end{array}$$

- A. 28.875 B. 222.875
C. 27.125 D. 28.125

14. What unit of length can you use to measure the length of the football pitch?

- A. Centimetres B. Kilometres
C. Metres D. Millimetres

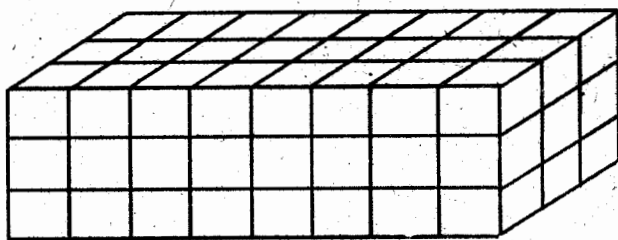
15. The length of a classroom is 8m 45cm. What is the length in centimetres?

- A. 8.45 B. 845
C. 8045 D. 84 500

16. A shopkeeper cut a piece of cloth 4m 25cm long from a roll of cloth 18m 50cm long. How much was left?

- A. 22m 75cm B. 14m 25cm
C. 14m 75cm D. 18m 175cm

17. How many cubes have been used to make the stack below?



- A. 32 B. 36
C. 72 D. 48

18. Work out:

$$\begin{array}{r} \text{m} \qquad \text{cm} \\ 8 \qquad 25 \\ + 9 \qquad 85 \\ \hline \end{array}$$

- A. 17m 100cm
B. 17m 00cm
C. 18m 100cm
D. 18m 10cm

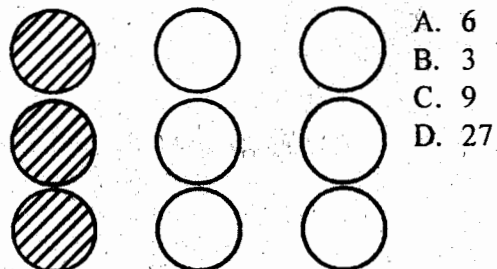
19. Calculate the perimeter of a rectangle which is 95cm by 62cm.

- A. 157cm
B. 314cm
C. 190cm
D. 124cm

20. Ngina had 84 pencils. She shared them among her seven friends equally. How many did each get?

- A. 12 B. 14
C. 8 D. 24

21. A third of 9 is shaded. $\frac{1}{3}$ of 9 =



- A. 6
B. 3
C. 9
D. 27

22. What is the next number in the pattern.

12, 14, 16, _____

- A. 15 B. 30
C. 17 D. 18

23. Mwole had 190 goats. 72 of them died. How many goats were left?

- A. 262 B. 118
C. 122 D. 180

24. What is $\frac{8}{100}$ as a decimal.

- A. 0.8 B. 0.08
C. 0.008 D. 8

25. Work out: $24 \overline{)864}$

- A. 36 B. 35
C. 26 D. 306

26. Wandia drove 324km from Nairobi to Nyeri. He then took a bus to Nakuru a distance of 247km. How many km did he drive altogether?

- A. 569 B. 571
C. 177 D. 471

27. Name the next multiple of 9 after 45.

- A. 405 B. 36
C. 48 D. 54

28. $\frac{1}{3}$ is _____ than $\frac{1}{10}$.

- A. less B. greater
C. equal D. same

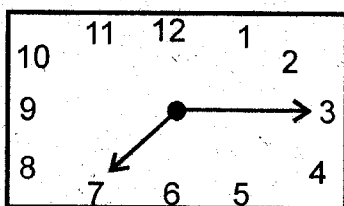
29. What is the value of $2.3 + 1.6 + 6.2$

- A. 9.5 B. 7.8
C. 11.1 D. 10.1

30. Kimani is 6 years old. His father is six times as old. How old is Kimani's father?

- A. 36 B. 12
C. 60 D. 24

31. Victoria arrived at school on the time shown. What time was it?



- A. A quarter past seven o'clock
B. Seven minutes past three
C. A half past three
D. A quarter to seven

32. How many $\frac{1}{4}$ litres are there in 4 litres?

- A. 1 B. 8
C. $\frac{1}{16}$ D. 16

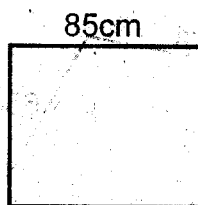
33. What is the total value of 7 in the number 96702?

- A. 700 B. 70
C. 7000 D. 7

34. Which one of the following is not a factor of 36?

- A. 7 B. 6
C. 9 D. 12

35. Find the perimeter of the square drawn.



- A. 170cm
B. 7225cm
C. 255cm
D. 340cm

36. Karou Pry School has 475 boys, 545 girls and 83 teachers. How many people are there in the school altogether?

- A. 1103 B. 1020
C. 1913 D. 628

37. Work out:

$$\begin{array}{r} \text{m} \qquad \qquad \text{cm} \\ 9 \qquad \qquad \qquad 96 \\ \times \qquad \qquad \qquad 3 \\ \hline \end{array}$$

- A. 27m 288cm
B. 28m 88cm
C. 30m 88cm
D. 12m 288cm

38. What is the next number in this series?

- 7, 9, 11, 13, _____
A. 13
B. 15
C. 16
D. 17

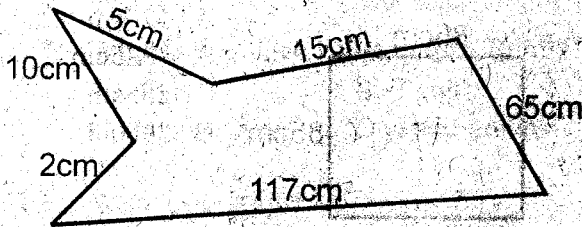
39. Which of the following is a factor of 15?

- A. 13
B. 4
C. 6
D. 3

40. $\frac{9}{10} - \frac{3}{10} =$

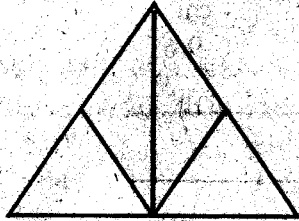
- A. $\frac{6}{10}$ B. $\frac{12}{10}$
 C. $\frac{27}{100}$ D. $\frac{6}{20}$

41. What is the distance round this shape?



- A. 214cm
 B. 204cm
 C. 224cm
 D. 220cm

42. How many triangles are there in the figure below?



- A. 5 B. 4
 C. 7 D. 6

43. Which one of the following fractions has the smallest numerator?

- A. $\frac{3}{13}$ B. $\frac{2}{19}$
 C. $\frac{8}{9}$ D. $\frac{1}{3}$

44. What is the sum of the first four odd numbers?

- A. 17 B. 16
 C. 15 D. 20

45. Write 0.05 as a fraction.

- A. $\frac{5}{100}$ B. $\frac{5}{10}$
 C. $\frac{50}{100}$ D. $\frac{500}{100}$

46. The next multiple of 9 after 63 is

- A. 56
 B. 54
 C. 70
 D. 72

47. How many odd numbers are there between 90 and 100?

- A. 10 B. 5
 C. 2 D. 4

48. Which of the following is an even number?


- A. 990 B. 255
 C. 927 D. 119


49. What is the approximate length of your classroom door?

- A. 12cm B. 12m
 C. 2cm D. 2m

50. Mate gave his sister $\frac{1}{3}$ of a chapati. What fraction was he left with?

- A. $\frac{2}{3}$ B. $\frac{1}{3}$
 C. $\frac{2}{5}$ D. $\frac{3}{4}$





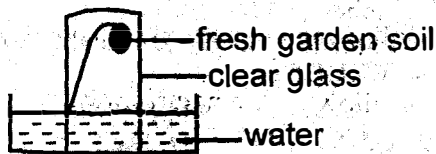


STANDARD FIVE SPECIAL EXAM


SCIENCE

Time: 1 hour 40min

- Which one of the following is **NOT** a natural source of light?
 - Sun
 - Glow worms
 - Moon
 - Fire flies
- The diagram below shows a set up that was used to investigate



- humus
 - living things
 - air
 - water
- The following are uses of heat **EXCEPT**
 - drying clothes
 - keeping away pests
 - cooking
 - warming the house
 - The tool shown below is used to



- digging stony region
 - scooping sand
 - levelling the ground
 - harvesting rice
- Which one of the following weeds can be used as a mild pesticide to keep away house flies?
 - Pig weed
 - Sodom apple
 - Mexican marigold
 - Wandering jew

- The diagram below shows a weather chart.

DAY	MORNING	AFTERNOON
MONDAY		
TUESDAY		
WEDNESDAY		
THURSDAY		
FRIDAY		

Which day was the best to plant cabbage seedlings?

- Monday
 - Thursday
 - Tuesday
 - Friday
- Which group of nutrients is missing in the foods below?
Cassava, potatoes, oranges, ripe bananas
 - Proteins
 - Carbohydrates
 - Minerals
 - Vitamins
 - Which one of the following materials cannot be used to form manure?
 - Dead animals
 - Sand
 - Dry leaves
 - Banana peels
 - Which phase of the moon is seen before the full moon?
 - Gibbous
 - Crescent
 - New moon
 - Half moon
 - At the age of 12 years a child normally has about how many teeth?
 - 22
 - 32
 - 28
 - 20
 - One of the following is grown as a cash crop as well as a food crop. Which one?
 - Coffee
 - Maize
 - Cotton
 - Pyrethrum

12. Which one of the following is NOT a cereal crop?

- A. Peas
B. Wild rice
C. Sorghum
D. Oats

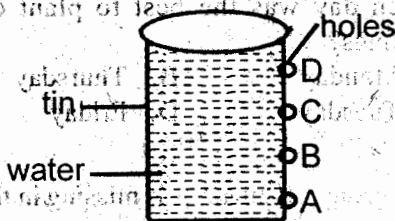
13. One of the following foods does NOT help to make our teeth strong. Which one?

- A. Apple
B. Banana
C. Sugarcane
D. Carrot

14. Which one of the following is NOT a fibre crop?

- A. Mango
B. Sisal
C. Cotton
D. Palm trees

15. The diagram below shows an experiment done by class five pupils. Study and answer the question below.



Which hole had the third highest pressure?

16. Which weed produces flowers at the tip of its shoot?

- A. Oxalis
B. Pigweed
C. Mexican marigold
D. Black jack

17. The clouds drawn below shows a sign of



- A. stormy weather
B. fine weather
C. sunny weather
D. cold weather

18. Which one of the following tools require the following maintenance?

- i) sharpened
ii) cleaned
iii) oiling if to be stored for a long time
A. Hammer
B. Fork jembe
C. Mattock
D. Secateurs

19. The following materials were collected by class five pupils.

- i) razor blade
ii) cork
iii) pin
iv) leaf

Which group below consists of floaters?

- A. Cork and pin
B. Razor blade and pin
C. Leaf and pin
D. Leaf and cork

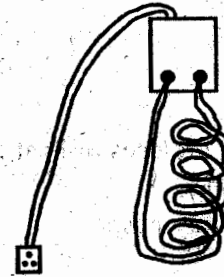
20. An inflated rubber tube can help the swimmer to float on water because of

- A. rubber
B. air
C. water
D. weight

21. The following are natural ways of lighting a house EXCEPT

- A. skylights
B. window
C. door
D. wall

22. The diagram drawn below is called



- A. immersion cooler
B. immersion heater
C. spring balance
D. shock absorber

23. The following are sources of heat EXCEPT

- A. cowdung
B. gas
C. electricity
D. fire fly

24. The best soil to use when constructing a fish pond is

- A. loam
B. sand
C. clay
D. stones

25. All the animals have common characteristics EXCEPT

- A. die
B. make food
C. remove waste
D. grow

26. The animal drawn below move by



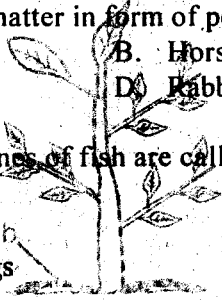
- A. wriggling
B. slithering
C. walking
D. crawling

27. A spider feeds by

- A. sucking
B. chewing
C. pecking
D. biting

28. Which one of the following animals produce solid waste matter in form of pellets?

- A. Cow
B. Horse
C. Chicken
D. Rabbit



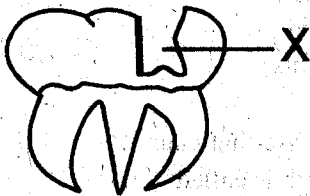
29. The young ones of fish are called

- A. toads
B. tadpoles
C. fingerings
D. piglets

30. When several young ones are born at the same time to the same mother animal they are called


- A. litter
B. chicks
C. twins
D. flock

31. The tooth infection shown below is caused by



- A. sugary foods
B. bacteria
C. acid
D. flouride

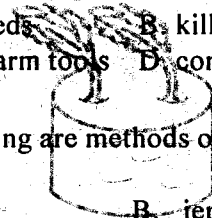
32. The method of supplying plants with water shown below is called



- A. bottle irrigation
B. drip irrigation
C. sprinkler
D. earth irrigation

33. Chemicals are used in the farm for various reasons EXCEPT

- A. kill weeds
B. kill pests
C. clean farm tools
D. control diseases



34. The following are methods of storing water EXCEPT

- A. drums
B. jerricans
C. pipes
D. buckets

35. When soil is heated strongly, which one of the following is finally observed?

- A. Water droplets
B. Smoke
C. Humus
D. Air

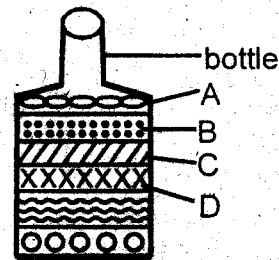
36. One of the following small animals is NOT found in the soil.

- A. Weevils
B. Termites
C. Worms
D. Ants

37. The best soil for growing coffee is

- A. clay soil
B. loam soil
C. sand soil
D. humus

38. The diagram below was done by class five pupils while observing the soil components.



Which layer contains dead plant and animals remains?

- A. B
B. D
C. A
D. C


39. During the rainy season, small animals come out to the soil surface

- A. to avoid drawing
B. to breath
C. to feed
D. to reproduce

40. One of the following is NOT a protective food. Which one?

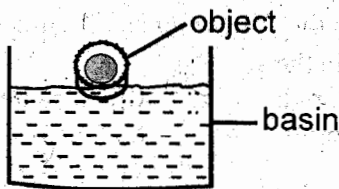
- A. Pigweed
B. Guavas
C. Oxalis
D. Mango

41. The diagram below shows plants growing in darkness.



What has made the plants to bend?

- A. Darkness
 - B. Sunlight
 - C. Water
 - D. Air
42. The diagram below shows an object floating in water.



What will make the object to sink?

- A. Adding more water
 - B. Folding the basin
 - C. Folding the object
 - D. Adding wax
43. Which one of the following animals have stinging organ?
- A. Cricket
 - B. Scorpion
 - C. Butterfly
 - D. Chameleon

44. Tools that are used to be stored for a longer period of time should be kept dry to prevent
- A. rusting
 - B. breaking
 - C. accidents
 - D. theft

45. The substances that are contained in various foods that keep us in good health are called
- A. nutrients
 - B. medicines
 - C. balanced diet
 - D. poison

46. One of the following foods help to make our teeth strong
- A. banana
 - B. carrot
 - C. cabbage
 - D. potatoes

47. Class five pupils listed the following animals.

- i) rabbit
- ii) snake
- iii) grasshopper
- iv) mole

Which one of the above animals burrows the ground to make a home?

- A. rabbit
- B. snake
- C. grasshopper
- D. mole

48. The following practice was done by class five pupils. The method can be used to?



- A. Control pests in crops
- B. Control weeds
- C. Control diseases
- D. to kill earthworms

49. The virus that causes HIV/AIDS are **MAINLY** found in

- A. bones
- B. urine
- C. blood
- D. mucus

50. The disease that causes red swollen gums and bad breath is called

- A. dental carries
- B. gingivitis
- C. bacteria
- D. dental