



KCPE TRIAL EXAMINATION

STANDARD 7

SCIENCE

Time: 1 Hour 40 minutes

READ THESE INSTRUCTIONS CAREFULLY

1. You have been given the question booklet and a separate answer sheet. The question booklet contains 50 questions.
2. Do any necessary rough work in this booklet.
3. When you have chosen your answer, mark it on the **ANSWER SHEET**, not in the question booklet.

HOW TO USE THE ANSWER SHEET

4. Use an ordinary pencil only.
5. Make sure that you have written on the answer sheet

YOUR INDEX NUMBER

YOUR NAME

NAME OF YOUR SCHOOL

6. By drawing a **dark line** inside the correct numbered boxes mark your full Index Number (i.e. School Code Number and the three-figure Candidate's Number) in the grid near the top of the answer sheet.
7. Do not make any marks outside the boxes.
8. Keep your answer sheet as clean as possible and do not fold it.
9. For each of the Question 1 – 50 four answers are given. The answers are lettered A, B, C and D. In each case only **ONE** of the four answers is correct. Choose the correct answer.
10. On the answer sheet the correct answer is to be shown by drawing a **dark line** inside the box in which the letter you have chosen is written.

EXAMPLE

In the Question Booklet:

4. The following are functions of plant roots. Which one is NOT?
- | | |
|-----------------------|-----------------------|
| A. Absorbing water. | B. Making plant food. |
| B. Holding the plant. | D. Storage of food. |

The correct answer is B

On the answer sheet:

4 [A] **C** [D] **14** [A] [B] [C] [D] **24** [A] [B] [C] [D] **34** [A] [B] [C] [D] **44** [A] [B] [C] [D]

In the set of boxes numbered 4, the box with the letter D printed in it is marked.

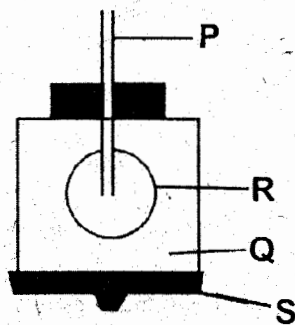
11. Your **dark line** **MUST** be within the box.
12. For each question **ONLY ONE** box is to be marked in each set of four boxes.



TURN OVER

- Which one of the following is not part of the milk teeth?
 - Molars.
 - Incisors.
 - Premolars.
 - Canines.
- The following are human sensory organs. Which one is not?
 - Skin.
 - Tongue.
 - Heart.
 - Nose.

Use the diagram below to answer questions 3 and 4.



- The diagram represents the _____ human body
 - Circulatory body.
 - Breathing system.
 - Reproductive system.
 - Digestive system.
- Which letter represents the trachea?

A. P	B. Q
C. R	D. S
- The component of blood which prevents the entry of germs after injury is

A. Red cells.	B. White cells.
C. Platelets.	D. Plasma.
- The following are female reproductive organs. Which one is not?
 - Ovary.
 - Vagina.
 - Oviduct.
 - Urethra.

- Which statement below is not correct about the blood vessel shown in the diagram shown below?



- Carries deoxygenated blood.
 - Carries blood to the heart.
 - Carries blood under high pressure.
 - Has a pulse.
- From the word AIDS, which letter means to "get from"?

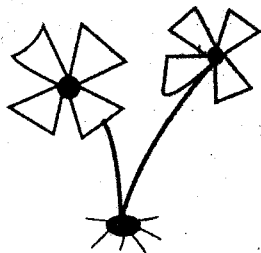
A. A	B. I
C. D	D. S
 - The best method of preventing the spread of HIV and AIDS among teenagers is by?
 - Being faithful.
 - Having one partner.
 - Abstaining.
 - Using a condom.
 - In the table below which vaccine is not matched with the part of the body that it is administered?

Vaccine	Part of the body
A. Polio vaccine	Mouth
B. BCG	Right hand
C. DPT	Left thigh
D. Antimeasles	Left arm.
 - Which one of the following is an effect of HIV and AIDS to an individual?
 - Poor economic growth.
 - Lack of parental care.
 - Stigmatization.
 - Congestion in healthcare services.
 - Medicinal drugs that are used to treat known diseases are called?
 - Vaccines.
 - Pain killers.
 - Stimulants.
 - Antibiotics.

13. The following are health effects of abusing drugs. Which one is not?

- A. Memory loss.
- B. Depression.
- C. Rape.
- D. Brain damage.

14. Standard 4 pupils collected the weed shown below.



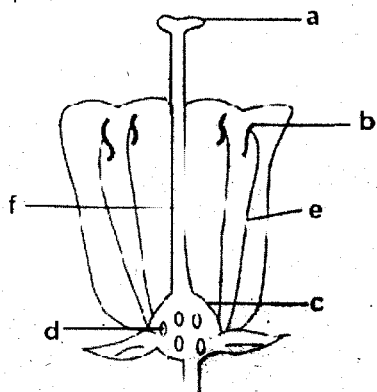
What is the name of the weed shown in the diagram?

- A. Datura.
 - B. Oxalis.
 - C. Blackjack.
 - D. Wandering Jew.
15. Which pair below shows crops that belong to the same group?
- A. Tea and arrowroots.
 - B. Flax and cotton.
 - C. Coconut and coffee.
 - D. Maize and beans.

16. The following are functions of plant leaves. Which one is not?

- A. Absorption.
- B. Photosynthesis.
- C. Breathing.
- D. Transpiration.

Use the diagram below to answer questions 17 and 18.



17. Which letters represents the stamen?

- A. a and f
- B. d and e
- C. b and c
- D. b and e

18. The flower shown above is likely to be pollinated by?

- A. Wind.
- B. Water.
- C. Insects.
- D. Birds.

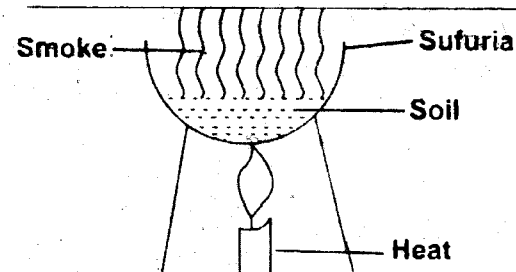
19. Which one of the following is the odd one out?

- A. Fern.
- B. Moss.
- C. Mould.
- D. Algae.

20. Standard 7 pupils were asked to name examples of field pests. Which one of the following shows the correct list?

- A. Weevils, cutworms, aphids.
- B. Aphids, weaverbirds, cutworms.
- C. Termites, weevils, rats.
- D. Aphids, weevils, termites.

21. The activity below was one by standard 4 pupils



Which component of soil were the pupils investigating?

- A. Air.
- B. Organic matter.
- C. Moisture.
- D. Animals.

22. Which one of the following is not true about the best soil for moulding?

- A. It cracks when dry.
- B. It is well aerated.
- C. It has a smooth texture.
- D. It has the lowest drainage.

23. Which of the following is not a macro nutrient needed by plants?

- A. Nitrogen.
- B. Oxygen.
- C. Phosphorous.
- D. Zinc.

24. Standard 4 pupils were asked by their science teacher to bring materials for investigating pressure in liquids. Which of the following was not needed?

- A. Nail.
- B. Plasticine.
- C. Collecting jar.
- D. Water.

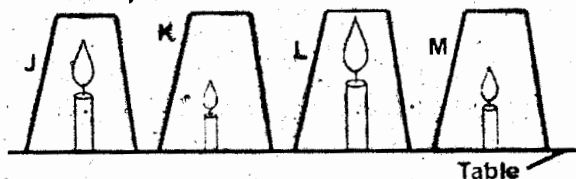
25. Which liquid below spreads very fast when poured on a sloppy surface?

- A. Spirit.
- B. Honey.
- C. Oil.
- D. Water.

26. Movement of ink in a glass of water is known as?

- A. Diffusion.
- B. Capillarity.
- C. Osmosi.
- D. Dissolving.

27. Standard 6 pupils carried out the activity shown below



In which glass did the candle take the longest time to go out?

- A. J
- B. K
- C. L
- D. M

28. Which two components of air when put together forms 22% of air by volume?

- A. Oxygen and nitrogen.
- B. Nitrogen and carbondioxide.
- C. Carbondioxide and raregases.
- D. Oxygen and raregases.

29. Standard 5 pupils were asked by their science teacher to name a substance that would melt at the lowest temperature, they gave their answer as follows:

- i. John-iron.
- ii. Mary-candle wax.
- iii. Peter-ice.
- iv. Ann-plastic.

Among the four pupils, who gave the correct answer?

- A. John
- B. Mary.
- C. Peter.
- D. Anne.

30. Which form of energy affects our sense of sight?

- A. Light.
- B. Sound.
- C. Electricity.
- D. Heat.

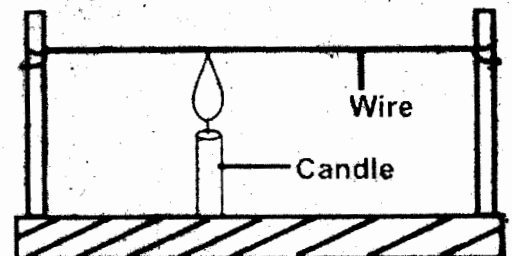
31. Standard 4 pupils were asked to give reasons for lighting the house. Which one of the following was not correct?

- A. Warm the house.
- B. See clearly.
- C. Prevent accidents.
- D. Keep away pests.

32. Heat from the sun reaches our head by a process called?

- A. Conduction.
- B. Convection.
- C. Reflection.
- D. Radiation.

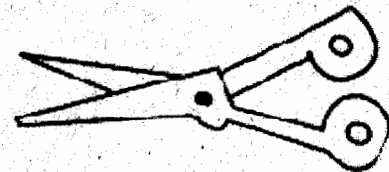
33. Standard 5 pupils carried out the investigation shown in the diagram shown below



From the activity, they concluded that

- A. Solids conduct heat.
- B. Solids contract on cooling.
- C. Solids change state on heating.
- D. Solids expand on heating.

34. Which material below does not allow electricity to pass through?
 A. Copper coin. B. Silver coin.
 C. Rubber band. D. Carbon rod.
35. Which list below shows the biotic component of the environment?
 A. Plants, soil and animals.
 B. Animals and plants.
 C. Water, air and soil.
 D. Water and soil.
36. Which activity below does not show conservation of water?
 A. Mulching.
 B. Re-using water.
 C. Using overhead irrigation.
 D. Closing taps when not in use.
37. Water can be polluted in the following ways except?
 A. Oil spillage.
 B. Releasing treated sewage in rivers.
 C. Floods.
 D. Using chemical fertilizer.
38. Which one of the following is not correct about bilharzias?
 A. It makes a person to have itchy bowels.
 B. It is caused by a fluke.
 C. It affects the bladder and the intestines.
 D. It makes a person to have violent diarrhoea.
39. Which planet below has the greatest gravitational force?
 A. Jupiter. B. Earth.
 C. Mercury D. Mars.
40. Which one of the following should be done to an air thermometer to make reading of temperature change easy?
 A. Using a narrow tube.
 B. Placing a cork on the glass bottle.
 C. Using coloured water.
 D. Using a thin walled glass bottle.
41. Which simple tool on the farm is not matched with its use?
 A. Mattock-weeding.
 B. Rake-collecting rubbish.
 C. Spade-scooping soil.
 D. Slasher-cutting long grass.
42. The following are reasons for maintaining simple tools. Which one is not?
 A. Prevent rusting.
 B. Make them durable.
 C. Prevent accidents.
 D. Make them attractive.
43. Force of gravity is also known as?
 A. Magnetism.
 B. Weight.
 C. Friction.
 D. Inertia.
44. The diagram below shows a lever in use



Which lever below belongs to the same group of levers as the one shown?

- A. Wheelbarrow.
 B. Spade.
 C. Door hinge.
 D. Clawhammer.
45. The following are characteristics of animals. Which one is not?
 A. All animals move.
 B. All animals excrete.
 C. All animals give birth.
 D. All animals respond to stimuli.
46. Which one of the following is not a common feature among all mammals?
 A. They have mammary glands.
 B. They give birth.
 C. They are warm blooded.
 D. They have a backbone.

47. The following are rotational methods of grazing animals. Which one is not?

- A. Tethering.
- B. Herding.
- C. Padocking.
- D. Strip grazing.

48. Which one of the following is not a basic food group?

- A. Mineral salts.
- B. Vitamins.
- C. Carbohydrates.
- D. Proteins.

49. Which one is not true about a child suffering from kwashiorkor?

- A. Cries very much.
- B. Is very alert.
- C. Has swollen limb.
- D. Has loose thin hair.

50. The following are traditional methods of preserving food. Which one of them acts as a mild pesticide?

- A. Drying.
- B. Smoking.
- C. Use of honey.
- D. Use of ash.



JARIBIO LA MTHANI WA KCPE

DARASA LA SABA

LUGHA YA KISWAHILI

Muda: Saa 1 dakika 40

SOMA KWA MAKINI MAAGIZO YAFUATAYO

1. Umepewa kijitabu hiki cha maswali na karatasi ya kujibu. Kijitabu hiki kina maswali 50.
2. Ikiwa utataka kuandika chochote ambacho si jibu andika katika kijitabu hiki.
3. Ukisha chagua jibu lako lionyeshe katika **KARATASI YA MAJIBU** na wala siyo katika kijitabu hiki cha maswali.

JINSI YA KUTUMIA KARATASI YA MAJIBU

4. Tumia penseli ya kawaida.
5. Hakikisha ya kwamba yafuatayo yameandikwa katika karatasi ya majibu.

NAMBA YAKO YA MTHANI

JINA LAKO

JINA LA SHULE YAKO

6. Kwa kuchora kistari katika visanduku vyenye namba zinazokuhusu, onyesha namba yako kamili ya mthani (yaani namba ya shule na zile namba tatu za mtahiniwa) katika sehemu iliyotengwa mwanzo wa karatasi ya majibu.
7. Usitie alama zozote nje ya visanduku.
8. Iweke safi karatasi yako ya majibu.
9. Kwa kila swali 1 – 50 umepewa majibu manne. Majibu hayo yameonyeshwa kwa herufi A, B, C, D. Ni jibu **MOJA** tu kati ya hayo manne ambayo ni sahihi. Chagua jibu hilo.
10. Kwenye karatasi ya majibu, jibu sahihi lionyeshe kwa kuchora kistari katika kisanduku chenye herufi uliyochagua kuwa ndilo jibu.

MFANO

Katika kijitabu cha maswali:

21. Ni sentensi ipi inayoonyesha 'ki' ya wakati.
 - A. Tukienda tutawapata.
 - B. Kila mtu asimame.
 - C. Walikalia kiti kizuri.
 - D. Walikipenda kiazi.

Katika karatasi ya majibu

1 [A] [B] [C] [D] **11** [A] [B] [C] [D] **21** [B] [C] [D] **31** [A] [B] [C] [D] **41** [A] [B] [C] [D]

Katika visanduku vinavyoonyesha majibu ya swali namba 21, kisanduku chenye herufi **A** ndicho kilichochoywa kistari.

11. Chora kistari chako vizuri. Kistari chako kiwe cheusi na kisijitokeze nje ya kisanduku.
12. Kwa kila swali, chora kistari katika kisanduku kimoja tu kati ya visanduku vine ulivopewa.

TURN OVER

Jaza mianya ya swali la 1-15 kwa jibu sahihi

Kila abiria ana _____ 1 _____ ya kusafirishwa kwa usalama na jinsi ipasavyo. Sheria za _____ 2 _____ ni muhimu na zinastahili _____ 3 _____ na kufuatwa. Ni sekta _____ 4 _____ usafiri _____ 5 _____ liyotawaliwa na upuuzi tele wa kanuni. Si ajabu kuwa dereva ataweza kuingia kwenye gari _____ 6 _____ abiria _____ 7 _____ si magunia ya mahindi huku akiwa amepiga _____ 8 _____. Ni tabia inayokera mno kupuuzwa malalamishi ya abiria yana _____ 9 _____ tokana na uendeshaji mbovu wa magari.

Mapenzi na tamaa ni sababu kati ya _____ 10 _____ _____ 11 _____ madereva wetu kukosa adabu na kutenda _____ 12 _____ wapedavyo. Wakati umewadia maafisa wa trafiki na madereva waanze, _____ 13 _____ uzingatiaji wa sheria hizi wala si pahala _____ 14 _____ ambapo hapana wa kuwababisha wala kuwatia _____ 15 _____.

A.	B.	C.	D.
1. Jukumu	wajibu	haki	sheria
2. Baraste	barabarani	barabara	gurufa
3. Kutunzwa	kufurushwa	kutweza	kupuuzwa
4. la	za	ya	na
5. I	li	zi	u
6. Ya	na	la	ja
7. Mbali	wala	sembuse	zaidi ya
8. Bao	pambaji	maji	mbinja
9. O	yo	zo	lo
10. Zingine	nyingine	zinginezo	nyinginezo
11. Zinazopelekea	zinazosababisha	linalopelekea	linalosababisha
12. Kame	ndio	sisi	wao
13. Kuonyesha	kuonesha	onyesha	onesha
14. Kokote	momote	popote	lolote
15. Tumbo maji	tumbo joto	moyo konde	moyo

Kutoka swali la 16 mpaka 30 chagua jibu lililo sahihi

16. Wingi wa sentensi
Gari lake limepakwa rangi
A. Magari yake yalipakwa rangi
B. Magari yao yamepakwa marangi
C. Magari zao imepakwa
D. Magari yao yamepakwa rangi
17. Sigi, mbayuwayu, kasuku ni aina ya
A. Nyuni
B. Vikembe
C. Wanyama
D. Samaki
18. Tunasema kicha cha funguo na korija la
A. Maua
B. Blanketi
C. Barua
D. Samaki
19. Kanusha : Ninakula
A. Sikuli
B. Sili
C. Hatuli
D. Nala

20. Chagua sentensi sahihi

- A. Samaki yoyote anunuliwe
B. Gari jingine limenunuliwa
C. Madawa ya kulevya si mazuri
D. Mabaharia wale wana maseremala

21. Hili ni umbo la



- A. pia
B. Hori
C. Mche
D. uru

22. Kamilisha methali

- Mkataa la wengi ni _____
A. Kapera
B. Maskini
C. Mchoyo
D. Mchawi

23. Maneno ng'ombe, ng'oa, ng'ara yana sauti ya ving'ong'o. alama ya kuakifisha iliyotumiwa ni:

- A. Ritifaa
B. Koma
C. Kituo
D. kipumuo

24. Tegua kitendawili
Nitazame nikwambie
A. Kasuku
B. Kioo
C. Rungoya
D. Maji
25. Nomino nywele hupatikana katika ngeli ya
A. U-U
B. U- YA
C. I-ZI
D. U-ZI
26. Barua ya kirafiki ina anwani ngapi?
A. Moja
B. Mbili
C. Tatu
D. Moja na nusu
27. Mkato wa mama yake ni:
A. Mamae
B. Mamake
C. Mamaye
D. Mamaya
28. Chagua kivumishi katika sentensi hii
Kitabu chochote kiletwe hapa.
A. Chochote
B. Kitabu
C. Hapa
D. Kiletwe
29. Chagua kiambishi sahihi
Mazingira __liyohifadhiwa vyema hupendeza
A. I
B. Zi
C. Ya
D. U
30. Tumia kiashiria radidi
Kiatu__ni kizuri
A. Hiki hiki
B. Kiki hiki
C. Hii hii
D. chichi hiki

Soma kifungu kifuatacho kasha ujibu maswali 31-40

KAUNTI YA LAMU,
S.L.P 1099,
MPEKETONI.
22/10/2014.

MHARIRI,
C ZETI LA TUJUE LEO,
S.L.P 7700,
MALINDI.

Kwa Bibi/ Bwana,
KUH: USAFI JIJINI UMEZOROTA

Kaunti ya Lamu imegeuka kuwa mabwi ya milima ya taka za kila aina. Ni jambo la kusikitisha kupata kwamba hata katikati ya mji mkuu wa kaunti ambako shughuli mbalimbali za umma huendelezwa hakupitiki. Pindi tu mtu aingiapo mjini, pua yake husalimika na uvundo usiovumilika.

Hali hii ya kutoimarisha usafi kauntini imechangiwa zaidi na wachuuzi wa matunda ambao huyaacha mabaki ya matunda hayo kujiozea tu mitaani na kuhanikiza fondogoo la kila namna. Wafanyibiashara wengine sasa wameanza kuuhama mji kwa sababu ya hali hii ya kusikitisha.

Kuzorota kwa usafi hokusababishi tu kuchukizwa kwa wenyeji na kuona kinyaa bali pia huwafanya hata watalii wanaotaka kuzuru kuchelea kufanya hivyo. Nani anataka kuacha kwao peponi kuja kujitia najisi huku bure.

Wananchi wana dhima ya kuimarisha usafi katika kaunti. Wale wanaongojea wengine kuja kuimarisha shughuli za usombaji taka wanafaa wajitolee na kuinama kudumisha usafi wa mazingira kwa jumla.

Wako mwaminifu

Mwana Heri

31. Hii ni aina gani ya barua?
 A. Barua rasmi
 B. Barua ya Heri
 C. Barua ya kirafiki
 D. Barua ya mazungumzo
32. Mwandishi wa barua hii ni:
 A. Mhariri
 B. Mwana Heri
 C. Mpeketoni
 D. Tujue leo
33. Tofauti ya barua hii na ile ya aina nyingine ni yafuatayo ila:
 A. Anwani mbili
 B. Sahihi
 C. Salamu kwa mwandikiwa
 D. Kimalizio cha wako mwaminifu
34. Kaunti ni sehemu gani
 A. Sehemu fulani kule Lamu
 B. Eneo linalowakilishwa na Gavana
 C. Eneo la mhariri wa tujue leo
 D. Sehemu kwa mhariri kule mpeketoni
35. Nomino kauntini hupatikana katika ngeli gani
 A. I-ZI
 B. LI- YA
 C. PA-KU-MU
 D. U-ZA
36. Chagua kauli ambayo si sahihi kulingana na kifungu
 A. Mwandishi si Mwana Heri
 B. Mwandishi anaishi mpeketoni
 C. Mwandishi analalamika kwa sababu ya uchafu
 D. Matunda yaliyooza ndiyo yanayosambaza harufu mbaya mjini
37. Ni kweli kusema
 A. Mjini mwa mwandishi ni pachafu
 B. Watalii hawaogopi kaunti ya mwandishi
 C. Mwana Heri ni mhariri wa gazeti la Tujue Leo
 D. Barua hii ni rasmi
38. Maana yakuchelea.....kulingana na kifungu ni:
 A. Kuogopa
 B. Kuchelewa
 C. Kutoroka
 D. Kutembelea

39. Mwandishi:
 A. Ni Gavana wa kaunti ya Lamu
 B. Anaonelea wanaosababisha uchafu kauntini ni wachuuzi
 C. Hatoki mpeketoni
 D. Halalamikii uchafu gatuzini
40. Kwa nini wanabiashara wanahama kauntini
 A. Kuna harufu inayosababisha kinyaa mjini
 B. Watalii kujaa mjini na kuwanyima nafasi
 C. Kuzorota kwa usalama mjini
 D. Shughuli nyingi pale mjini

Soma kifungu hiki kisha ujibu maswali 41-50

Twamshukuru Mwenyezi, kwawe wingi ukarimu,

Alo na kitu cha enzi, mola wetu akramu,
 Kutupa kitu azizi, lugha kuitakalamu,
 Lugha ni kitu kitamu, ujuwapo kutumia

Lugha mkuu mlezi, aliaye binadamu,
 Hata wanyama jambazi, wana lugha wafahamu,
 Hufungwa simulizi, izaayo tabasamu,
 Lugha huwa ni imamu, ujuwapo kuitumia

Lugha hodari mkwezi, akweaye tatu ngumu
 Huzifyeka pingamizi, zizushazo uhasimu,
 Ikazidisha mapenzi, wapenzi pasi mbari kudhulumu,
 Lugha huyeyusha sumu, ujuwapo kuitumia.

Lugha ndiye mpagazi, mazito kuyahudumu,
 Pia hupanga vizazi, pasi mbari kudhulumu,
 Aidha hufanya kazi, ikawa mustakimu,
 Lugha huwa ni timamu, ujuwapo kuitumia,

Lugha ni mpelelezi, waovu kuwakasimu,
 Huwatoa palo wazi, kushuhudia kaumu,
 Yasifiwa na wajuzi, kwani kitu adhimu,
 Lugha mkuu hakimumu, ujuwapo kuitumia
 (Kutoka -Uchambuzi wa Mashairi 1999)

41. Shairi hili ni la bahari gani ?
 A. Tathilitha
 B. Tarbia
 C. Takhimisa
 D. tasdisa

42. Shairi hili lina beti ngapi?
 A. 4
 B. 5
 C. 7
 D. 6
43. Shairi zima lina mishororo mingapi?
 A. 20
 B. 24
 C. 16
 D. 4
44. Vina vya kati na vya mwisho katika ubeti wa tatu ni
 A. U-I
 B. MU-ZI
 C. ZI-MU
 D. U-I
45. Mleo wa ubeti wa tatu ni
 A. Lugha ndiye mpagazi, mazito kuyahudumu,
 B. Ikazidisha mapenzi, wapenzi pasi mbari kudhulumu,
 C. Hufungwa simulizi, izaayo tabasamu
 D. Huzifyeka pingamizi, zizushazo uhasimu
46. Kulingana na shairi lugha si:
 A. Kitu kitamu
 B. Kichochezi cha mapenzi
 C. Mpelelezi
 D. Si mlezi mkuu
47. Kipi si kisawe cha Mola:
 A. Rabana
 B. Rabuka
 C. Mahuluki
 D. Mungu
48. Maana yalugha ndiye mpagazi....ni
 A. Lugha uzidisha mapenzi
 B. Lugha hupanga vizazi
 C. Lugha hubeba vyote na wote
 D. Lugha ni kifo adhimu
49. Kulingana na shairi hili ni lipi lisizeshwa na lugha
 A. kupeleleza
 B. Upendo
 C. Kukwea
 D. kusaliti
50. Kichwa mwafaka cha shairi hili ni:
 A. Lugha kitu kitamu
 B. Lugha
 C. Lugha hakimu
 D. Lugha imamu

Read the passage below carefully. It contains blank spaces numbered 1 - 15. Choose the BEST answer from the choices given for each blank space

When I was young _____ 1 _____ used to stay with my grandmother _____ 2 _____ school holidays. _____ 3 _____ was no end to the different types of greens she _____ 4 _____ prepare. She used to _____ 5 _____ them with my _____ 6 _____ rice dish cooked _____ 7 _____ coconut milk.

One day _____ 8 _____ would cook leaves _____ 9 _____ cassava or leaves from bean plants, and _____ 10 _____ day she would boil _____ 11 _____ grass which tasted very _____ 12 _____. There is still _____ 13 _____ of this grass, but nobody _____ 14 _____ even to look _____ 15 _____ it these days.

- | | | | |
|---------------|------------|-----------|-----------|
| A | B | C | D |
| 1. But | because | even | and |
| 2. At | upon | over | after |
| 3. Their | there | when | while |
| 4. Will | may | should | would |
| 5. Save | serve | safe | sieve |
| 6. Favourite | favourable | favoured | favouring |
| 7. With | into | on | for |
| 8. They | she | he | her |
| 9. For | to | off | from |
| 10. The | later | next | another |
| 11. Every | much | some | many |
| 12. Delicious | delicate | dedicated | different |
| 13. Plenty | several | many | fewest |
| 14. Seems | seams | seam | seem |
| 15. For | on | of | at |

For questions 16 to 20 choose the BEST word to complete the sentence

16. None of our bulls _____ awarded a prize.
 A. are B. is
 C. was D. were
17. Atoro has _____ in many races.
 A. ren
 B. ran
 C. run
 D. runs
18. The tired old man _____ down on the sand and slept.
 A. laid
 B. lied
 C. lain
 D. lay
19. The boys _____ Wamugo because he was very selfish.
 A. envied
 B. admired
 C. despised
 D. respected

20. All of them _____ Miriam are coming.
 A. accept B. expect
 C. ascend D. except

For questions 21 - 23, choose the word that means the same as the underlined word

21. The cleverest student in Mr. Biar's class was rewarded.
 A. dull
 B. brightest
 C. greatest
 D. popular
22. The leader gave a brief but informative speech.
 A. shot
 B. quick
 C. short
 D. fast
23. It was such a disgrace to see Kahiro walking out of the compound in handcuffs.
 A. trouble
 B. shame
 C. poverty
 D. poverty

For questions 24 and 25, give the meaning of the idioms given

24. To face the music.

- A. To dance to the beats.
- B. To meet your expectations.
- C. To be mistreated.
- D. To meet your worst

25. To put the cart before the horse.

- A. To be a failure in life.
- B. To begin something on the wrong side.
- C. Not to succeed in what you do.
- D. To do the impossible

Read the passage below and answer questions 26 - 30

Friday's traffic accident in the centre of Nakuru that saw three people killed and several others seriously injured was the latest in the increasing return of what was once referred to as matatu madness. Though the problem is not confined to the matatu industry. It also involves other forms of public transport. Actually, commuter transporters are the most visible offenders. That recklessness and indiscipline have stealthily but steadily crept back into the public transport. The most obvious sign of this creeping indifference to the observance of the rules of the road is that few matatu care to display the yellow line as the rules of the road are routinely ignored. The traffic police, finally, seem to have gone soft on offenders.

Of course, with the power of hind light, it was inevitable that the situation would slip back into its old self the minute the players in the industry realised that the authority was not paying attention any more.

The players in the industry are like naughty but devious children who need constant supervision. The minute they sense they are not being watched they tend to return to the bad old ways, and very fast at that. This could be due to the departure of the very able former minister for transport Mr. Michuki who worked very hard to tame the public service vehicle sector during his reign. His departure seem to signal that it is business as usual.

His successor started off well with the enforcement of speed limits for all motor vehicles. After a while, the road rules were watered down. Disregard to the rules brought back road carnage! Fatal matatu accidents is an indication that blatant disregard for road safety rules and indiscipline is back. Matatu crews seem to be comfortable with disorderly working conditions.

While the transport ministry only makes rules and regulations, it is the duty of the police to ensure they are followed to the letter. The transport and licensing board chairman must be commended for his effort to control the situation.

Recently, more than eighty passengers who were found dangling dangerously from matatu doors and some matatu crews who had no uniform and oversped spent the night in police cells. Passengers must comply and be reminded that vehicles are there for them and not vice versa.

26. In the first paragraph _____

- A. Road accidents cases are decreasing.
- B. Road accidents cases are very few.
- C. Road accidents are on the rise.
- D. Nakuru has few road accident.

27. The word confined has been underlined, it can be replaced by _____

- A. unlimited
- B. bound
- C. restricted
- D. covered

28. Matatu operators are like children because they _____

- A. are naughty and devious.
- B. do same things

- C. think they are never watched
- D. need regular supervision

29. The word indifference is used, it means _____

- A. disobedience
- B. disjoined
- C. uncooperative
- D. unruly

30. The succeeding transport minister _____

- A. showed down enforcement
- B. brought speed governors.
- C. went on holiday
- D. is not firm as his predecessor

31. Which of the following is NOT a sign that the new rules are not being obeyed?
- Accident are all over.
 - Disregard to road safety rules.
 - Serious accident in Nakuru
 - Matatu crew indiscipline.
32. Which of the following is NOT true according to the passage?
- Traffic police have always punished offenders.
 - If followed, road safety rules can reduce accident.
 - Matatu industry has the most offenders.
 - Road rules are hardly followed.
33. The opposite of the word successor is _____
- predecessor
 - winner
 - latter
 - former
34. The opposite of the word tame is _____
- terrible
 - wild
 - serious
 - good
35. Matatus have returned to their old ways because _____
- the traffic police no longer care.
 - the rules are not strong enough.
 - the matatu crews are very indisciplined.
 - the government seem not to care.

36. It is TRUE to say that _____
- Mr. Michuki was the best chairman of transport board.
 - The previous minister was rather strict and industrious.
 - The present minister signalled the return of indiscipline.
 - The departure of Mr. Michuki brought harm.
37. "Vehicles are there for them and not vice versa" means _____
- vehicles should never exist.
 - passengers are not there for vehicles.
 - vehicles are there and not passengers.
 - passengers cannot survive without vehicles.
38. It is TRUE to say that _____
- matatu crews are very orderly.
 - matatu crews are comfortable with disorder.
 - traffic police are thorough with their work.
 - passengers enjoy disorderly matatus.
39. The best summary of this passage is _____
- road safety rules.
 - public transport.
 - minister for transport.
 - transport licensing board.

Read the following passage and then answer questions 40 – 50

Oliver was even less happy in the work house. He now had to work, which made him hungrier than ever. He had only three meals of thin soup everyday. The soup was made by boiling very little meat and a lot of other things in a lot of water. He had a small piece of bread on Sundays.

The room in which the boys were fed was a big hall. A large pot was at one end. When it was time for meals the master served the soup from the pot to the boys. He was helped by one or two women servants.

Each boy had a small bowl of soup and no more. The boys cleaned them with their spoons until they shone. When the boys had drunk their soup and cleaned their bowls, they sat looking at the pot with eager eyes as if they could have drunk all the soup in it.

Oliver Twist and his friends suffered from this terrible hunger for three months. At last they grew so wild with hunger that one boy who was tall for age, told the others that unless he had another bowl of soup everyday, he might some night eat the boy who slept next to him.

He had an eager, hungry eye and the other boys believed what he said. So they tacked together and they chose a boy to walk up to the master after supper and ask for more. The boy was Oliver Twist.

The evening arrived and boys took their places. The master stood by the pot. The servants stood near him and the soup was served.

It disappeared quickly. The boys whispered to one another and made signs to Oliver. His neighbours pushed him. Although he was only a child, he was wild with hunger and this gave him courage. He rose from the table and went to the master with his bowl and spoon in his hand. Almost afraid of his own courage, he said. "Please sir, I want some more."

40. _____ was particular for Oliver in the work house.
A. unhappiness B. hunger
C. work D. friends
41. The soup was made up of _____
A. meat, water and other things.
B. little meat and water
C. little meat, other things and much water.
D. meat and water.
42. The boys who said he would eat the boy who slept next to him was _____
A. a cannibal
B. mentally sick
C. very brave
D. too hungry
43. According to the passage, meals _____
A. little soup and bread
B. consisted little bowl of soup
C. was in large bowls
D. was in large pots
44. Which of the following statements is TRUE?
A. The boys were underfed.
B. The boys weren't hungry.
C. The boys asked for more food.
D. The boys had no food for three months.
45. The boys looked at the pot with eager eyes because _____
A. They liked the pot.
B. the soup was delicious
C. they were very hungry
D. the pot had meat.
46. Oliver Twist asked for more soup for _____
A. he was chosen to do so
B. he was the prefect
C. he was fearless.
D. he was not satisfied.
47. The tall boy was the _____ of all.
A. hungry B. hungrier
C. hungriest D. hunger
48. The boys took their places means _____
A. were where they were expected
B. took their bosses
C. chose Oliver Twist
D. were served
49. The word that means the same as courage is _____
A. encourage B. discourage
C. bravery D. cowardice
50. Which of these statements is FALSE?
A. The boys cleaned bowls and spoons with water.
B. Bread was eaten on Sunday
C. Soup was made from meat.
D. Oliver was afraid of his own bravery.

- What is the place value of digit 3 in 396421?
 - Tens of thousands
 - Hundreds of thousand
 - Millions
 - Thousands
- What is the total value of digit 1 in the product of 57 and 306?
 - 17442
 - Tens of thousands
 - 10,000
 - 100,000

- Write thirty nine million sixteen thousand and sixteen in symbols
 - 39016016
 - 3916016
 - 39160016
 - 39016160

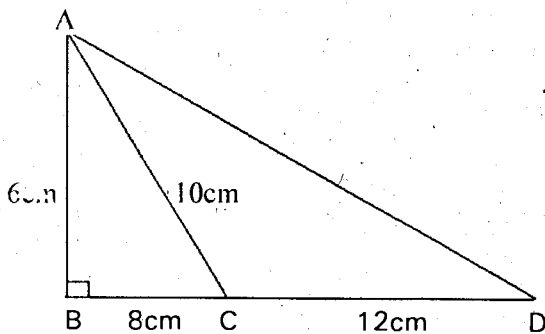
- What is the value of 2.82×0.66 ?
 - 186.12
 - 1.7612
 - 1.8512
 - 1.8612

- What is 45706 rounded off to the nearest 1000?
 - 45700
 - 45000
 - 46000
 - 50000

- What is the value of $\frac{1}{5}$ of $40 - 9 \times \frac{1}{3} \div \frac{3}{5}$?
 - $6\frac{1}{5}$
 - 3
 - 5
 - $8\frac{1}{3}$

- What is the next number in the following series?
2, 5, 11, 20, 32, _____
 - 47
 - 45
 - 35
 - 44

- What is the area of triangle ACD in the figure below?



- 36cm^2
- 60cm^2
- 48cm^2
- 24cm^2

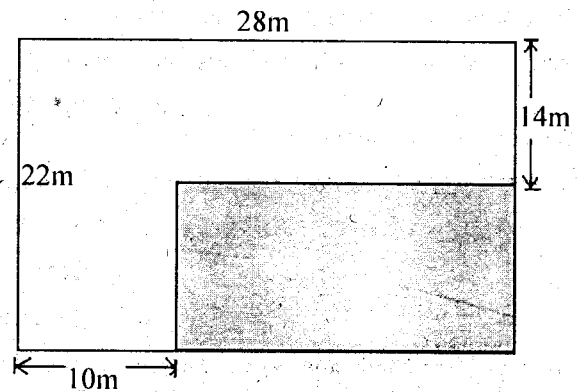
- What is the sum of the first 24 odd numbers?

- 676
- 324
- 524
- 576

- The area of a square field is 3136m^2 . What is the perimeter of the field?

- 56m
- 224m
- 784m
- 216m

- What is the area of the shaded part in the figure below?



- 616m^2
- 472m^2
- 144m^2
- 224m^2

- Work out

$$8007.5 + 36.761 + 0.009$$

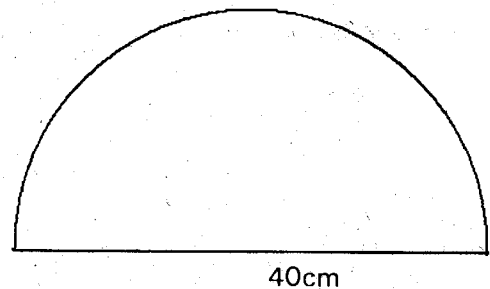
- 8044.27
- 83.760
- 8034.269
- 8043.269

- Simplify

$$5(8n + 4m) + 4(3n - 4m)$$

- $52n - 4m$
- $60m + 4n$
- $52n + 4m$
- $52m + 4n$

- What is the perimeter of the figure below? Take $\pi = 3.14$



- 125.6cm
- 62.8cm
- 165.6cm
- 102.8cm

15. By what must 0.309 be multiplied with to get 3090?
 A. 10000 B. 1000
 C. 100 D. 10

16. Work out

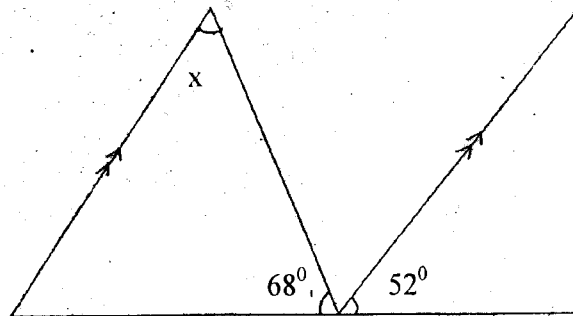
T	Kg	g
17	45	10
- 8	775	468

- A. 9T 270kg 542g
 B. 8T 269kg 542g
 C. 8T 270kg 542g
 D. 9T 269kg 542g
17. Arrange the fractions $\frac{2}{7}$, $\frac{3}{8}$, $\frac{1}{4}$ and $\frac{7}{20}$ in order from the smallest to the biggest
 A. $\frac{1}{4}$, $\frac{2}{7}$, $\frac{7}{20}$, $\frac{3}{8}$
 B. $\frac{1}{4}$, $\frac{2}{7}$, $\frac{3}{8}$, $\frac{7}{20}$
 C. $\frac{3}{8}$, $\frac{7}{20}$, $\frac{2}{7}$, $\frac{1}{4}$
 D. $\frac{2}{7}$, $\frac{1}{4}$, $\frac{7}{20}$, $\frac{3}{8}$

18. The height of a triangle is 23cm and its area is 414cm^2 . What is the base length of the triangle?
 A. 18cm B. 9cm
 C. 26cm D. 36cm

19. Bencarson went to a shop and bought the following items:
 3kg of rice @ sh 120 per kilogram
 4 loaves of bread @ sh 48
 2 packets of maize flour @ sh 110
 $1\frac{1}{2}$ kg of cooking oil for sh 280
 How much balance did he get if he paid for the items using two sh 1000 notes?
 A. sh 1052 B. sh 948
 C. sh 1192 D. sh 808

20. What is the measure of angle marked x in the figure below?

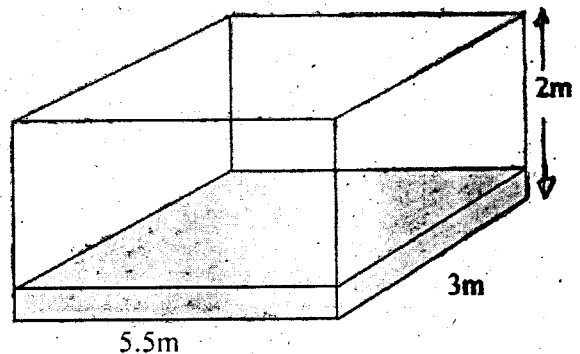


- A. 52° B. 68°
 C. 60° D. 120°

21. Ochuodho bought a fishing boat for sh 720,000 and sold it for sh 900,000. What was his percentage profit?
 A. 75% B. 30%
 C. 20% D. 25%

22. What is the value of y in the equation $\frac{2}{3}(y + 8) = 12$?
 A. 4 B. 10
 C. 1 D. 0

23. The tank below is a quarter full. How much more water is needed to fill it?



- A. 33,000L
 B. 8250L
 C. 24,750L
 D. 4,750L
24. What is the surface area of an open cylinder of height 15cm and diameter 14cm? (Take $\pi = \frac{22}{7}$)
 A. 814cm^2 B. 968cm^2
 C. 1276cm^2 D. 2310cm^2
25. What is the value of $\frac{2.1 \times 7.2 \times 0.9}{4.8 \times 0.014}$?
 A. 2.835 B. 20.25
 C. 2.025 D. 202.5
26. What is the value of $60 \times 30 \div 10 - 8 \times 15$?
 A. 2580 B. 96
 C. 60 D. 36
27. What is the value of: $8 - 1\frac{2}{5} - 2\frac{3}{4}$?
 A. $4\frac{13}{20}$ B. $3\frac{17}{20}$
 C. $4\frac{3}{20}$ D. $4\frac{17}{20}$

28. What is the smallest number which must be added to 113248 to make it divisible by 11?

- A. 8
B. 3
C. 6
D. 7

29. The product of two numbers is 59475. One of the numbers is 325. What is the other number?

- A. 59150
B. 59800
C. 178
D. 183

30. What is the value of M in the magic square below?

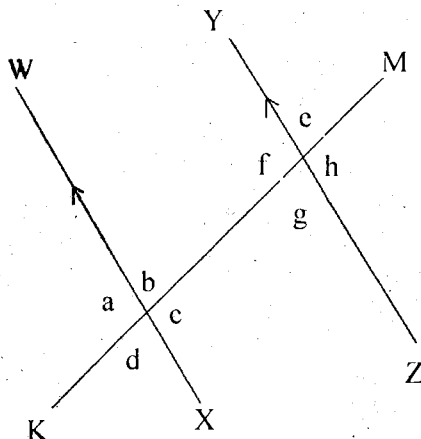
2.6		1.4
		2.9
M		0.8

- A. 2.0
B. 1.1
C. 1.7
D. 0.5

31. What is the area of a rectangle whose length is $8\frac{4}{5}\text{cm}$ and breadth is $5\frac{10}{11}\text{cm}$?

- A. 13cm^2
B. 52cm^2
C. $40\frac{9}{11}\text{cm}^2$
D. $14\frac{39}{55}\text{cm}^2$

32. In the diagram below WX is parallel to YZ and line KM is a transversal. Which angles are the same in size to angle d?



- A. b, h, f
B. c, g, e
C. b, g, e
D. g, e, f

33. Which among the following is NOT a parallelogram?

- A. Square
B. Rectangle
C. Trapezium
D. Rhombus

34. Remove the brackets and simplify:
 $\frac{2}{3}(12m + 15t) + \frac{4}{7}(42m + 21t)$

- A. $32m + 22t$
B. $18mt + 36t$
C. $18m + 36t$
D. $10mt + 8t$

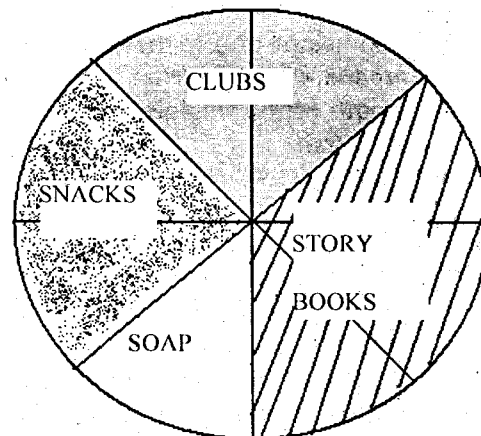
35. Njeri is N years old. Her mother is six times as old as her. What is the sum of their ages?

- A. $N + 6$
B. $7N$
C. $6N$
D. $7N + 6$

36. What is the sum of the complement of 57° and the supplement of 86° ?

- A. 37°
B. 104°
C. 127°
D. 241°

37. The pie chart below shows how Mueni used her pocket money of sh 900



How much more did Mueni spend on story books than on snacks?

- A. sh 450
B. sh 225
C. sh 337.50
D. sh 112.50

38. Work out

$$8\frac{5}{6} \div 3\frac{2}{3}$$

- A. $\frac{22}{53}$
B. $32\frac{7}{18}$
C. $4\frac{9}{11}$
D. $2\frac{9}{22}$

39. What is the sum of prime numbers between 12 and 30?

- A. 111
B. 101
C. 139
D. 133

40. What is the area in hectares of a rectangle plot measuring 420m by 250m?

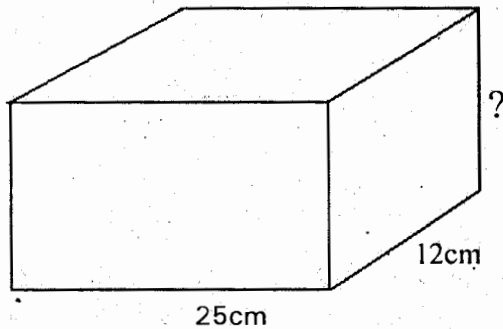
- A. 10.5
B. 105000
C. 1050
D. 1.05

41. Work out

Km	m	cm
12	715	84
X		5

- A. 60km 579m 20cm
- B. 63km 575m 20cm
- C. 63km 579m 20cm
- D. 63km 379m 20cm

42. The volume of the figure shown below is 2400cm^3 , what is the height of the cuboid?



- A. 96cm
- B. 6cm
- C. 200cm
- D. 8cm

43. Three bells ring at intervals of 20min, 30mins and 40 minutes respectively. If they rang together at 10.20am, at what time will they ring together next?

- A. 12.20am
- B. 12.20pm
- C. 11.20am
- D. 11.40am

44. A baby drinks 4dl of milk everyday. How many litres does it drink in the month of June?

- A. 12
- B. 120
- C. 12.4
- D. 124

45. Given that $x = 2$, $y = x + 1$ and $K = 2x$, what is the value of

$$\frac{yx^2 + K}{Kx}$$

- A. 6
- B. 10
- C. 5
- D. 2

46. How many metres and centimeters are there in 12082cm ?

- A. 12m 82cm
- B. 120m 82cm
- C. 12m 802cm
- D. 12m 820cm

47. A car covered 360km in 4 hours. What was its speed in metres per second?

- A. 90m/s
- B. 30m/s
- C. 25m/s
- D. 20m/s

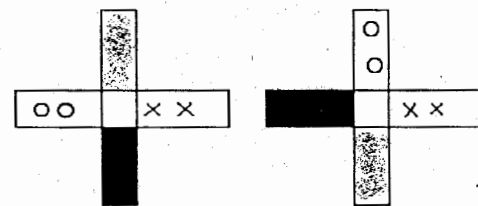
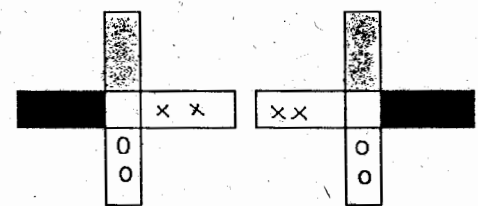
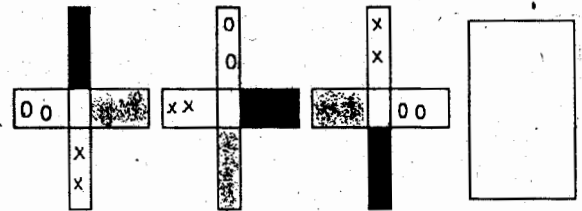
48. The cost of sending a telegram is sh 20 for the first ten words or less and sh 2.00 for each additional word. A tax of 10% is charged on the total. Find the cost of sending the following telegram
FERGUSON ODUNDO BOX 30651
NYATIKE WEDDING POSPONED
UNTIL NEXT YEAR WENGER
KOGALO

- A. Ah 24.00
- B. Sh 26.40
- C. Sh 28.60
- D. Sh 24.20

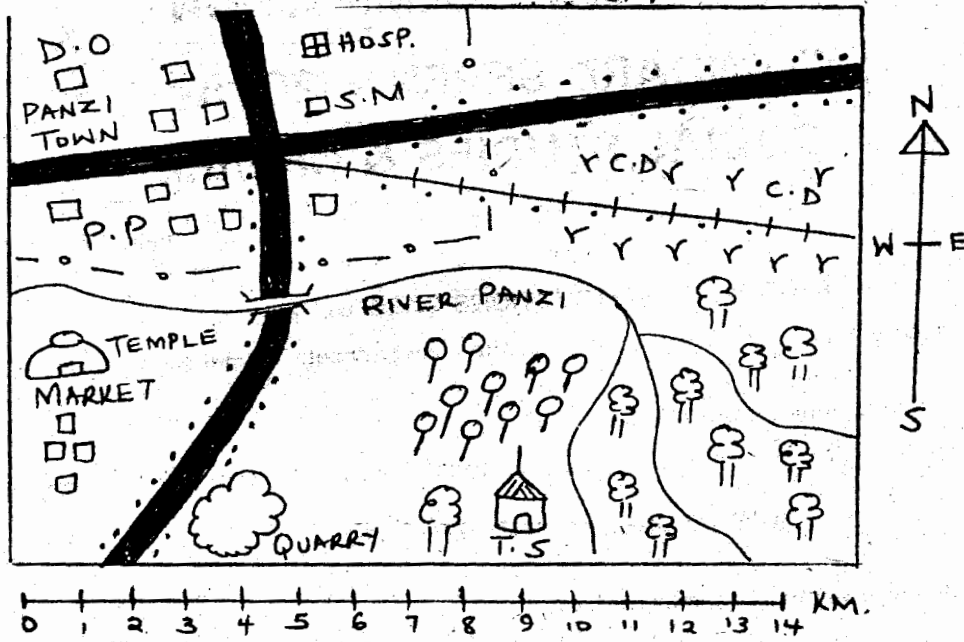
49. A trader made a profit of sh 1200. He saved 15% and spent the rest of the money. How much did he spend?

- A. sh 180
- B. sh 900
- C. sh 1380
- D. sh 1020

50. What is the next shape in the pattern below?



PANZI AREA



KEY	
	TARMAC ROAD
	RAILWAY LINE
	FOREST
	T.S - TRADITIONAL SHRINE
	COFFEE
	SETTLEMENTS
	GRASS
	PERMANENT BUILDINGS
	DISTRICT OFFICE
	POLICE POST
	CATTLE DIP
	HOSPITAL
	SHOPPING MALL
	TOWN BOUNDARY

Use the map of Panzi area to answer questions 1 - 7

- What is the approximate length of the tarmac road from the road junction to the Eastern edge of the map?
 - 10.5 km
 - 5.5 km
 - 20.5 km
 - 14.5 km
- The town located in Panzi area developed mainly as a result of
 - Presence of a hospital
 - Presence of a nearby river
 - Presence of the transport network
 - Presence of the shopping mall

- Panzi town provides all the following services except one. Which one is it?
 - Transport
 - Health
 - Educational
 - Security
- Residents of Panzi area belong to
 - Hindu religion only
 - Two religions
 - Three religions
 - African traditional religion only

5. What is the approximate direction of the forest from the town?
 - A. North - East
 - B. South - West
 - C. North - West
 - D. South - East
6. Which of these sets shows economic activities practised in the area covered by the map?
 - A. Lumbering, agriculture and fishing
 - B. Tourism, trading and fishing
 - C. Mining, fishing and tourism
 - D. Transportation, mining and agriculture
7. The original natural vegetation in the area where coffee is growing was
 - A. Shrubs
 - B. Scrub
 - C. Grass
 - D. Forest
8. One of the following continents found in the world is likely to be the smallest. Which one is it?
 - A. Asia
 - B. Africa
 - C. Antarctica
 - D. Europe
9. The Mediterranean Sea and the Red Sea are joined by a man-made feature known as
 - A. Strait of Gibraltar
 - B. Suez Canal
 - C. Iberian Peninsula
 - D. Sinai Peninsula
10. Which of these capes is CORRECTLY matched with the country where it is located?
 - A. Cape Lopez - Gabon
 - B. Cape Fria - Cameroon
 - C. Cape Agulhas - Namibia
 - D. Cape Guardafui - Eritrea
11. The two African countries that were not partitioned by European countries were
 - A. Nigeria and Ethiopia
 - B. Ethiopia and Egypt
 - C. Liberia and Ethiopia
 - D. Sierra Leone and Liberia
12. The following are African countries. Which among them is matched CORRECTLY with its capital city?
 - A. Algeria - Luanda
 - B. Morocco - N'djamena
 - C. Benin - Porto Novo
 - D. Madagascar - Libreville
13. The longitude 180° is known as
 - A. The Greenwich Meridian
 - B. The International Date Line
 - C. The Antarctic Circle
 - D. The Arctic circle
14. The varying lengths of days and nights at different times of the years is as a result of
 - A. Rotation of the earth
 - B. Revolution of the earth
 - C. The tilting of the earth
 - D. The spinning of the earth
15. The time in Conakry, Guinea at 15° West is 4:00 p.m. What will be the time in Kigali in Rwanda at 30° East?
 - A. 7:00 p.m
 - B. 7:00 a.m
 - C. 1:00 p.m
 - D. 1:00 a.m
16. The sun is vertically overhead the equator
 - A. Twice in a year
 - B. In the month of June
 - C. In the month of December
 - D. In the month of July
17. Which of the following pairs of rivers drain into the Atlantic Ocean?
 - A. River Congo and River Limpopo
 - B. River Limpopo and River Zambezi
 - C. River Volta and River Congo
 - D. River Benue and River Juba
18. Eastern Africa is located between the following latitudes. Which ones are they?
 - A. 22° E and 51° E
 - B. 23° N and 12° S
 - C. 37° N and 35° S
 - D. 23° E and 51° N

19. Three of the following statements are true about Lake Victoria. Which one is NOT?

- A. It was formed through faulting
- B. It was formed through down - warping
- C. It is a fresh water lake
- D. It is the source of a major river

20. Which of the following is a human-made lake?

- A. Lake Chilwa
- B. Lake Tanganyika
- C. Lake Nasser
- D. Lake Albert

21. Which of the following mountains was formed as a result of sedimentary rocks bending upwards and downwards?

- A. Mount Kilimanjaro
- B. Mount Pare
- C. Danakil Alps
- D. The Cape Ranges

22. The following describes a type of vegetation found in Eastern Africa.

- i. Consists of short, thorny and scattered grass
- ii. Some areas have tough, short grass
- iii. In some areas the ground is bare

The above describes

- A. Mountain vegetation
- B. Equatorial rainforests
- C. Savannah vegetation
- D. Desert vegetation

23. Which of these types of soils useful in the glass making industry?

- A. Black cotton soils
- B. Sandy soils
- C. Alluvial soils
- D. Red volcanic soils

24. One of the following communities settled in Rusinga and Mfangano islands after migrating into Kenya in the pre-colonial period?

- A. The Tugen
- B. The Luo
- C. The Abasuba
- D. The Abagusii

25. Which of these Bantu speaking communities used the route between Lake Albert and Lake Edward when they were migrating into Eastern Africa in the pre-colonial Period? Which one is it?

- A. Basoga
- B. Wanyamwezi
- C. Yao
- D. Makonde

26. One of these sets of communities consists of River - Lake Nilotes of Eastern Africa. Which one is it?

- A. The Luo, Nandi and Kipsigis
- B. The Karamojong, Kumam and Iteso
- C. The Nuer, Dinka and the Njemps
- D. The Langi, Nuer and the Alur

27. Three of the following communities were the original inhabitants of Eastern Africa except one. Which one is it?

- A. The Dorobo
- B. The Sirikwa
- C. The Athi
- D. The Iraqw

28. Which of these Eastern Africa countries is LIKELY to have the highest population?

- A. Kenya
- B. Ethiopia
- C. Eritrea
- D. Sudan

29. Which of the following is NOT a characteristic of traditional forms of education among communities in Kenya in the pre-colonial period?

- A. Learners learnt practical skills
- B. Learners learnt through imitation
- C. Some skills were learnt from specialists
- D. Learners acquired some skills through reading

30. Which of the following can be classified as a cultural artifact?

- A. A sein net
- B. An earthen pot
- C. A glass jug
- D. A silk dress

31. The main economic activities of the Wanyamwezi community in the pre-colonial period were

- A. Trading and mining
- B. Mining and fishing
- C. Cultivation and trading
- D. Cultivation and fishing

32. A child who is not a citizen of Kenya but has been adopted by a Kenyan citizen can become a Kenyan citizen through _____
- Birth
 - Recommendation
 - Registration
 - Baptism
33. We can demonstrate patriotism as Kenyan citizens in the following ways except
- Obeying the laws of the country
 - Respecting the symbols of national unity
 - Promoting nepotism in the society
 - Taking part in community projects
34. Kenyans elected forty - seven women representatives each representing a county in the National Assembly. Such kind of a democracy is known as
- Participatory
 - Direct democracy
 - Pure democracy
 - Indirect democracy
35. Which of the following is a social right?
- Right to work
 - Right to decent housing
 - Right health care
 - Right to vote during elections
36. The following are ways of solving conflicts in a society except one. Which one is it?
- Mediation
 - Going to court
 - Arbitration
 - Lawlessness
37. Three of the following factors undermine peace in a society except one. Which one is it?
- Intolerance
 - Poverty
 - Forgiveness
 - Abuse of power
38. The person in charge of elections in a constituency is known as
- A polling clerk
 - A returning officer
 - A presiding officer
 - A counting clerk
39. The following are roles of the body in charge of elections in Kenya except one. Which one is it?
- Receiving nomination papers from aspiring political leaders
 - Carrying out registration of voters in various parts of the country
 - Identifying voting centres
 - Providing funds to all political parties during the campaign period
40. Cabinet secretaries in Kenya are appointed by the president and approved by the _____
- National Assembly
 - Senate
 - Judiciary
 - Attorney General
41. For one to become the speaker of the National Assembly he or she should be elected by _____
- All citizens
 - Members of the county assembly
 - Members of the National Assembly
 - The president and the Deputy president
42. Which of the following communities collaborated with the British in Kenya during the colonial period?
- Ababukusu
 - Nandi
 - Abawanga
 - Giriama
43. During the colonial period in Kenya the main role of African chiefs was
- To administer the colony
 - To be in charge of districts
 - To appoint the Governor
 - To ensure that people paid taxes
44. Who among the following early visitors to Eastern Africa was involved in trading activities?
- Carl Peters
 - Johannes Rebmann
 - H.M. Stanley
 - Vasco Da Gama

45. Koitalel Arap Samoei made various contributions among the Nendi. Which one is NOT?

- A. He signed various treaties with the British in order to protect his community
- B. He led the community in resisting colonial rule
- C. He cured different diseases using herbal medicine.
- D. He played the role of a spiritual leader

46. After the partition of Eastern Africa the area now known as Djibouti became the colony of the

- A. Belgium
- B. British
- C. French
- D. Italians

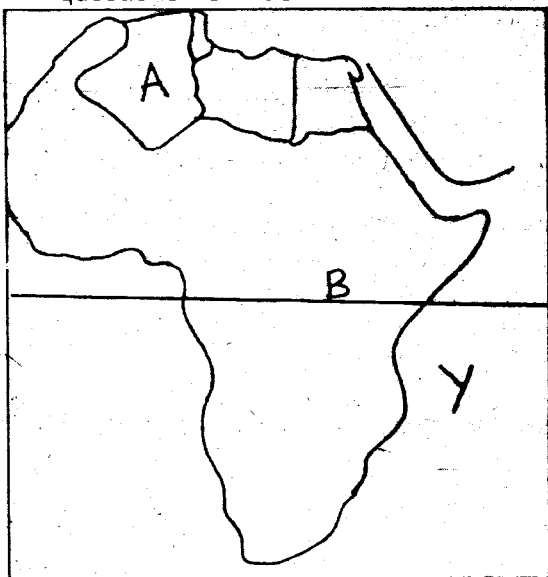
47. The following relate to a personality in Eastern Africa

- i. He established communal villages in his country
- ii. He united the various communities in his country
- iii. He retired from presidency voluntarily

The person described above is

- A. Jomo Kenyatta
- B. Julius Nyerere
- C. Haile Selasie
- D. Ali Hassan Mwinyi

Use the map of Africa to answer questions 48 - 50



48. The country marked A is known as

- A. Morocco
- B. Libya
- C. Algeria
- D. Mauritania

49. Three of the following countries are crossed by the latitude marked B on the map. Which one is NOT?

- A. Congo
- B. Gabon
- C. Somalia
- D. Central African Republic

50. Three of the following types of fish can be obtained in the water body marked Y on the map of Africa. Which one is NOT?

- A. Sardines
- B. Tuna
- C. Stock fish
- D. Catfish

51. The growing of maize in Eastern Africa was introduced by the

- A. Italians
- B. French
- C. Portuguese
- D. British

52. Which of the following statements is true of sugar cane growing in Kenana Scheme in Sudan?

- A. Sugarcane is mainly grown in small scale
- B. Sugarcane is mainly grown under natural climatic conditions
- C. Sugarcane is mainly grown under irrigation
- D. The area where the sugarcane is grown is in the highlands

53. The main tourist attraction at the coast of Eastern Africa are

- A. The historical monuments
- B. Beautiful sandy beaches
- C. The pre-historic sites
- D. The tropical lowland forests

54. The most developed form of transport in Eastern Africa is

- A. Water transport
- B. Road transport
- C. Pipeline transport
- D. Air transport

55. Which of the following is an audio-visual means of communication?

- A. Pamphlets
- B. Posters
- C. Radio
- D. Television

56. The following are duties of the Kabaka in the traditional Buganda government except one. Which one is it?
- He was in charge of finances in the kingdom
 - He was commander-in-chief of the army
 - He controlled trade in his kingdom
 - He appointed and dismissed officers in his kingdom

57. The following are uses of a certain mineral mined in Kenya
- It is used in making cans
 - It is used in making sulphuric acid
 - It is used in the production of toothpaste

The mineral described above is

- Limestone
- Soda Ash
- Flourspar
- Diatomite

58. Which of the following industries can be classified as a primary industry?
- Glass making industry
 - Bakeries
 - Printing of books
 - Chemical making industries

59. One of these sets of towns found in Kenya began as agricultural collecting centres. Which ones are they?
- Eldoret and Nakuru
 - Kisumu and Nairobi
 - Nairobi and Eldoret
 - Thika and Mombasa

60. The following are problems facing Inter-Governmental Authority on Development (IGAD). Which one is NOT?

- Political instability in some member states
- Poverty among member states
- Lack of trust among some member states
- Production of different goods by member states

CHRISTIAN RELIGIOUS EDUCATION

61. According to the Genesis stories of creation, what did God create on the fourth day?

- Sea animals and birds of air
- Earth, seas and plants
- Light, day and night
- Sun, moon and stars

62. At the time of Noah the water that had caused the great flood began to decrease after

- 40 days
- 80 days
- 150 days
- 200 days

63. From the story of David killing Goliath Christians learn to

- Trust in God
- Be humble
- Pray always
- Fight enemies

64. Daniel was thrown in a pit of lions through the order of king

- Darius
- Belshazzar
- Nebuchadnezzar
- Hezekiah

65. Apart from dedicating her son to serve the Lord in the temple, Hannah also brought other gifts to thank God. These gifts included

- Three year old bull and skin of wine
- A skin of wine and myrrh
- A skin of wine and silver
- Three year old bull and twenty silver coins

66. Who among the following was not a patriarch among the Israelites?

- Joseph
- Esau
- Moses
- Isaac

67. David was anointed to be the second king of Israel when he
- Was fighting Goliath
 - Was playing a harp for king Saul
 - Was looking after his father's livestock
 - Was running away from king Saul
68. We should use our God given abilities to _____
- Enrich ourselves
 - Discriminate against others
 - Help others
 - Gain fame
69. Naaman was a commander of the Syrian army. He was healed of his leprosy by prophet
- | | |
|-----------|-----------|
| A. Elijah | B. Elisha |
| C. Nathan | D. Daniel |
70. The following books are found in the Old Testament. Which one is NOT?
- | | |
|-----------|-----------|
| A. Esther | B. Ruth |
| C. Naomi | D. Judges |
71. The family of Jacob moved to Egypt to escape from
- War
 - Floods
 - Famine
 - Diseases
72. Jacob dreamt of a stairway that was from earth to heaven when he was at a place called
- Luz
 - Peniel
 - Gilgal
 - Bethany
73. Jesus taught the Lord's prayer to
- A crowd
 - His disciples
 - The chief priests
 - The teachers of the law
74. The following are values acquired in education except one. Which one is it?
- Obedience
 - Respect
 - Co-operation
 - Promiscuity
75. The man described in Acts 18:24 - 28 who was an eloquent speaker and boldly preached about Jesus Christ was known as
- Saul
 - Barnabas
 - Barsabas
 - Apollos
76. The name 'rabbi' as used the Bible means
- Teacher
 - Anointed one
 - God with us
 - Laughter
77. The Roman ruler who ordered for a census at the time of the birth of Jesus Christ was called
- Caiaphas
 - Emperor Augustus
 - King Herod
 - Emperor Quirinius
78. On the day Jesus was arrested, He had prayed at
- Calvary
 - Golgotha
 - Gethsemane
 - Bethzatha
79. Who among the following disciples of Jesus was called from a tax office?
- Levi
 - Bartholomew
 - John
 - Andrew
80. Which of the following is NOT a gospel book?
- Matthew
 - Mark
 - Luke
 - Titus
81. Who among the following members of the early church was not involved in distribution of funds to the widows?
- Simon
 - Prochorus
 - Timon
 - Stephen

82. Which of these fruits of the Holy Spirit enables us to help others?
- Humility
 - Self – control
 - Kindness
 - Patience
83. The man who had been paralyzed for eight years and healed by Peter was called _____
- Naaman
 - Aeneas
 - Nicolaus
 - Justus
84. Members of the early church did the following together except
- They worshipped together
 - They met as a group in the temple
 - They sold their possessions and distributed the money among all according to what each one needed
 - They poured libations together in honour of the departed saints
85. According to the Apostles' creed Jesus Christ
- Is our Lord
 - Suffered under King Herod
 - Is the creator
 - Is the Father
86. Which of these traditional African communities is correctly matched with the name given to God?
- Nandi – Jehovah
 - Teso – Enkai
 - Abagusii – Nyasaye
 - Giriama – Mulungu
87. Which of the following is NOT a rite of passage in African traditional society?
- Birth
 - Initiation
 - Death
 - Baptism
88. Jesus wept during the raising of Lazarus in the town of
- Jerusalem
 - Bethany
 - Nazareth
 - Cana of Galilee
89. Peter, your classmate has a habit of stealing money from other pupils' bags. As a Christian you should
- Tell all the members of the class
 - Set a trap with the other members in order to get him red-handed
 - Inform the local police officers
 - Tell him to stop the habit
90. The parable of the Pharisee and the tax collector teaches Christians to _____
- Make proper use of their God given abilities
 - Be persistent in their prayers
 - Pray to God in humility
 - Help those in various difficulties



**KCPE TRIAL EXAMINATION
STANDARD 7
COMPOSITION**

Time: 40 minutes

YOUR INDEX NUMBER	
YOUR NAME	
NAME OF YOUR SCHOOL	

READ THESE INSTRUCTIONS CAREFULLY

1. In the spaces provided above write your full **Index Number**, **Your Name** and **Name of your school**.
2. Now **open** this paper read the composition **subject** carefully and write your **composition** on the lines provided.

This Question Paper consists of 4 printed pages.

TURN OVER

