

GRADE 4 - 2020

HOMESCIENCE & AGRICULTURE

Name

School name

The teacher to fill the grid below after marking the learner's work.

Assessment rubric				
SUBJECT	Exceeds Expectations (50)	Meets Expectations (25 - 49)	Approaches Expectations (16 - 24)	Below Expectations (0 - 15)
HOMESCIENCE				
AGRICULTURE				

HOMESCIENCE

1. The good ways we practise in order to stay healthy are called _____ (1mk)

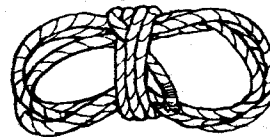
(healthy exercises, posture, healthy habits)

2. Write down five things we need to stay healthy? (5mks)

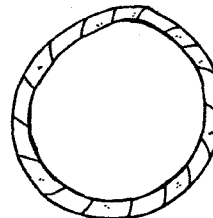
- (a) _____
- (b) _____
- (c) _____
- (d) _____
- (e) _____

3. Name the following play items (4mks)


(a)



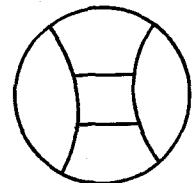
(c)



(b)



(d)



4. Write the three food groups
(6mks)

- (a) _____
- (b) _____
- (c) _____

5. Draw 5 materials that are used when cleaning our classroom.
(10mks)

(a) (b)

--	--


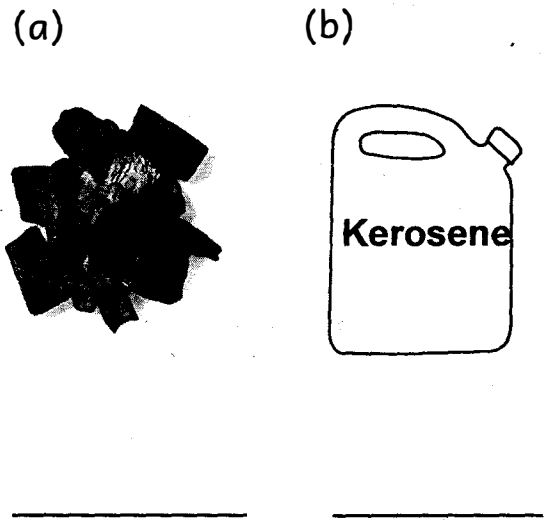
(c) (d)

--	--

(e)

--

6. Identify the following types of fuel used in our locality. (3mks)



(electricity, firewood, gas, kerosene, charcoal)

7. Give 3 reasons why we eat food.
(6mks)

- (a) _____
- (b) _____
- (c) _____

8. Draw and name 5 utensils used at home. (10mks)

(a) _____ (b) _____

(c) _____ (d) _____

(e) _____

9. Name 2 food storage places 2mks)

(a) _____

(b) _____

10. Identify three common illnesses in our locality. (3mks)

(a) _____

(b) _____

(c) _____

AGRICULTURE

1. Name the three types of soil. (3mks)

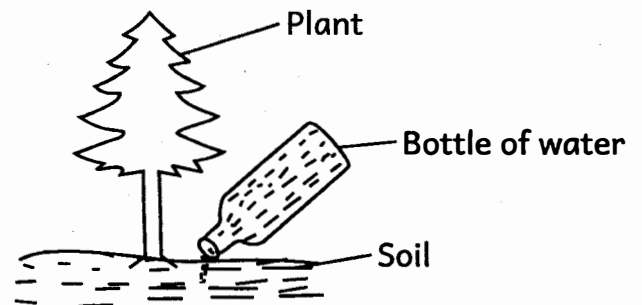
(a) _____

(b) _____

(c) _____

2. Which type of soil has the smallest particles?(2mks)

3. Identify the type of irrigation used (2mks)



4. _____ water is safe for drinking (2mks)
(filtered, boiled, rain)

5. Farmers grow crops in the _____ (2mks)
(water, air, soil)

6. List three methods of making water clean. (6mks)

- (a) _____
- (b) _____
- (c) _____

7. Write 4 importance of domestic animals. (8mks)

- (a) _____
- (b) _____
- (c) _____
- (d) _____

8. What do you call a small place near or around the house where we grow crops? (2mks)
(plot, shamba, kitchen garden)

9. This is a _____ (2mks)



(flower, fruit, seedling)

10. We add _____ to the soil to make it more fertile. (2mks)
(water, manure, crops)

11. Write four uses of water in farming (8mks)

- (a) _____
- (b) _____
- (c) _____
- (d) _____

12. Name four small wild animals that destroy crops (4mks)

- (a) _____
- (b) _____
- (c) _____
- (d) _____

13. Write 5 edible plants. (5mks)

- (a) _____
- (b) _____
- (c) _____
- (d) _____
- (e) _____

14. This is a _____. It is used to keep off wild animals in the farm. (2mks)



(boy, scarecrow, cartoon)