

MONITORING LEARNER'S PROGRESS
GRADE 2 - END OF TERM 1 - YEAR 2020
INTERGRATED LEARNING AREAS

Name: _____

Gender: Boy Girl

School name: _____

TEACHER'S SCORING GUIDE
SECTION A
ASSESSMENT RUBRICS

Exceeds expectation	Meets expectation	Approaching expectation	Below expectation


SECTION B

The grid below is to be filled by the teacher after marking the learner's work.

Learning areas	Environmental activities	Hygiene & Nutrition activities	Creative & Music activities	Religious activities
No. of questions correct				
Performance level				

ENVIRONMENTAL ACTIVITIES

1. This is a _____



(drum, laptop)

2. A _____ produces sound by being blown. (drum, whistle)

3. Match the following animals with their shelters.

<u>Animal</u>	<u>Shelter</u>
(a) cow	roof
(b) pig	basket
(c) cat	shed
(d) lizard	kennel
(e) bird	pigsty
(f) dog	nest

5. Write the correct answer

The best soil for

- (a) modelling is _____
 - (b) growing crops is _____
 - (c) construction is _____
- (clay, loam, sandy)

5. Name three






	<u>big animals</u>	<u>small animals</u>
(a)	_____	_____
(b)	_____	_____
(c)	_____	_____

6. From the grid below, pick out the parts of a plant. (5 marks)

L	E	A	F	Y	R	U	F
A	D	S	L	Z	O	V	L
F	L	O	W	E	O	S	O
G	H	M	O	Q	T	T	E
S	T	E	M	S	S	P	R
K	F	R	U	I	T	S	S

- (a) roots
- (b) stems
- (c) fruits
- (d) flowers
- (e) leaf

7. Match the animal with what they provide.

(a)		kill rats
(b)		carry goods
(c)		produce milk
(d)		produce mohair
(e)		provide eggs


HYGIENE & NUTRITION

1. Name the following items

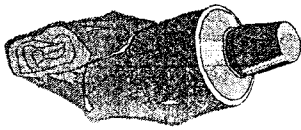
(a)



(b)



(c)



(glass, toothpaste, toothbrush)

2. Name the following fruits.


(a)




(b)



(c)




(d)



(apple, banana, pineapple,
berry, orange)

3. Write down five things you observe from this picture.



(a) _____

(b) _____

(c) _____

(d) _____

(e) _____

4. Fill in the correct answer.

(a) Saliva is found in
the _____

(b) Blood is _____ in colour.

(c) Babies are also called

(d) Food at home is prepared in
the _____

(e) We should drink _____
water.

(clean, mouth, red, kitchen,
toddlers)

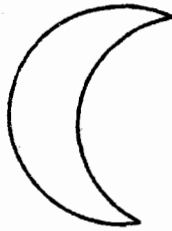

**CHRISTIAN RELIGIOUS
EDUCATION**

1. Write the correct answer
(a) Jesus was the son of _____

(b) Jesus was born in _____
(c) Jesus' parents were _____ and _____
(d) Christians book is called _____

(Mary, Joseph, God, Bethlehem, Bible)

2. Colour the following (15 marks)



3. Name any five people mentioned in the Bible.

- (a) _____
(b) _____
(c) _____
(d) _____
(e) _____


MUSIC

1. What can you see in this picture.



- (a) _____
(b) _____
(c) _____
(d) _____
(e) _____


2. Colour this music instruments



CREATIVE ARTS

1. Colour these pictures

(a)



(b)

