

MONITORING LEARNER'S PROGRESS
GRADE 3 - END OF TERM 1 - YEAR 2020
INTERGRATED LEARNING AREAS



Name: _____

Gender: Boy

Girl

School name: _____

TEACHER'S SCORING GUIDE

SECTION A

ASSESSMENT RUBRICS

Exceeds expectation	Meets expectation	Approaching expectation	Below expectation

SECTION B

The grid below is to filled by the teacher after marking the learner's work.

Learning areas	Environmental activities	Hygiene & Nutrition activities	Creative & Music activities	Religious activities
No. of questions correct				
Performance level				

HYGIENE & NUTRITION.

1. Write five things you can observe in the picture



(a)

(b)

(c)

(d)


(e)

2. Write the correct answer

- (a) Smoking can cause our fingers and clothes smell _____ (nice, bad)
- (b) We should wash our hands _____ handling food. (before, middle, after)
- (c) Dirty surfaces can be made to shine using _____ (sponge, steel wool, wire)
- (d) We use _____ in the toilet. (tissue paper, towel)
- (e) Oil spilled in water _____ it. (contaminates, cleans)

3. Colour these pictures. (5 marks)

(a)



(b)



4. Name two foods that are good for our teeth

(a)

(b)

5. Holes that form on a tooth are called _____ (cavities, bad breath)

6. Biscuits and chocolates are good for our teeth _____ (true or false)

ENVIRONMENT ACTIVITIES

1. Name five useful animals

(a)

(b)

(c)

(d)

(e)

2. Write the correct answer

(a) We feel texture of soil using _____ our _____

(fingers, hair, eyes)

(b) Areas with less rain experience _____ conditions.

(rainy, flood, drought)

(c) When animal droppings are collected and stored they can be used as _____

(manure, water, food)

(d) Water is transported over long distances by use of _____

(pipes, pots, jerricans)

(e) Which one of the following can be seen in the sky, during the day?

(moon, sun, stars)

(f) We get honey from _____ (sheep, bees)

3. Match the sources of heat energy with the fuel used.

Gas cooker Kerosene

Charcoal burner Electricity

Electric cooker charcoal

stove Gas

4. Name five wild animals

(a) _____

(b) _____

(c) _____

(d) _____

(e)

CHRISTIAN RELIGIOUS EDUCATION

1. Who are these people?



2. Write the correct answer

(a) We should always trust in _____

(God, satan, people)

(b) Jesus Christ taught his disciples how to _____ (sing, pray, dance)

(c) Who was healed of a bad skin disease? _____

(Elisha, Moses, Naaman)

(d) Abraham's son was called _____

(Noah, Isaac, Adam)

(e) _____ died on the cross.

3. Name any five books of the Bible.

(a) _____


(b) _____

(c) _____

(d) _____

(e) _____

4. Colour the picture (5 marks)



5. The wife of Adam was _____
(Sarah, Hannah, Eve)
6. The brother of my mother is my _____

(cousin, uncle, father)

7. God made human beings on his _____ and likeness.

(image, shape, colour)


8. God is _____ when we obey our parents and teachers.
(unhappy, pleased, annoyed)

Music


1. What are these people doing




2. Colour this instrument




1. Match the instruments with how it is played.



blowing



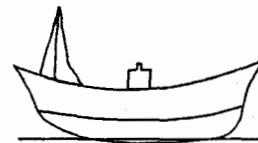
plucking



hitting

CREATIVE ARTS

1. Colour this ship



2. Write down five things we use during drawing

(a)

(b)

(c)

(d)

(e)