

GRADE 4- END OF TERM 1- YEAR
2020

MATHEMATICAL ACTIVITIES



Name _____

Learners Number

Gender Male Female

County Name _____ County code

Sub -County Name _____ Sub-county code

School Name _____ School code

Exceeds expectation	Meets expectation	Approaching expectation	Below expectation

1. Write these numbers in words.

- (a) 200 _____
- (b) 213 _____
- (c) 120 _____
- (d) 260 _____

2. What is $\frac{1}{8}$ of 16 _____

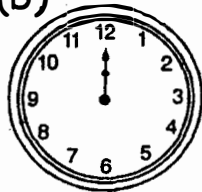
3. Subtract 962m from 983m _____

4. What is the time?

(a)



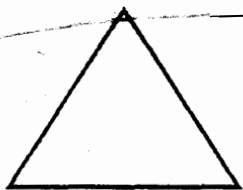
(b)




(c)



5. Fill in the gaps



- (a) _____ corners
- (b) _____ edges



- (c) _____ corners
- (d) _____ edges

6. Add

(a) $600 + 302 =$ _____

(b) $610 + 40 =$ _____



(c) $520 + 40 =$ _____

(d) $60 + 60 =$ _____



(e) 702
 $+32$



(f) 220
 $+80$

7. How much

(a)  +  = shs. _____

sh 210 sh 90

(b)  +  = sh _____
 sh 40 sh 42

(c)  +  = sh _____
 sh 260 sh 220

8. Six donkeys have _____ legs.

9. Multiply

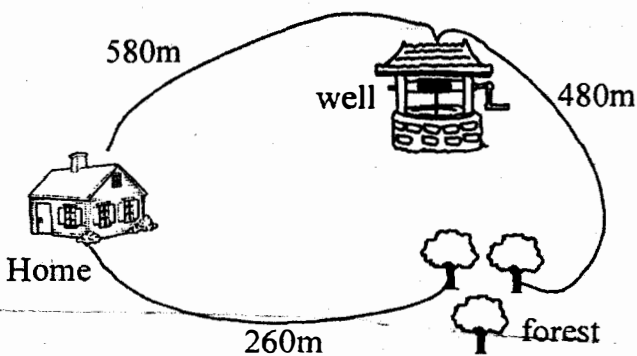
(a) $6 \times 2 =$ _____

(b) $3 \times 7 =$ _____

(c) $8 \times 1 =$ _____

(d) $2 \times 5 =$ _____

10. Measurements



(a) What is the distance from home to the well? _____

(b) What is the distance from the well to home through the forest?

11. Joseph fetched 45 litres in the morning and 42 litres in the afternoon. How much water did he fetch that day? _____ litres.

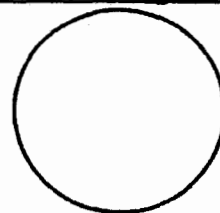
12. What is the missing number in the pattern below?
 480, 460, 440,
 420, _____, 380,
 360, 340.

13. How many 1-litre tins are needed to fill the bucket?

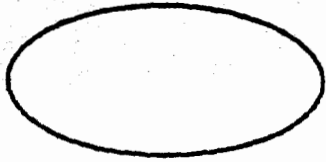


14. Name these figures


(a)




(b)



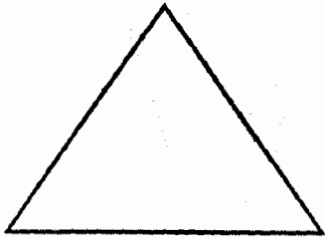
(c)



(d)



(e)



15. One hour has _____ minutes.

16. Name the days of the week

(a) _____

(b) _____

(c) _____

(d) _____

(e) _____

17. Name four months of the year.

(a) _____

(b) _____

(c) _____

(d) _____

18. Work out

(a) 990
 -90

(b) 1000
 -400

(c) 280
 -80

