

SECTION A AND B

Learner's Name:

Learner's Number

Gender: Boy

Girl

County Name: County Code:

Sub-County Name: Sub-County Code:

School Name: School Code:






TEACHER'S SCORING GUIDE

The grid below is to be filled by the teacher after making the learner's work.

	Level 1	Level 2	Level 3	Level 4
Section A:				
Task 1				
Task 2				
Section B:				
Task 3				
Task 4				

TASK 1

Count and match

1.		7
2.		4
3.		2
4.		5
5.		3

TASK 2

Take away

6. $4 - 3 =$

7. $6 - 4 =$

8. $5 - 2 =$

9. Five cats take away two cats, you remain with _____ cats.

TASK 3

Write the missing numbers.

10. 15, 20, 25, _____, _____

11. 44, 46, 48, _____, _____

12. 3, 6, 9, _____, _____

Draw balls to show these numbers.

13. 9 -

14. 8 -

15. 12 -

TASK 4

Work out.

16. $4 + \square = 7$

17. $8 + \square = 10$

18. $\square + 4 = 9$

Put together.

19.

$$\begin{array}{r} 10 \\ +10 \\ \hline \end{array}$$

20.

$$\begin{array}{r} 5 \\ +5 \\ \hline \end{array}$$

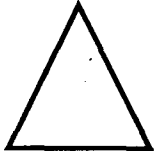
Match the shape and the name.

21.




circle

22.



rectangle

23.



triangle

24. Musa bought 13 mangoes. He ate 3 during break time. How many mangoes was he left with?

25. Draw oval shape and colour.

