

MONITORING LEARNER'S PROGRESS
GRADE 1 - 2020

MATHEMATICAL ACTIVITIES

Name

Gender:

Boy

Girl


School name

The teacher to fill the grid below after marking the learner's work.

Strand	Numbers		
Question numbers	1 - 8		
Total marks	50		
Marks scored			

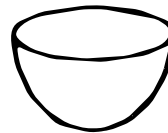
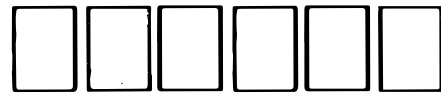
1. Circle the ones that are big.

(5mks)



2. Pair and match equal groups.

(5mks)



3. Use equal to, less than or more than to complete the sentences.

(5mks)



The balls are _____ the pencil.



The trees are _____ the bananas.



The sticks are _____ the triangles.




The cups are _____ the pots.



The apples are _____ the banana.

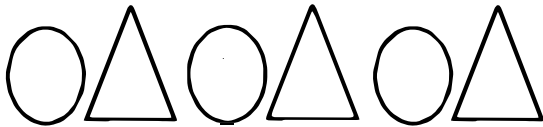
4. Write longer or shorter.


(6mks)

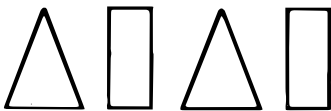


5. Draw the next two patterns.

(10mks)









6. Write the missing numbers.




(10mks)



10, _____, 12, 13, _____, _____, 16, _____,

18, _____, 20

7. Count and write how many.

(5mks)





8. Fill in the missing number by counting backwards.

(4mks)

40, 39, 38, _____, 36, _____, 34, 33, _____, 31, _____

Total = (50marks)