

COMPETENCY BASED CURRICULUM

PRE-PRIMARY 2 - YEAR 2020

MATHEMATICAL ACTIVITIES

YOUR NAME: SCHOOL..... DATE.....

1. Count the ball and match.



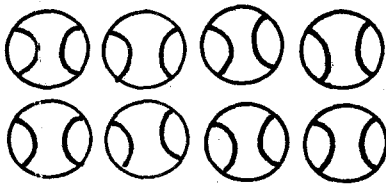
5



8



3



6

2. Add (+)

$$4 + 3 = \underline{\quad}$$

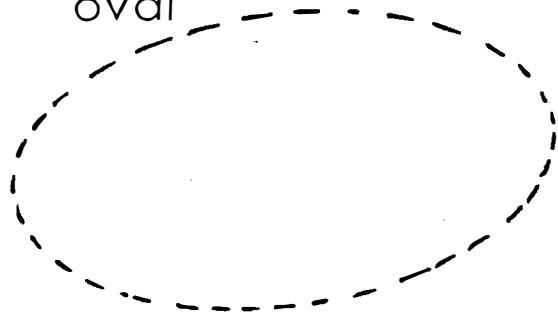
$$2 + 2 = \underline{\quad}$$

$$6 + 2 = \underline{\quad}$$


$$3 + 7 = \underline{\quad}$$

3. Join and read the shape.

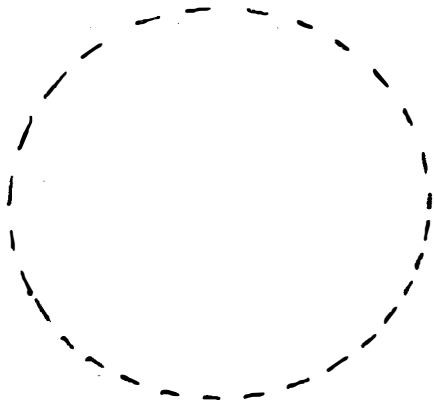
oval




rectangle




circle



star



Triangle



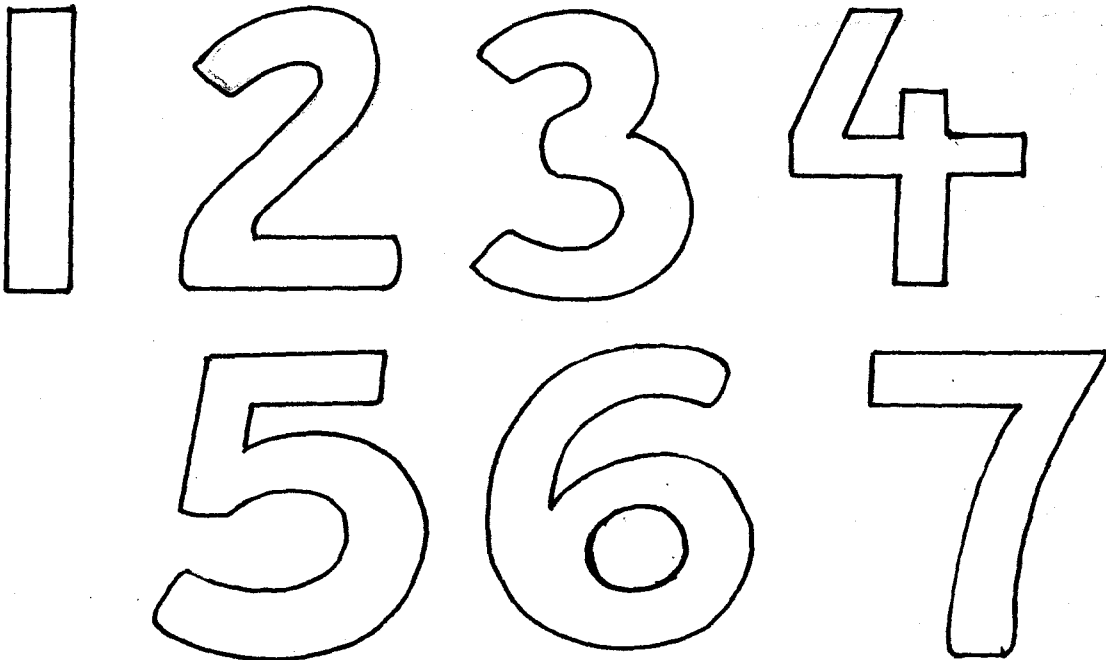
5. Take away

$$5 - 1 = \underline{\quad}$$

$$2 - 1 = \underline{\quad}$$

$$4 - 2 = \underline{\quad}$$

4. Colour the numbers.



Assessment Rubric

Exceeds expectation 4	Meet expectation 3	Approaching expectation 2	Below expectation 1