

COMPETENCE BASED CURRICULUM

PP2 - END OF TERM 1 - 2020

MATHEMATICAL ACTIVITIES

NAME:

SCHOOL:

1. Write number 10-20

_____/ ____/ ____/

_____/ ____/ ____/

_____/ ____/ ____/

_____/ ____/

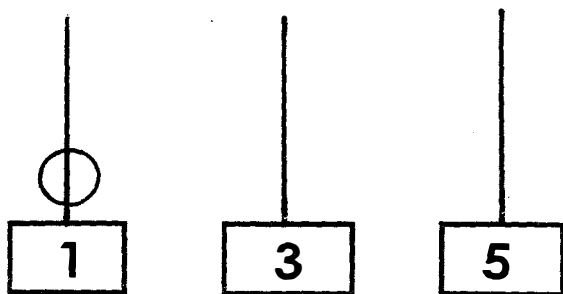
2. Fill in missing numbers

8 _____ 10 _____ 12 13

_____ 16 _____

18 _____

3. Draw the value



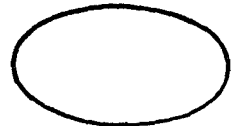
6 _____

7 _____


9 _____

4. Match names with their shapes


square




oval



circle



5. Colour the big one



6. Add

$4+1=$ _____ $5+0=$ _____

$3+2=$ _____ $4+2=$ _____