

**Competency Based Curriculum (CBC) EXAM**  
**PP2 – 2020**  
**MATHEMATICAL ACTIVITIES**

**NAME:** \_\_\_\_\_

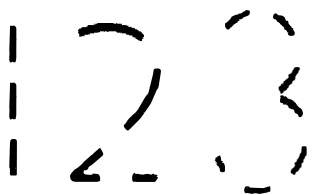
**SCHOOL:** \_\_\_\_\_

Exceeding Expectation 31 – 50	Meeting Expectation 21 – 30	Approaching Expectation 11 – 20	Below Expectation 0 – 10

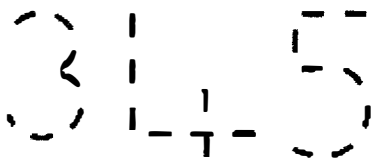
**1. Join the dots and make the pattern.**

Example:

1 2 1 2 1 2

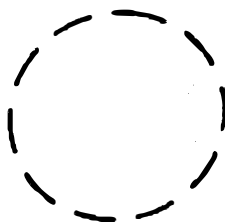


\_\_\_\_\_



\_\_\_\_\_

**2. Trace and name the shapes.**



\_\_\_\_\_


\_\_\_\_\_

3. Make the pattern with numbers.

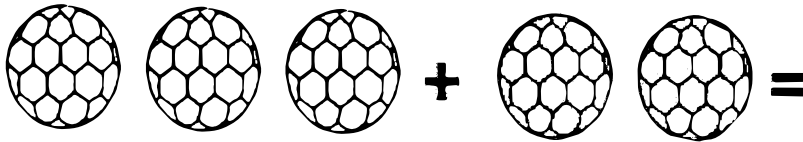
2 2 2 \_\_\_\_\_

5 5 5 \_\_\_\_\_

4. Tick the short one.



5. Add the objects and numbers.



$4 + 3 =$  \_\_\_\_\_

$2 + 6 =$  \_\_\_\_\_

6. Fill in the missing numbers.

6 \_\_\_\_\_ 9 \_\_\_\_\_ 12

15 \_\_\_\_\_ 18 \_\_\_\_\_ 20 \_\_\_\_\_

7. Take your pencil for a walk correctly.

3 ●

● 4

●  
1

●  
2

●  
5