

Competency Based Curriculum (CBC) EXAM

PP1 – 2020

MATHEMATICAL ACTIVITIES

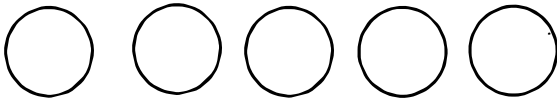
NAME: _____

SCHOOL: _____

Exceeding Expectation 31 – 50	Meeting Expectation 21 – 30	Approaching Expectation 11 – 20	Below Expectation 0 – 10

Count and write.





Draw balls.

$4 =$



$2 =$

$6 =$

Put together.

$O + O O O O =$ _____

 +  = _____

 +  = _____

Fill in the missing numbers.

1 _____ 3 _____ 5 _____ 7

Write 1 – 10.

1 _____ 6 _____

Name the shapes.

