

MONITORING LEARNER'S PROGRESS
GRADE 2 - END OF TERM 1 - YEAR 2020
MATHEMATICAL ACTIVITIES

Name _____

Learners Number

--	--	--	--	--

Gender

Boy

Girl

County Name _____

County code

--	--	--

Sub -County Name _____

Sub-county code

--	--	--



School Name _____

School code

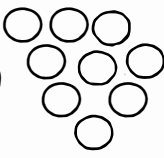
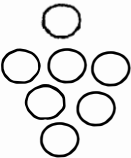
--	--	--	--

Exceeds expectation	Meets expectation	Approaching expectation	Below expectation

1. Work out

(a)  +  = _____

_____ + _____ = _____

(b)  +  = _____

_____ + _____ = _____

2. Circle the lesser number.

(a) 18 19

(b) 22 26

Circle the larger number.

(c) 36 32

(d) 69 22

3. Add

(a) $42 + 32 + 20 =$ _____

(b) $60 + 5 + 11 =$ _____

(c) $19 + 10 =$ _____

(d) $28 + 30 =$ _____

4. (a) Juma had 80 goats and 12 sheep. How many animals did he have altogether? _____

(b) Otieno had 30 sweets, while Aketch had 14 sweets. How many sweets did they have altogether? _____


5. (a) Draw three straight lines

(b) Draw two curved lines


6. Name the shapes.



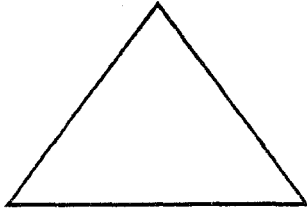




(d)



(e)



7. Subtract

$$\begin{array}{r} (a) \ 32 \\ -20 \\ \hline \\ \hline \end{array}$$

$$\begin{array}{r} (b) \ 18 \\ -10 \\ \hline \\ \hline \end{array}$$

$$\begin{array}{r} (c) \ 29 \\ -9 \\ \hline \\ \hline \end{array}$$

$$\begin{array}{r} (d) \ 60 \\ -50 \\ \hline \\ \hline \end{array}$$

8. (a) Mum had 14 cakes. She gave 9 cakes to dad, How much cakes was she left with? _____
- (b) Sina had 100 cows. On the market day he sold 40 of them. How many cows was he left with? _____
- (c) On a tree there were 90 birds, later 70 of them flew away. How many birds were left on the tree? _____

9. Write the correct sign

(a) $9 \square 9 = 18$

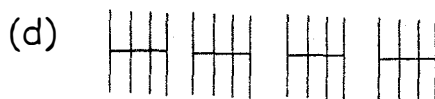
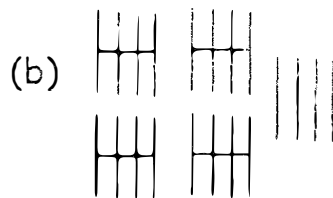
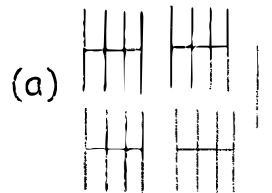
(b) $28 \square 6 = 22$

(c) $20 \square 20 = 40$

(d) $60 \square 40 = 20$

(e) $50 \square 30 = 20$

10. Count the tallies




11. Name the days of the week


- (a) _____
- (b) _____
- (c) _____
- (d) _____
- (e) _____

12. Which one costs more

- (a) pen book

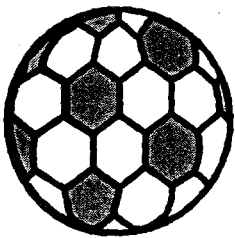


sh 40




sh 50

- (b) Ball



Sh 74


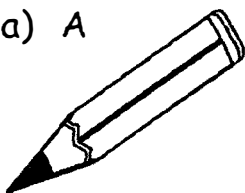
- Orange



Sh 24

13. Which one is taller or longer.


- (a) A B



- (b) A



- B



- (c) A



- B.



14. Work out

(a) $24 = 18 + \underline{\quad} + \underline{\quad}$

(b) $32 = 30 + \underline{\quad}$

(c) $40 = 20 + 10 + \underline{\quad}$

(d) $18 = 4 + \underline{\quad} + \underline{\quad}$

(e) $60 = 50 + \underline{\quad} + \underline{\quad}$