

COMPETENCY BASED CURRICULUM

GRADE 2 - YEAR 2020

MATHEMATICAL ACTIVITIES

Name _____

Learners Number

--	--	--	--	--

Gender Boy Girl

County Name _____ County code

--	--	--	--

Sub -County Name _____ Sub-county code

--	--	--	--	--

School Name _____ School code

--	--	--	--	--

ASSESSMENT RUBRICS

The teacher to fill the grid below after marking the learner's work.

	Exceeds expectation	Meets expectation	Approaching expectation	Below expectation	
Numbers (1-19)					
Measurement (20 - 21)					
Geometry (23-25)					

NUMBERS

Fill in the missing numbers

1. 9, 11, 13, 15, _____
2. 3, 5, 7, 9, _____
3. 5, 10, 15, _____
4. 30, 25, 20, _____

Which one is a half?

5. A.  B.  C. 

Add

6. $54 + 5 =$ _____
7. $2 + 36 =$ _____
8. $5 + 4 + 2 =$ _____
9. $\begin{array}{r} 75 \\ +3 \\ \hline \end{array}$ 10. $\begin{array}{r} 15 \\ +32 \\ \hline \end{array}$


11. $37 + 12 =$ _____

Take away

12. $15 - 4 =$ _____
13. $63 - 8 =$ _____
14. $25 - 5 =$ _____
15. $\begin{array}{r} 45 \\ -3 \\ \hline \end{array}$ 16. $\square - 7 = 2$

17. Mary made 7 baskets. She sold 5 baskets. How many baskets was she left with? _____

Write as addition

18. $\triangle\triangle$ and $\triangle\triangle$ and $\triangle\triangle$ is 
 _____ + _____ + _____ = _____

19. $\circ\circ$ and $\circ\circ$ is $\circ\circ\circ\circ$
 _____ + _____ = _____

MEASUREMENT

20. Which one holds more?



basin




tin

21. Which one hold less




cup



sufuria

GEOMETRY

22. Which one is heavier



Name the shapes.

