

GRADE 1 - 2020

MATHEMATICAL ACTIVITIES

Name

Gender:

Boy

Girl

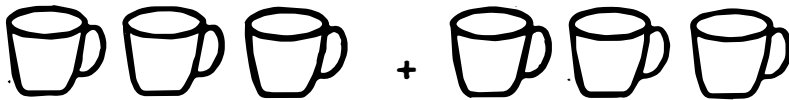
School name

The teacher to fill the grid below after marking the learner's work.

Strand	Numbers	Measurement	Geometry
Question numbers	1 - 5	8 - 9	10
Number of marks	40	5	5
Number of marks scored			

1. Put together.

(5mks)



= _____



= _____



= _____



= _____



= _____

2. Match equal sums.

(5mks)

4 + 6

3 + 5

7 + 2

8 + 1

5 + 3

6 + 4

1 + 8

3 + 6

6 + 3

2 + 7

3. Add using counters.

(5mks)

1 + 4 + 3 =

5 + 0 + 5 =

8 + 1 + 1 =

6 + 2 + 4 =

7 + 1 + 2 =

4. Add vertically.

(5mks)

17	14	26	23	34
<u>+ 2</u>	<u>+ 5</u>	<u>+ 3</u>	<u>+ 5</u>	<u>+ 4</u>
_____	_____	_____	_____	_____

5. Fill in the missing numbers.

(10mks)

10, _____, 12, 13, 14, _____, _____, 17, 18, _____, _____

21, 22, _____, 24, _____, 26, 27, _____, _____, 30, _____

32, 33, 34, 35

6. Fill in using place value.

(5mks)

	Tens	Ones
34		
80		
65		
17		
29		

7. Match number with words.

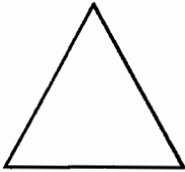
(5mk)


5	Eight
10	Two
8	Five
2	Four
4	Ten

8. Count how many sides.

(3mks)








9. Circle the shorter stick.

(2mks)



10. Match the shapes.

(5mks)

