

CONTINUOUS ASSESSMENT TEST

GRADE 1 - 2020

MATHEMATICS ACTIVITIES

Name.....

Learner's Number

Gender: Boy Girl

County Name.....County Code

Sub-County NameSub County Code

School Name.....School Code

TEACHER'S SCORE GUIDE

The grid below is to be filled by the teacher after marking the learner's work.

Strand	Numbers	Measurement	Geometry
Question Numbers			
No. Of Questions Correct			
Performance Level			

Fill in the missing numbers.

1. 8, _____, _____ 11, 12, _____

2. 18 _____, _____, 21, 22, _____



Circle the smaller number

3. 16 29

4. 26 18

5. 12 11

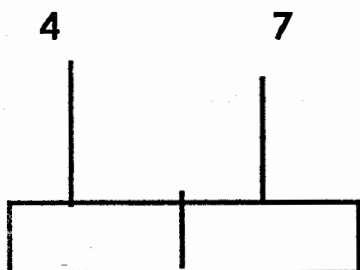
Who is taller?



Match the word with the numbers.

- | | |
|----------------|-----|
| 8. one hundred | 9 |
| 9. zero | 11 |
| 10. four | 100 |
| 11. sixteen | 0 |
| 12. eleven | 4 |
| 13. nine | 16 |

14. Fill in the abacus

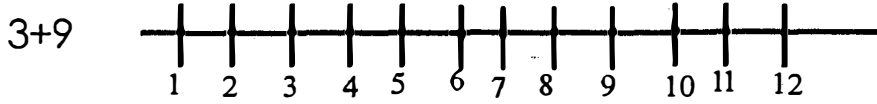


15. Which is the first day of the week _____.

Add

16. $3+6 =$ _____

17. Add using the number line



18

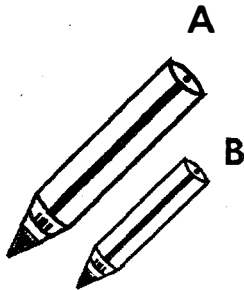
$$\begin{array}{r} 1 \\ +7 \\ \hline 4 \\ \hline \end{array}$$

19.

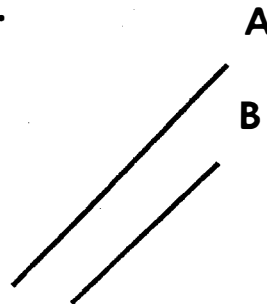
$$\begin{array}{r} 4 \ 6 \\ + \ 4 \\ \hline \\ \hline \end{array}$$

Which one is longer?


20.



21.




22.



Count and write

23.

a)

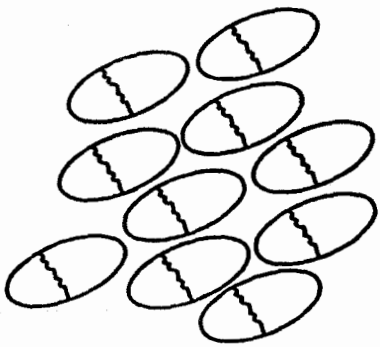


b)




24.

a)



b.



25.

