

**COMPETENCY BASED CURRICULUM ASSESSMENT  
GRADE ONE - YEAR 2020 - MATHEMATICS ACTIVITIES**

SCHOOL: .....








**Write in words. (6 marks)**

1. 9 \_\_\_\_\_
2. 1 \_\_\_\_\_
3. 8 \_\_\_\_\_
4. 15 \_\_\_\_\_
5. 12 \_\_\_\_\_
6. 5 \_\_\_\_\_

**Fill in the missing numbers. (6mks)**

7. . 2 4 6 \_\_\_\_\_
8. 50 51 52 \_\_\_\_\_
9. 10 20 30 \_\_\_\_\_





**Put together. (6mks)**

10.  +  = \_\_\_\_\_
11.  +  = \_\_\_\_\_
12.  +  +  = \_\_\_\_\_

**Write tens and ones. (3mks)**

13. 12 = \_\_\_\_\_ tens \_\_\_\_\_ ones
14. 43 = \_\_\_\_\_ tens \_\_\_\_\_ ones
15. 26 = \_\_\_\_\_ tens \_\_\_\_\_ ones

**Match and colour. (4 marks)**

16.  2 black balls
17.  4 green balls
18.  3 yellow balls
19.  6 red balls

**Work out.**

20. 
$$\begin{array}{r} 20 \\ + 30 \\ \hline \end{array}$$
21. 
$$\begin{array}{r} 83 \\ + 15 \\ \hline \end{array}$$
22.  $16 + 5 =$
23.  $10 + 3 =$
24. 
$$\begin{array}{r} 55 \\ + 33 \\ \hline \end{array}$$
25. 
$$\begin{array}{r} 69 \\ - 25 \\ \hline \end{array}$$
26.  $20 - 9 =$
27.  $18 - 2 =$
28.  $4 + 4 + 2 =$

**Arrange the numbers from the smallest to the largest.**

29. 5 4 6 2 1 3

30. 12 8 6 2 4

31. 30 40 20 50 10

**Work out**

32.  $6 + \square = 12$

33.  $4 + \square = 10$

34.  $8 + \square = 8$

35.  $5 - \square = 3$

**Match with the correct answer.**


36.  $4 + 4 =$  9


37.  $5 + 10 =$  5

38.  $6 + 3 =$  15

39.  $7 - 2 =$  8

**Sort and count.**



40.  = \_\_\_\_\_

41.  = \_\_\_\_\_

42.  = \_\_\_\_\_

43.  = \_\_\_\_\_

44.  = \_\_\_\_\_