

GRADE 4 - 2020

SOCIAL STUDIES & R.E

Name

School name

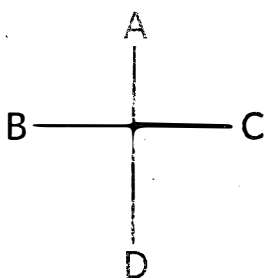
The teacher to fill the grid below after marking the learner's work.

Assessment rubric				
SUBJECT	Exceeds Expectations (50)	Meets Expectations (25 - 49)	Approaches Expectations (16 - 24)	Below Expectations (0 - 15)
SOCIAL STUDIES				

Assessment rubric				
SUBJECT	Exceeds Expectations (25)	Meets Expectations (13 - 24)	Approaches Expectations (8 - 12)	Below Expectations (0 - 7)
R.E				

SOCIAL STUDIES

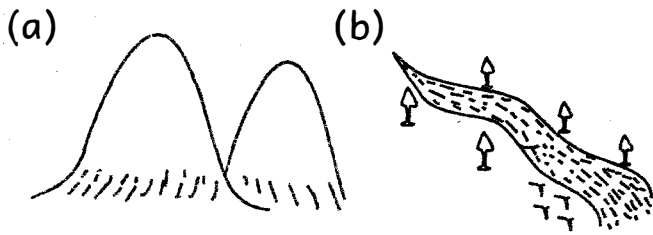
1. What are the names of the four cardinal points? (4mks)




- A _____
 B _____
 C _____
 D _____

2. The above shown tool is called a _____ and is used to _____ (2mks)
3. What is the name of our county? _____ (2mks)
4. Too much rain causes _____ while lack of rain causes _____ (2mks)
5. Name **three** seasons experienced in our county (3mks)
- (a) _____
 (b) _____
 (c) _____

6. Identify the following physical features. (3mks)





7. Name the three main types of soil (3mks)

(a) _____

(b) _____

(c) _____

8. Write four animal products (4mks)

(a) _____

(b) _____

(c) _____

9. Identify any animal that will be useful to people in the following ways (10mks)

Uses Animal

(a) Source of food _____

(b) Security _____

(c) Companionship _____

(d) Tourist attraction _____

(e) Wool _____

10. Draw and colour any two sources of heat (2mks)

(a) _____ (b) _____

11. Name five ways of caring for our historic built environments.

(5mks)

(a) _____

(b) _____

(c) _____

(d) _____

(e) _____

12. The way by which people depend on each other is called _____


(population, dependence, interdependence) (2mks)

13. _____ is the number of people living in a particular area while _____ is the way in which people spread over an area.

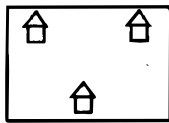
(migration, population distribution, population) (2mks)

14. Identify the type of population distribution shown below. (3mks)

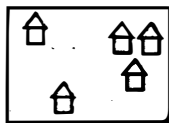
(A)



(B)



(C)



(densely, unevenly, sparsely)

15. Name three safe places in our community (3mks)

(a) _____

(b) _____

(c) _____

(50marks)

CHRISTIAN RELIGIOUS EDUCATION

ASSESSMENT

1. God created me and my body parts in His _____ and _____ (2mks)



2. Bad thoughts make us do _____ (1mk)

(good things, bad things)

3. Draw the faces to show the following emotions. (2mks)

(a) happy face

(b) sad face



4. Write four members of extended family. (4mks)

(a) _____

(b) _____

(c) _____

(d) _____

5. Who were our first parents on Earth? _____ and _____ (2mks)

6. Which are the four Gospel books? (4mks)

(a) _____

(b) _____

(c) _____

(d) _____

7. _____ saw the burning bush. (1mk)

8. _____ is the word of God. (1mk)

9. _____ was swallowed by a big fish. (1mk)

10. Name the **three** Hebrew men who were rescued from the fire. (3mks)

(a) _____

(b) _____

(c) _____

(d) _____

11. The Bible is divided into _____
Testament and _____
Testament. (1mk)

12. Which are the attributes of God?
3mks)

(a) _____

(b) _____

(c) _____

(d) _____

(25marks)

ISLAMIC RELIGIOUS ACTIVITIES

1. The surah that is known as the
mother of Qur'an is _____ (1mk)

2. (i) Surah Ikhlas has _____
verses. (1mk)

(ii) Abu Lahab means _____
(1mk)

3. (i) The sayings of the prophet are
known as _____ (1mk)

(ii) Mohammad was born in
_____ (1mk)

4. Write down two things you
should do before eating (2mks)
(a) _____
(b) _____

5. Write the pillars of Islam in the
correct order. (10mks)

(a) _____

(b) _____

(c) _____

(d) _____

(e) _____

6. Match the following (8mks)

(a) Ar-Rahman - The king

(b) Ar-Raheem - The source of
peace

(c) Al - Malik - Most gracious

(d) Al-Salaam - The merciful