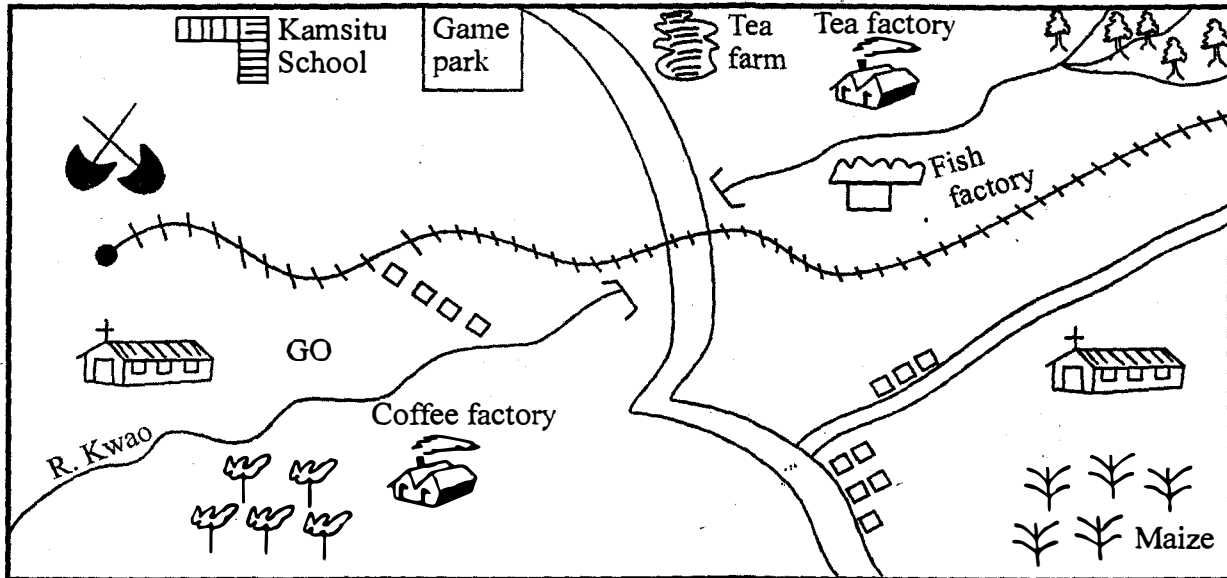


STD. 5 - END OF TERM 1 - 2020

SOCIAL STUDIES

Time: 2hrs 15min

KWENGU AREA



Scale 0 1 2 3 4 5 6 7 8 9 10 KM

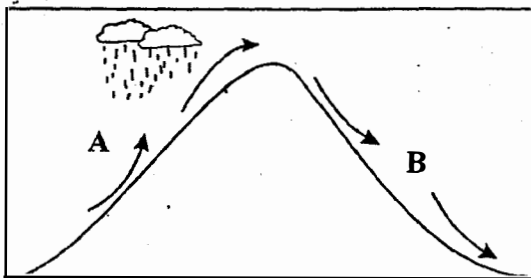
KEY

factory	Maize farms	GO - Governor's Office		Church
Quarry	Tarmac road	Railway	Forest	Coffee

Study the map of Kwengu Area shown above and then answer questions 1 to 7.

- People of Kwengu Area are _____
A. Pagan B. Hindu
C. Christians D. Muslims
- Kwengu Area is administered by a
A. D.C B. P.C C. Chief D. Governors
- What is the direction of the quarry from the coffee factory?
A. South East B. North West
C. West D. East West
- Name the cash crops grown in Kwengu Area
A. maize and beans B. wheat and maize
C. cocoa and nice D. coffee and tea
- River Kwao flows from _____ to direction
A. North East to South West
B. North West to South East
C. South to North
D. South West to North East
- Which economic activity is **not** carried out in kwenguArea?
A. Mining B. Tourism
C. Farming D. Lumbering
- Which is the most common means of transport in Kwengu Area?
A. Railway B. Air
C. Road D. Water
- Money needed by a person to start a business is known as
A. notes B. cash
C. money D. capital
- Cutting down of trees without replacing them is known as
A. afforestation B. deforestation
C. agro forestry D. lumbering
- Nagana' disease is spread by
A. mosquito B. tsetse fly
C. fly D. ticks
- A good map should have all the following **except**
A. title B. scale
C. frame D. colour

Use the diagram below to answer questions that follow.

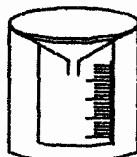


12. The type of rainfall illustrated above is called
A. convectional B. frontal
C. cyclonic D. relief
13. The side marked A is called
A. dry land B. windward
C. rainshadow D. rainland
14. Which town is likely to be found in the side marked B?
A. Meru. B. Nanyuki. C. Nakuru. D. Nyeri.
15. The main commercial crop grown at Mwea irrigation scheme is
A. sisal B. onions C. rice D. cotton
16. _____ is planting of forests on hilly areas and steep river valleys where there was none.
A. Deforestation B. Re-afforestation
C. Conservation D. Afforestation
17. Which one of the following is **not** an element of weather?
A. Longitudes B. Rainfall
C. Temperature D. Wind
18. In the olden day, disputes were settled by the
A. missionaries B. council of elders
C. pastors D. women
19. Which of the following lakes is **not** found on the floor of the Rift valley?
A. Lake Nakuru. B. Lake Victoria.
C. Lake Turkana. D. Lake Naivasha.
20. Where is flourspar mined in Kenya?
A. Kariandusi. B. Lake. Magadi
C. Kerio valley D. Athi river
21. The four **main** points of a compass are called
A. points B. cardinal points
C. N.E.S.W D. main points
22. The compass direction between South and East is
A. S.E.S B. South East
C. W.S.W D. South West
23. Which of the following is **not** a condition necessary for the growth of tea?
A. Dry season during harvesting
B. Cool and wet climate
C. High altitude
D. High rainfall
24. Which of the following is a non-verbal means of traditional communication?
A. Screams. B. Sending a messenger
C. Drum beating D. Smoke
25. The arrow of wind -vane points
A. where the wind is blowing to
B. where wind is blowing from
C. direction of the wind
D. speed of wind

26. The second president of Kenya became the president in the year
A. 1963 B. 1992 C. 1978 D. 1998
27. Which is the headquarters of Nairobi County?
A. Nakuru B. Nairobi C. Garissa D. Mandera
28. If you were driving along a busy road and you saw the sign below, what should you do?



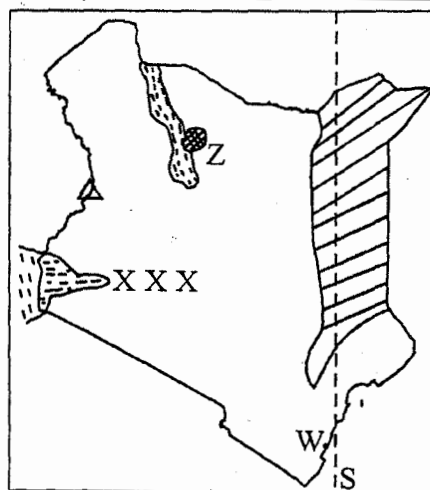
- A. stop B. slow down
C. increase speed D. know there is a barrier
29. Lack of rain is called
A. famine B. drought C. floods D. irrigation
30. Which of the following is not a tourist attraction in Kenya?
A. African culture. B. Cities.
C. Beaches. D. Climate.
31. Dairy cattle are kept for _____
A. milk B. meat C. eggs D. hide and seek
32. Rivers flow from _____ places.
A. high to low B. low to high
C. flat to high D. highlands to hills
33. Which of the following is not traditional industry?
A. Leather work B. Vehicle assembly
C. Pottery D. Iron working
34. This weather instrument is known as a




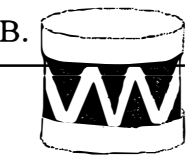


- A. raingauge B. anemometer
C. windvane D. windsock

35. The main vegetation found in the Nyika plateau is
A. acacia and baobab
B. pine and cypress
C. cactus and mahogany
D. meru oak and baobab

Use the map to answer questions 36 to 39.



36. The region marked xx experiences _____ type of rainfall.
A. relief B. frontal
C. convectional D. cyclonic

37. The town marked **W** is
 A. Mombasa B. Lamu
 C. Kipini D. Malindi
38. The mountain shown is Mt _____
 A. Elgon B. Kenya
 C. Kilimanjaro D. Marsabit
39. The main tourist attraction in the national park marked **Z** is
 A. snakes B. pyramids
 C. wild animals D. beaches
40. Which one of the following is **not** a reason for migration?
 A. War
 B. Search for new breeds of animals
 C. Outbreak of diseases
 D. Search for fertile lands
41. Most Kenyans are citizen by
 A. birth B. naturalisation
 C. registration D. migration
42. Among the following, which one is **not** a beef cattle?
 A. Charolis B. Hereford
 C. Jersey D. Aberdeen Angus
43. In the olden days, people worshipped in
 A. dens B. churches C. shrines D. mosques
44. An age-group is made of
 A. people who married together
 B. many age sets
 C. people who are nearly the same age
 D. members of the same family
45. Which community among the following is a Bantu?
 A. Pokomo B. Samburu
 C. Somali D. Maasai
46. The **main** economic activity around Lake Magadi is
 A. Mining B. Fishing
 C. Pastoralism D. Farming
47. The source of River Athi is at
 A. Mount Kenya B. River Tana
 C. Ngong hills D. Mau ranges
48. Among the following, who is not a member of the nuclear family?
 A. Father B. Daughter
 C. Mother D. Son in-law
49. Which method of communication is the odd one out?
 A.  B. 
 C.  D. 
50. Which one of the following is **not** a use of water?
 A. Used as a mineral
 B. Transport

- C. Production of hydro electric power
 D. Irrigation
51. The short rains in Kenya usually falls in the months of _____ and _____
 A. April and June
 B. October and November
 C. July and August
 D. January and March
52. Kenya has _____ elected governors.
 A. 47 B. 48 C. 290 D. 280
53. Moving air helps in _____
 A. blowing off roots
 B. moving wind mills
 C. moving vehicles
 D. growing crops
54. Which one of the following is **not** a hardwood tree?
 A. Camphor. B. Oak.
 C. Pine. D. Teak.
55. On 1st June every year Kenyans celebrate
 A. Jamhuri day B. Madaraka day
 C. Independent day D. Kenyatta day
56. If a thief is caught in a village, the nearest person to report to is the
 A. assistant chief B. police
 C. chief D. teacher
57. _____ is a modern form of transport in Kenya.
 A. Donkey B. Oxen
 C. Camel D. Air
58. The quickest means of communication today is
 A. radio B. newspaper
 C. drum D. mobile phone
59. Elections in Kenya are held after _____ years.
 A. 4 B. 5 C. 6 D. 8
60. Who was the first president of Kenya?
 A. Kijana Wamalwa B. Jomo Kenyatta
 C. Oginga Odinga D. Mwai Kibaki

SECTION B
CHRISTIAN RELIGIOUS EDUCATION

61. Human beings were created in the image of
 A. Adam B. Angels C. God D. Eve
62. _____ was the father of Isaac
 A. Noah B. Abraham
 C. Moses D. Solomon
63. Noah and his family were saved by God from the
 A. lightening B. fire
 C. hunger D. floods
64. The story of creation is found in the book of
 A. Exodus B. Job
 C. Kings D. Genesis
65. Moses saw _____ as a presence of God
 A. burning bush B. flowing river
 C. flying dove D. angels
66. _____ was the wisest king of Israel.
 A. Solomon B. Samson
 C. David D. Gideon

67. Jeremiah was chosen by God before he was _____
 A. baptised B. killed
 C. born D. stoned
68. Joshua led the Israelites into the promised land called
 A. Canaan B. Israel
 C. Egypt D. Jericho
69. Joseph stayed in the temple under the care of priest
 A. Eli B. Jethro
 C. Jacob D. Elkanah
70. How many commandments were given to the Israelites?
 A. 5 B. 12 C. 10 D. 20
71. When Jesus walked on water. He showed that he had power over
 A. water B. disciples
 C. nature D. God
72. Jesus is also known as the prince of
 A. hatred B. sinners
 C. peace D. greed
73. Who betrayed Jesus?
 A. Simon. B. Thomas.
 C. Peter. D. Judas Iscariot.
74. The followers of Jesus were first called Christians at the town of
 A. Jerusalem B. Antioch
 C. Bethany D. Bethlehem
75. Which is the main way in which Christians communicate to God? Through
 A. Prayers. B. Baptism.
 C. Gestures D. Communion
76. When we are wronged by others we should _____ them.
 A. forgive B. beat
 C. curse D. abuse
77. According to St James faith without action is
 A. cheap B. satanic
 C. dead D. alive
78. Our bodies are the temples of the _____
 A. men B. women
 C. church D. holy spirit
79. I am fearfully and _____ made
 A. carelessly B. shapeless
 C. cheaply D. wonderfully
80. The different roles performed by boys and girls are called _____ roles
 A. gender B. class
 C. age D. peer
81. Why should we observe the Sabbath day?
 A. To rest
 B. It is a command from God
 C. To make money
 D. To visit friends
82. A good leader must have all the following qualities **except**
 A. humility B. honesty
 C. patience D. pride
83. For how long does the unborn baby stay in the mothers womb?
 A. 9 months B. 9 years
 C. 9 days D. 1 month
84. Happy are those who _____ for God will comfort them
 A. mourn B. cry
 C. bury D. die
85. Which was the first miracle of Jesus to perform?
 A. Raising lazarus from death
 B. Feeding the 5000 people
 C. Calming the storm
 D. Changing water into wine
86. The following are the fruits of the Holy Spirit **except**
 A. peace B. joy
 C. wisdom D. self control
87. It is God's command for us to _____ those in authority
 A. disobey B. respect
 C. hate D. abuse
88. The apostles creed says that Jesus was conceived by the power of _____
 A. Mary
 B. Joseph
 C. Wisemen
 D. Holy Spirit
89. Which of the following is an effect of irresponsible boy/girl relationship?
 A. Good results in school.
 B. More knowledge about God
 C. Teenage pregnancies
 D. Successful marriage.
90. Which one of the following is **not** a good quality of a friend?
 A. Kindness
 B. Selfishness
 C. Faithfulness
 D. Honesty