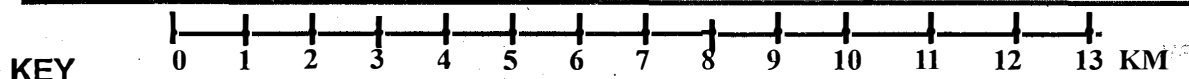
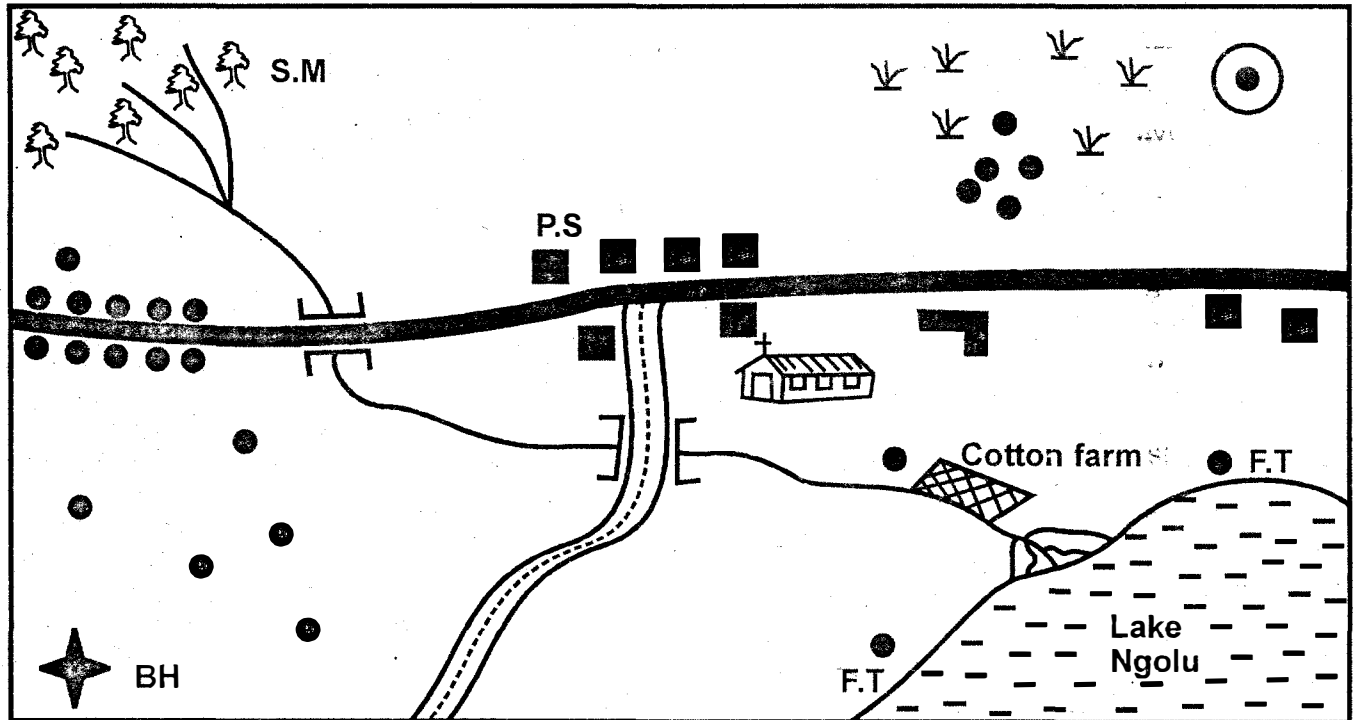


STANDARD SIX - 2020

SOCIAL STUDIES & C.R.E

Time: 2hrs 15mins

NGOLU AREA



KEY

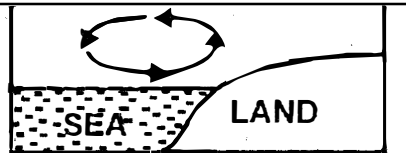
	Permanent houses	P.S	Police Station		Cattle dip
	Settlements	F.T	Fish traps		Scrub
	Forests	B.H	Borehole		School
	Church	S.M	Sawmill		River and Bridge

Use the map of Ngolu area above to answer questions 1 to 7.

- The direction of the sawmill from the cotton farm is
 A. South East B. North West
 C. South West D. North East
- The climate North West of Ngolu area is **likely** to be
 A. cool and dry B. hot and wet
 C. cool and wet D. hot and dry
- What is the name of the feature formed at the mouth of River Ngolu?
 A. Delta B. Estuary
 C. Tributary D. Confluence
- The people of Ngolu area are **likely** to be
 A. Christians B. Muslims
 C. Hindus D. Pagans
- We can tell that cattle farming is practised in the area because of
 A. borehole B. the cattle dip
 C. the sawmill D. the scrub.
- Which economic activity is **not** carried out around Ngolu area?
 A. Farming. B. Sawmilling.
 C. Mining. D. Fishing.
- One element of a map is missing in the map of Ngolu area. Which one?
 A. Key. B. Frame. C. Scale D. Compass.
- Which county in Eastern Africa was **never** colonized?
 A. Uganda. B. Somalia.
 C. Ethiopia. D. Sudan.
- Which one of the following rivers has its source in Lake Victoria?
 A. River Nile. B. River Omo.
 C. River Turkwel D. River Nyando.

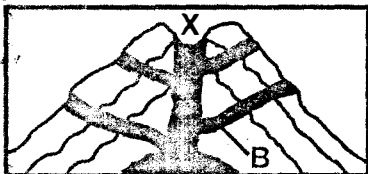
10. Which one of these mountains was formed as a result of faulting and uplifting?
 A. Mt. Kenya. B. Mt. Ruwenzori.
 C. Mt. Meru. D. Mt. Elgon.
11. Which one of the following is **not** caused by nearness to a large water body?
 A. Relief rainfall.
 B. Breeze.
 C. High temperatures.
 D. Convectional rainfall.

12. The diagram below shows the formation of



- A. land breeze
 B. convectional rainfall
 C. relief rainfall
 D. sea breeze.
13. Which one was **not** a reason for the migration of various groups into Eastern Africa?
 A. Internal conflicts.
 B. Search for water and pasture.
 C. Search for raw materials.
 D. Search for land for settlement.
14. Road accidents in Eastern Africa are contributed by the following **except**
 A. fast modern motor vehicles
 B. ignorance of traffic rules
 C. irresponsible road users
 D. overloading.
15. Which one of the following is **not** a major Philosophy in Kenya?
 A. Harambee Philosophy.
 B. Nyayo Philosophy.
 C. African Socialism.
 D. National Anthem.
16. Which one of the following is a factor that undermines peace in a country?
 A. Equality. B. Nepotism.
 C. Dialogue. D. Game and sports.
17. Modern means of communication do **not** include
 A. messengers B. newspapers
 C. radio D. internet.

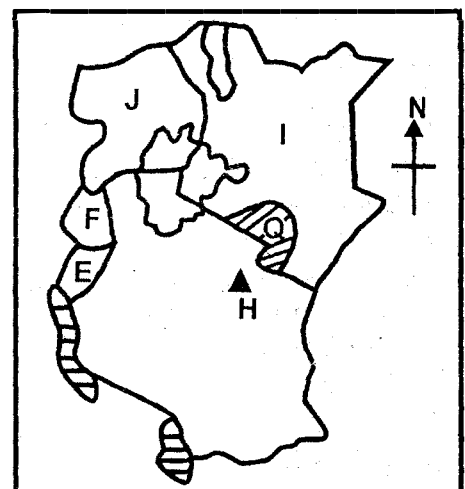
Use the diagram below to answer questions 18 to 20.



18. What is the features marked X?
 A. Cone. B. Vent. C. Crater. D. Dyke.
19. The feature marked W is known as
 A. conelet B. dyke
 C. vent D. lava
20. The diagram drawn above shows the formation of
 A. a plateau
 B. a fold mountain
 C. a block mountain
 D. a volcanic mountain

21. What is the role a class prefect?
 A. Prepare the class timetable.
 B. Remind teachers to attend classes.
 C. Link the pupils and the teacher.
 D. Inspect classroom teachers.
22. Which one of the following communities is the **odd** one out?
 A. Pokomo B. Abakuria C. Ameru D. Nandi
23. The **best** way to transport perishable good is by
 A. air B. road
 C. railway D. water
24. Which one of the following people consists of nuclear family **only**?
 A. Grandparents, father, mother.
 B. Uncles, fathers, mother.
 C. Children, mother, father.
 D. Aunts, uncles, mother.
25. Which one of these countries is **not** part of Eastern Africa?
 A. Ethiopia. B. Malawi.
 C. Burundi. D. Somalia.
26. Trees that shed their leaves during the dry season are called
 A. baobab B. hard C. deciduous D. soft
27. Which one of the following is an example of an ox-bow lake?
 A. Lake Kanyaboli. B. Lake Gambi.
 C. Lake Turkana. D. Lake Kyoga.
28. The first prime minister of Kenya was
 A. Oginga Odinga B. Daniel Arap Moi
 C. James Gichuru D. Jomo Kenyatta.
29. Which one of the following is **not** a symbol of National Unity?
 A. The Court of Arms.
 B. The National Anthem.
 C. Mount Kenya.
 D. The Public Seal.
30. Game parks and reserves are managed by the
 A. Kenya wildlife service
 B. central government
 C. county government
 D. ministry of tourism.
31. The basic unit in the society is the
 A. age-set B. age-group
 C. family D. clan

Use the map below to answer questions 32 to 36.



32. The country marked I is headed by
A. a king B. a prime minister
C. an emperor D. a president.
33. The countries marked E and F are _____ and _____ respectively.
A. Malawi and Congo
B. Rwanda and Burundi
C. Burundi and Rwanda
D. Arusha and Moshi.
34. Which is the capital city of the country marked J?
A. Kampala. B. Kigali.
C. Khartoum. D. Dodoma.
35. The physical feature marked H was formed as a result of
A. erosion B. folding
C. faulting D. volcanicity.
36. The tourist attraction represented by letter G is
A. sand beaches B. pre-historic site
C. artefacts D. wildlife.
37. Which one of these is a secondary need?
A. Clothing B. Phone. C. Food. D. Shelter.
38. People in the past, interacted in the following ways **except**
A. sports B. schools
C. trade D. intermarriages
39. One of the following is **not** a member of the Executive. Which one?
A. Senator B. President
C. Attorney General. D. Cabinet secretary.
40. The following describes a mineral mined in Kenya.
(i) It is mined on the floor of the Rift Valley.
(ii) It is used in making water filters.
(iii) It is white in colour.
The mineral describes above is
A. limestone B. fluorspar
C. diatomite D. soda ash.
41. Which one of the following instruments is the odd one out?
A. Hygrometer. B. Barometer.
C. Thermometer. D. Windsock.
42. A point where two tributaries meet is called
A. a delta B. a confluence
C. a mouth D. an estuary.
43. Where is sugarcane **mainly** grown in Sudan?
A. Kenana B. Kakira C. Juba D. Gezira
44. For one of the elected a member of the county assembly, he should have attained the age of
A. 35 B. 25 C. 20 D. 18
45. The latitude that divides the earth into two equal halves is known as the
A. tropic of Capricorn B. Prime Meridian
C. Equator D. tropic of Cancer.
46. Nairobi urban centre started as
A. a communication centre
B. an industrial centre
C. a trade centre
D. an educational centre.
47. Which one of the following is a quality of good citizen?
A. Unfairness B. Lawlessness
C. Loyalty D. Laziness.
48. Convectional rainfall is experienced in the following places **except**
A. Kisumu B. Lamu C. Nanyuki D. Mombasa
49. Who swears in the elected president of Kenya?
A. Chief Justice.
B. The Attorney General.
C. The Speaker.
D. The Deputy President.
50. Soda ash is mined using which method?
A. Shaft method. B. Open cast.
C. Dredging method. D. Drilling method.
51. What happened when the Bantu and Arabs interacted along the Coast?
A. There were tribal wars.
B. Swahili culture was born.
C. Coconuts were introduced.
D. The railway line was built.
52. The Nyamwezi people were ruled by
A. priests B. kings C. chiefs D. elders.
53. The earliest European explorer to visit Eastern Africa was
A. John Speke B. Vasco da Gama
C. Seyyid Said D. Johann Rebman.
54. Tourism and shoe-shining are
A. service industries
B. manufacturing industries
C. assembling industries
D. processing industries.
55. One of the following is **not** a problem facing many urban centre. Which **one**?
A. Slums B. Congestion
C. Employment D. Traffic jams
56. To avoid getting HIV and AIDS, young people should engage in the following **except**
A. male circumcision B. protected sex
C. abstinence D. prostitution.
57. Which weather instrument is used to measure air pressure?
A. Barometer. B. Rain gauge.
C. Windvane D. Thermometer.
58. Who is the head of the Judiciary?
A. Lawyer B. Chief Justice
C. Attorney General D. Advocate.
59. The world leading producer of sisal is
A. Tanzania B. Rwanda
C. Sudan D. Somalia
60. Ndunge passed near Koyote Primary School's gate and saw these words: "HARDWORK PAYS". These words represented the
A. school rules B. school anthem
C. school proverb D. school motto.

SECTION II

CHRISTIAN RELIGIOUS EDUCATION

61. When did Adam and Eve disobey God? Why they
A. talked to the snake
B. became naked
C. hid away from God
D. ate the forbidden fruits.
62. Why is the human being special of all God's creation?
A. He named all the animals.