

SCHOOL BASED EVALUATION TEST

STD 7 - YEAR 2020

READ THESE INSTRUCTIONS CAREFULLY

Time : 2 Hours 15 min

1. You have been given this question paper and a separate answer sheet. The question paper contains 50 questions.


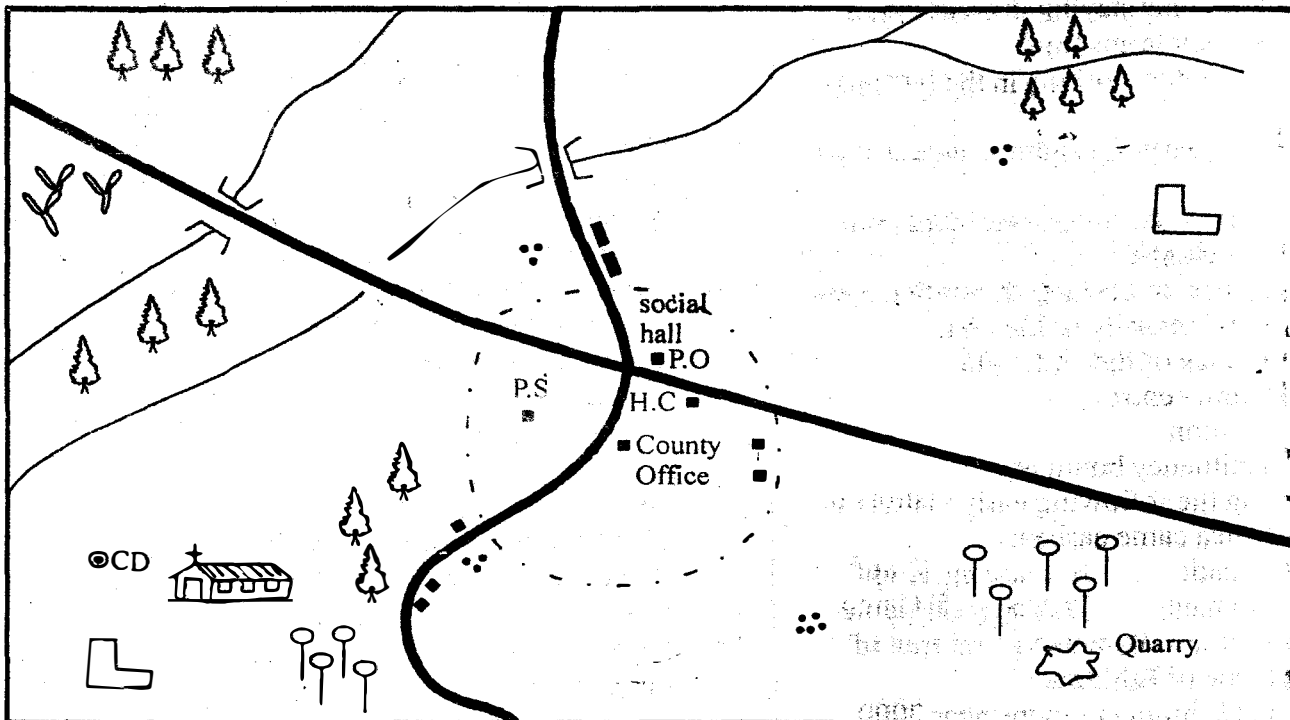
2. Make sure that you have written on the answer sheet.

(i) Your name

(ii) Name of your school

Study the map of Nyamwara area and answer questions 1 - 7

NYAMWARA AREA



HS - Hospital	Constituency boundary	Tea
P.S - Police Station	Coffee	Murram road
Forest	School	Settlement
C.D Cattle dip	PO - Post Office	Tarmac road
Permanent building	Church	River and bridge

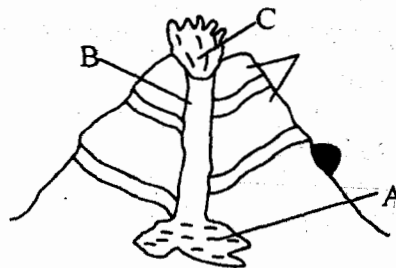
1. Nyamwara Area slopes from
- South West to North
 - North East to North West
 - South West to North West
 - South West to North East

2. Which one of the following economic activity is not found in Nyamwara Area?
- Lumbering
 - Tourism
 - Mining
 - Farming

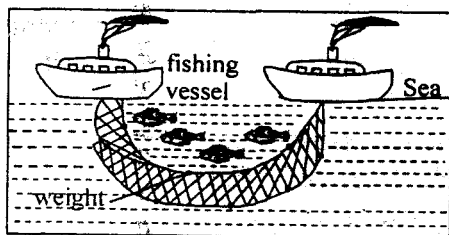
3. What is the direction of the cattle dip from the social hall
A. South West B. South
C. North West D. North East
4. The shopkeeper in Nyamwara area obtain trading licences from the
A. police station B. social hall
C. county office D. post office
5. Nyamwara Area is likely to be in the
A. Plateau area B. lake basin
C. the highlands D. coastal lowlands
6. Which one of the following is the main reason why many people live along the road?
A. They don't like staying in areas where roads are not tarmacked
B. They don't like working in the farming areas
C. It makes it easy for them to access more areas
D. They wish to be using their vehicles to transport people
7. What evidence on the map shows that there is likely to be security in the area
A. the presence of the cattle dip
B. the cultural centre
C. police station
D. the constituency boundary
8. Who among the following early visitors to Eastern Africa came earliest
A. Jacob Erhardt B. Ludwing Krapf
C. John Rebmann D. Vasco Da Game
9. Which of these statements is not true of Haile Selassie of Ethiopia?
A. He ruled Ethiopia upto the year 2000
B. He was once a regent during the reign of empress Zaiduti
C. He was born in Harar in Ethiopia
D. He was the last emperor of Ethiopia
10. Which of these arms of the government policies helps in the implementation of government policies?
A. The legislature
B. The National police service
C. The Judiciary
D. The Executive
11. Which one of these communities was ruled by a king in the pre-colonial period?
A. Nyamwezi B. The maasai
C. The Baganda D. Agikuyu
12. Which of the following groups of rivers drain into lake Victoria?
A. Turkwel, kerio and omo
B. Ewaso nyiro, nzoia and yala

- C. Nyando, Nzoia and yala
D. Turkwel, Ewaso nyiro and Nyando
13. The following are major characteristics of a climate of a certain place
(i) it experiences less than 500mm of rainfall
(ii) high temperatures
(iii) low humidity
(iv) very high evaporation rate
Which of the following climate fits the description above
A. Tropical B. Highlands
C. Semi desert D. Equatorial
14. Trade where money is used is referred to as
A. foreign trade B. domestic trade
C. barter trade D. currency trade
15. Large farms where beef cattle are kept are known as
A. ranches B. baddocks
C. estates D. plantation
16. Which of the following is not a latitude
A. Tropical of capricorn
B. Prime meridian
C. Equator
D. Arctic circle
17. In which climatic zone would you experience hot dry summer with cool wet winters and rain falling mainly in winter
A. Mediterranean B. desert
C. equitorial D. tropical
18. Kipsigis, Nandi, Luo, Alur and Maasai migrated from
A. Horn of Africa B. Ethiopia
C. South Sudan D. Congo forest
19. Most East Africa countries are unable to trade well mainly because they are affected by
A. use of different currencies
B. production of similar goods
C. poor transport system
D. political instability

Use the diagram below to answer questions 20 to 22.



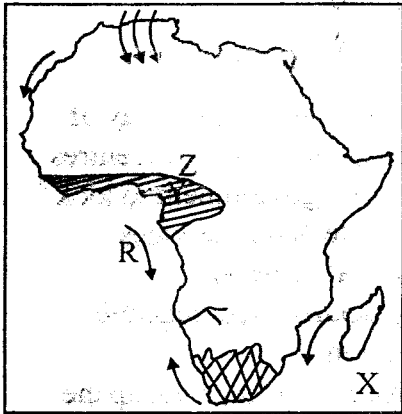
20. Three of the following mountains were formed as a result of the above action **except**
- A. Mt Elgon B. Aberdare ranges
C. Mt Kenya D. Mt Kilimanjaro
21. The part marked **B** is known as
- A. conolet B. lava
C. dyke D. magma
22. The feature formed at the part marked **C** is
- A. vent B. dyke
C. crater D. caldera
23. The **best** way of conserving wildlife especially animals is by
- A. reducing entry fees to the parks for the local people
B. educating people about the importance of wild animals
C. translocating animals to less populated national parks
D. banning illegal hunting of wild animals
24. Three of the following are ways in which people can become citizens of Kenya. Which one is **not**?
- A. By naturalization B. By marriage
C. By registration D. By birth
25. Who among the following is **not** involved in school administration
- A. the deputy headteacher
B. the support staff
C. the head teacher
D. the school committee
26. The **main** tourist attraction along the East African coastline is
- A. Mangrove forest
B. Early visitors settlement
C. Coastal beaches
D. Wildlife
27. The **main** tourist attraction along the East African coastline is
- A. Mangrove forest
B. Early visitors settlement
C. coastal beaches
D. wildlife
28. The method of fishing shown below is called



- A. basket B. purse-seining
C. net drifting D. trawling
29. Which one of the following communities closely related?
- A. Maasai, Rendile, Njemps
B. Abakuria, Abaluhya, Abakuria
C. Akamba, Nyamwezi, Teso
D. Pokomo, Nandi, Tugen
30. Which road connects West Africa and the Eastern Africa?
- A. Great North road
B. Trans-Africa highway
C. Trans-sahara highway
D. Mombasa road
31. Which one of the following is **not** a way of solving the problems affecting urban centres?
- A. Efforts by the county government to look for money to provide better services
B. Introducing electoral reforms
C. The government should discourage the rural-urban migration
D. The county government should put up the traffic lights
32. Africa does not experience severe winters **mainly** because
- A. most of the continent is within the tropics
B. the continent is within the tropics
C. the sun is nearer the surface
D. the equator passes through the continent
33. The size of Africa is
- A. 13,340,000km² B. 30 335 000km²
C. 43608 000km² D. 25349000km²
34. The **main** reason why the congo basin has low population is because
- A. the government does not allow human settlement in the area
B. roads are not well developed
C. it has dangerous animals
D. it has a thick forest
35. Three of the following roles are played by the community in the development of the school. Which one is **not**?
- A. Providing labour to the school
B. Teaching children
C. Buying books for the school
D. Donating land to the school

36. Who were the first European to settle along the coast
 A. Italians B. British
 C. Arabs D. Portuguese
37. Which one of the following terms is used to refer to the number of people living per square kilometres?
 A. Population pressure B. Death rate
 C. population density D. infant mortality.

Use the map of Africa below to answer questions 38 to 39.



38. The winds marked R on the map are
 A. Guinea warm currents
 B. Angola current
 C. Canary cold currents
 D. Benguela cold currents
39. The climatic region marked Y on the map is
 A. mountain B. mediterranea
 C. savanna D. equitorial
40. Which of the following includes hardwood trees only?
 A. Pine, mvule, mahogany
 B. Gravelea, wattle, cypress
 C. Meru, oak, blue gum, camphor
 D. Elgon, teak, mvule, meru oak
41. Three of the following are achievements of NARC government. Which one is **not**?
 A. discouraging corruption
 B. free education in university
 C. promotion of national unity
 D. free primary education
42. Three of the following countries colonized Somalia except
 A. Italy B. France
 C. Germany D. British
43. Agiriama resisted the British occupation on their land **mainly** because
 A. the British replaced their traditional leaders with white rulers

- B. the British forced Africans to grow cash crops
 C. the British wanted Agiriama land for farming
 D. the British refused to pay for the land they took
44. The **main** source of government revenue is
 A. fines B. taxes C. grants D. loans
45. Which one of the following countries is **not** crossed by the equator?
 A. Uganda B. Tanzania C. Gabon D. Congo
46. Which one of the following minerals is **not** mined in Kenya?
 A. Diotomite B. Diamond
 C. Limestone D. Soda ash
47. Which of the following is the main reason why the explorers came to Eastern Africa in the early years?
 A. To acquire wealth
 B. To explore the region
 C. To spread Christianity
 D. To trade with the Lords
48. Who among the following African leaders resisted the colonization of his people in Eastern Africa?
 A. Mutesa I B. Chief Mkwawa
 C. Waiyaki D. Samoure Toure
49. The smallest country in Eastern Africa has its capital city in
 A. Djibouti B. Kigali
 C. Asmara D. Juba
50. Which of the following are examples of downwarping lakes?
 A. Paradise and Nyosi
 B. Tana and Kivu
 C. Magadi and Bogoria
 D. Victoria and Kyoga
51. Which was the **main** reason for Bantus migration from their original homeland?
 A. Search for fertile land
 B. External attack
 C. search for a trading partner
 D. Search for pasture and clean water
52. Which of the following weather instruments is **correctly** matched with the element it measures?
 A. Windvane - strength of the wind
 B. Windsock - speed of wind
 C. Raingauge-water vapour
 D. Barometer-air pressure

53. The nine Makayas village along the Kenyan Coast are made up of the following **except**
 A. Rabai B. Jibana
 C. Digo D. Taita
54. Which is the cheapest method of transporting bulky goods on land?
 A. Air B. Rail
 C. Water D. Road
55. Population census in Kenya is held after every
 A. 9 years B. 7 years
 C. 10 years D. 5 years
56. In which year did Kenya become a republic?
 A. 1964 B. 1963
 C. 1962 D. 1961
57. The following are uses of soda ash. Which one is not?
 A. Used in softening vegetables when cooking
 B. used in making water filters
 C. used in softening water
 D. used in manufacturing dykes, drugs and chemicals
58. The revolution of the earth around the sun causes
 A. lanina B. elnino
 C. seasons D. day and night
59. Which one of the following has its headquarters in Djibouti town?
 A. Common market for Eastern and Southern Africa. (COMESA)
 B. Inter-Governmental Authority on Development (IGAD)
 C. African Union (AU)
 D. East Africa Community (EAC)
60. Which one of the following officers is responsible of restoring law and order after rioting?
 A. The County Commissioner
 B. The Attorney General
 C. Chief Justice
 D. The National Police Service

SECTION II

CHRISTIAN RELIGIOUS EDUCATION

61. Which one of the following is the reason why human beings are the best of God's creation?
 A. They can argue with God
 B. They possess bigger brains
 C. They were created in God's image
 D. They were created last
62. The movement of Israelites through the wilderness is called the
 A. manna B. slavery
 C. passover D. exodus
63. Who among the following was the third king of Israel
 A. David B. Saul
 C. Solomon D. Jeroboam
64. Which one of the following statements is true about Ananias and Sapphira?
 A. Were dishonest
 B. Lived in Nazareth
 C. Performed miracles
 D. Were stoned to death
65. Which one of the following was God's promise to Abraham?
 A. Eternal life after death.
 B. A great nation like the stars
 C. Occupation of the garden of Eden
 D. Circumcision as a birth right
66. Which of the following books was written by Moses?
 A. Joshua. B. Leviticus.
 C. Micah. D. Samuel.
67. The following are Christian values **except**?
 A. purity B. humility
 C. love D. selfishness
68. _____ was used by God to help the Israelites army defeat the midianites.
 A. Moses B. Gideon
 C. Jeremiah D. Paul
69. The following people made good choices in the old testament. Who did **not**?
 A. Abraham B. Ruth
 C. Eve D. Solomon
70. One of the following does not belong to the patriarch. Whos is he?
 A. Moses B. Samuel
 C. Jacob D. Abraham
71. Which one of the following is a special gift received from God?
 A. Humility B. Peace
 C. Love D. Faith
72. The **best** way a Christian can show respect for authority is by
 A. voting for the leaders
 B. praying for the leaders
 C. taking part in development projects
 D. obeying the laws of the country
73. Who among the following disciples of Jesus was a tax collector before he was called by Jesus?
 A. John B. Andrew
 C. Matthew D. Simon Peter

74. Happy are those who mourn for they
 A. will be comforted
 B. will inherit the kingdom of God
 C. will be called sons of God
 D. Will inherit the earth
75. How best should you use your leisure time?
 A. revise for your homework
 B. playing games
 C. help the elderly
 D. visit friends
76. Which one of the following is a reason why Jesus mixed with sinners?
 A. The pharisees hated him
 B. He came from a poor family
 C. They were friendly to Jesus
 D. He came to save the sinners
77. What does the parable of the prodigal son teach us?
 A. pleasure
 B. selfishness
 C. unconditional love
 D. conditional love
78. People who died a long time ago in the Traditional African society were called
 A. elders
 B. ancestors
 C. forefathers
 D. living dead
79. Who among the people was the first son to Noah
 A. Shem
 B. Setu
 C. Japheth
 D. Ham
80. Which one of the following is a lesson Christians learn from the healing of the ten lepers?
 A. They should be thankful
 B. They should be faithful
 C. They should forgive others
 D. They should be courageous
81. Which one of the following is true about the Holy spirit?
 A. The Holy Spirit was given to the apostles only
 B. The Holy spirit is the son of God
 C. The Holy spirit was sent during Ascension
 D. The Holy Spirit gave courage to the apostles
82. In which book of the Bible were the children of Israel released from Egypt
 A. Deutronomy
 B. Genesis
 C. Numbers
 D. Exodus
83. Which of the following is the best way a Christian can advise a person living with HIV and AIDS?
 A. To donate blood to those who need it
 B. To be positive, eat well and socialize freely
 C. To avoid sharing food with others
 D. To avoid sitting with others
84. How did David the son of Jesse use his leisure time?
 A. Being entertained by women dancers
 B. By going to war
 C. By playing harp
 D. By looking after sheep
85. Who among the following women promised to dedicate her son to God?
 A. Hannah
 B. Paul
 C. Elizabeth
 D. Mary
86. Who among the following is a prophet who challenged the worship of Baal at Mount Carmel
 A. Zedekiah
 B. Elijah
 C. Hosea
 D. Elisha
87. James a std 7 boy picked a pen in his classmates bag. What is the best advice to give him
 A. remind him the importance of respecting others property
 B. tell him to continue picking people's property
 C. report to his mother
 D. report to the teacher
88. You have realised your friend John is walking with a company which smokes. As a Christian what is the best advice for him
 A. Tell him to continue associating with the company
 C. Tell him to stop the bad company
 C. Report to your classmate
 D. Tell your area chief
89. Jane your classmate is suffering from HIV and AIDS what is the best way to show love for her?
 A. Run away from her and never talk to her
 B. tell your friends
 C. show love by taking care of her
 D. tell your class teacher
90. Joshua is a std 7 boy. He always carry chapati for the class prefect to avoid being punished for making noise in class. What is the best advise to give him
 A. Report to the classteacher
 B. Tell him to carry more chapatis
 C. Advise him on the effects of corruption
 D. Share chapatis with the class prefect