

COMPETENCY BASED CURRICULUM

GRADE 4 -YEAR 2020

SOCIAL STUDIES & C.R.E

Time: 2 Hours

Name _____

Learners Number

--	--	--	--	--

Gender Boy Girl

County Name _____ County code

--	--	--

Sub -County Name _____ Sub-county code

--	--	--	--

School Name _____ School code

--	--	--	--

TEACHER'S SCORING GUIDE


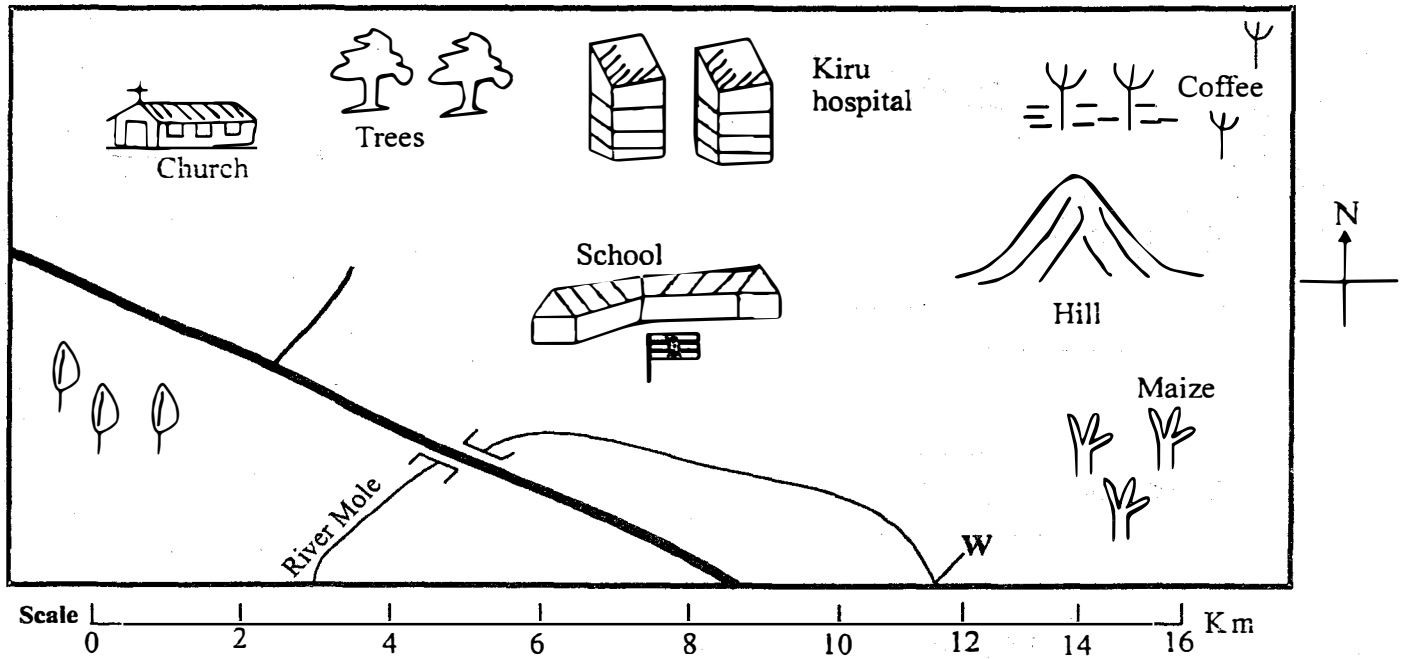
The teacher to fill the grid below after marking the learner's work.

	Exceeds expectation	Meets expectation	Approaching expectation	Below expectation
SECTION A (SST)				
SECTION B (CRE)				

SECTION A

MOLE AREA

Study the map of Mole area and use it to answer questions 1 - 4



KEY

Tea	Tarmac road	Trees	Hill	Lake
River and bridge	Coffee	Maize	Permanent building	

- Name the physical feature located at the North East of Mole area
- What is the direction of the river from the school _____
- People in Mole area get water from the _____
- The part of the river on the map marked **W** is called _____
(source, mouth, delta, end)
- The people of Mole area belong to _____
(Christianity, Islam, Hinduism)
- A compass has _____ cardinal points.
(4, 6, 8, 10)
- The arrow of the compass always points to the _____ of the compass _____
- The sun sets to the _____
- My county is called _____
- There are _____ sub counties in my county.
- The smallest county in Kenya is _____
- The direction point of a compass between South and East is called _____
- A fairly flat land is called _____
- The small rivers which join a major river is called a _____
- Rivers which only appear during the rain season are called _____
- Name the largest sub-county in your county.
- The two physical features in my county are _____ and _____
- The physical feature that give us water for domestic use is called a _____

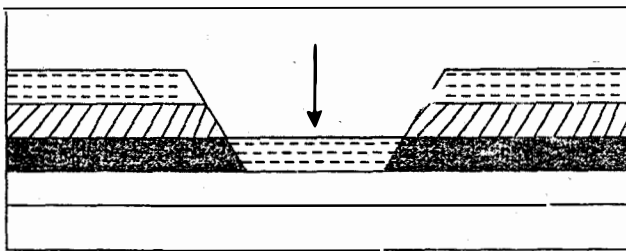
19. There are _____ seasons in a year.
(12, 4, 5, 6)
20. People wear heavy clothes during which season? _____
21. Name your neighbouring county

22. Name one historic built environment in your county

23. Name one way of taking care of historic built environment

24. Name one way how people in your sub-county depend on each other

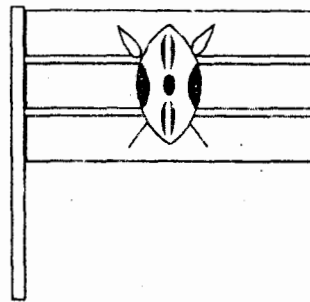
25. _____ help children to learn.
(Teachers, Traders, Pastor)
26. We depend on _____ to make our uniforms.
(drivers, divers, tailors)
27. Patients depend on _____ for their treatment.
28. Which one of the following is a sad ceremony? _____
(burial, wedding, graduation)
29. Name the physical feature drawn below



A _____

30. The number of people living in a particular area is called _____
(populaiton, population distribution)
31. Areas with many houses built together are said to be _____
(unevenly distributed, densely populated, sparsely populated)

32. The symbol of our national unity below is called a _____



33. The above symbol has how many colours _____
34. Most primary school pupils go to school by which means?

(bicycle, walking, bus)
35. The head of a county is a _____
36. How many school holidays for primary school going children are there in every calender of the year?
(1, 2, 3, 6)
37. A weather instrument that is used to measure the temperature of a place is called _____
38. A person who use compass direction to land at an airport is called a _____
(pilot, captain, boy scout)
39. The way of peoples life is called _____
(tradition, culture, religion)
40. When was your school started?

SECTION B
CHRISTIAN RELIGIOUS EDUCATION

1. Why are human beings special?

2. Which book of the Bible do you find these verse?
"you created every part of me, you put me together in my mother's womb"
(Genesis, Psalms, Matthew)
3. Which one is **not** a good thought?
(sharing, fighting, forgiving)
4. How many books are there in the new testament?

5. Who are members of a nuclear family?

6. Which promise are children given in Ephesians 6:1-3 when they obey their parents?

7. Who abused his half sister sexually?
(David, Amnon, Tamar)
8. Complete; my body is the _____ of the Holy spirit.
9. God created all things. Which name do we call Him?
(Holy, creator, loving)
10. Why should you handle the Bible with respect?

(It is a big book, it is a holy book, it was written by Jesus)
11. How many books are there in the old testament?

12. Which is the first book in the new testament?

13. What did Zacchaeus do to show that he had repented? He
A. climbed a sycamore tree
B. shared a meal with Jesus
C. gave back what he had taken
D. followed Jesus
14. Who did king Balak send to curse the Israelites?

15. Why is it good to obey our parents?

16. Who killed a lion with his hands

17. Who interpreted the king's dream?

18. Where was Abraham living when God called him?

(Canaan, Haran, Egypt)
19. Who announced the birth of Jesus?

20. Write the names of the parents of John the baptist?
