

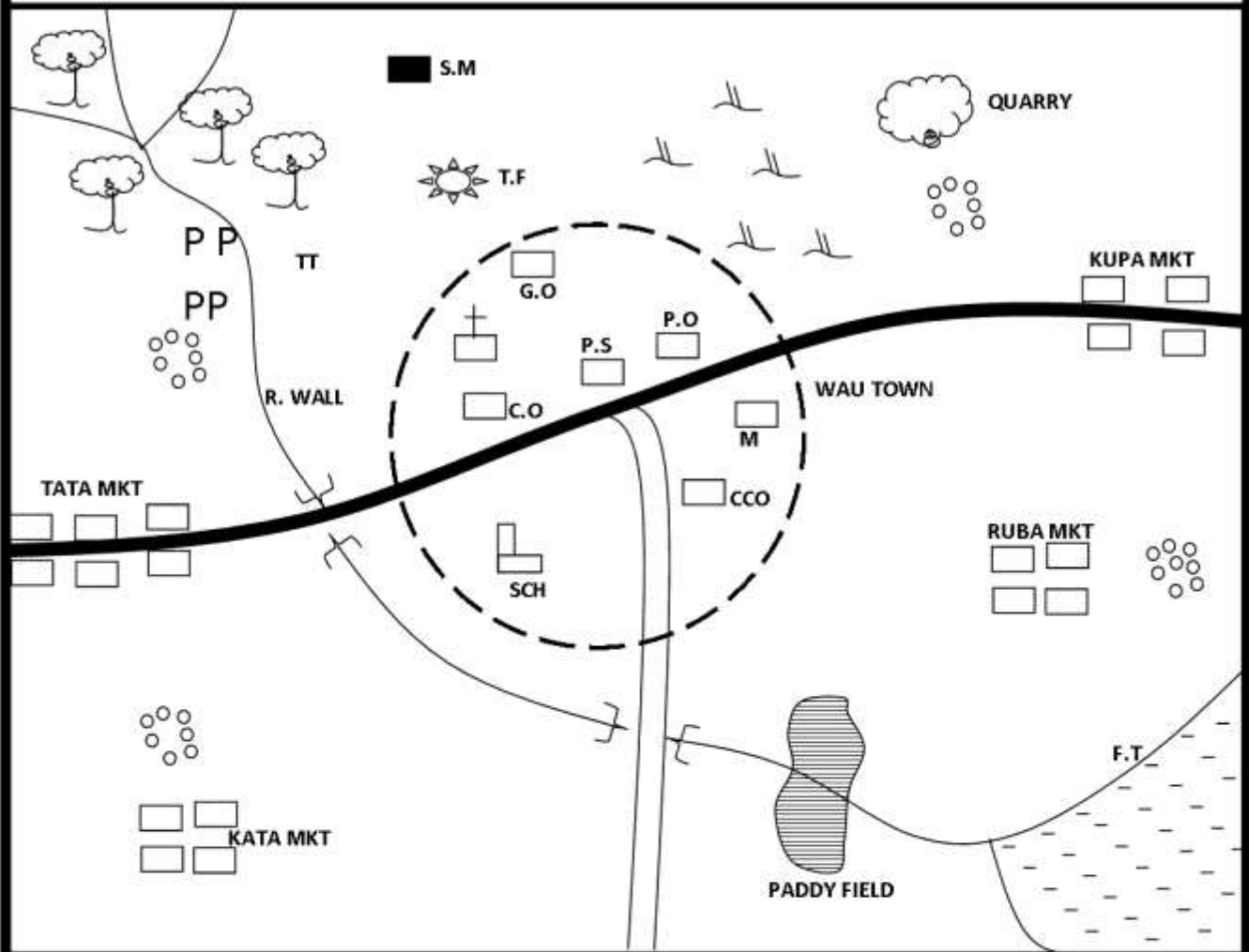
EXAMINATION

STD 7 MAY ASSIGNMENT 2020

**SOCIAL STUDIES AND
RELIGIOUS EDUCATION**

Time: 2 hour 15minutes

WAU AREA



Scale 1cm rep 2km



Forest

TT

Tea

PP

Police post



Scrub



Quarry



Permanent building



Settlements

F.T

Fish trap

P.O

Post office

P.S

Police station

G.O

governor's office

CCO

County commissioner



Tarmac road



Murram road

S.M

Saw mill

M

Museum

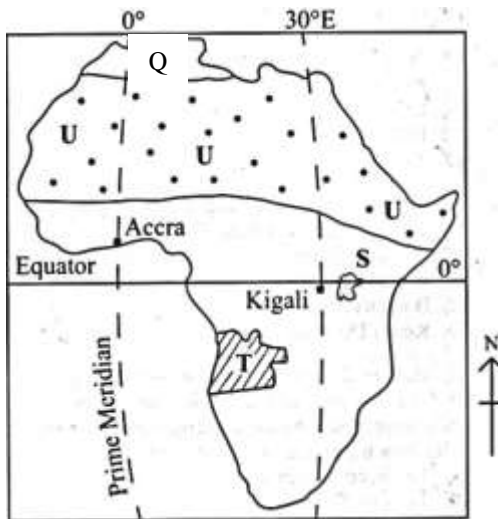


Town boundary

1. The Land in wau area slopes to the
 - A. North east
 - B. Southwest
 - C. Northwest
 - D. Southeast
2. Which one of the following crop is the main staple crop for the people of wau
 - A. Coffee
 - B. Rice
 - C. Pyrethrum
 - D. Tea
3. Wau town serves the following functions except?
 - A. Religion
 - B. Health centre
 - C. Educational
 - D. Administration
4. Population distribution in wau area is mainly influenced by?
 - A. Rainfall patterns
 - B. social activities
 - C. Economic activities
 - D. Transport system
5. Traders in wau area obtain their trading licence from?
 - A. The police station
 - B. The area chief
 - C. The governor office
 - D. The county commission office
6. Which one of the following economic activities is NOT carried out in wau area?
 - A. Livestock keeping
 - B. Tourism
 - C. Fishing
 - D. Lumbering
7. The population settlement pattern found in wau area can be described as
 - A. Dense
 - B. Disperse
 - C. Linear
 - D. Clustered
8. Below are functions of a clan. Which one is **NOT**?
 - A. Determining religious beliefs.
 - B. solemnizing marriages.
 - C. Allocating land to individual families.
 - D. Making decisions on matters affecting the family.
9. The main pollutant of rivers in Kenya is?
 - A. Soil particles
 - B. Industrial chemicals
 - C. Animal waste.
 - D. Domestic wastes.
10. Which one of the following was the main economic activity of Agiriama before the coming of the Europeans?
 - A. crop growing
 - B. Hunting
 - C. Trading
 - D. Cattle keeping
11. Which one of these duties was **NOT** meant for boys in the traditional Abaluhya community?
 - A. Hunting skills
 - B. Herding of animals
 - C. Blacksmithing skills
 - D. midwifery
12. Below are facts about certain people before the colonial period:
 - i. They introduce new ways of dressing.
 - ii. They brought Islam religion.
 - iii. They introduced new building techniques.
 The people described here are the?
 - A. Missionaries
 - B. Arab traders
 - C. Explorers
 - D. Portuguese traders
13. Three of the following are factors affecting climate in Kenya except?
 - A. Winds
 - B. Distance from water bodies
 - C. Latitude
 - D. Longitude
14. The following are communities associated with the River Lake Nilotes:
 - i. Nuer
 - ii. Dinka
 - iii. Shilluk
 In which country are they found?
 - A. Uganda
 - B. Tanzania
 - C. Sudan
 - D. Kenya
15. The current threat to Mau forest conservation is?
 - A. Drought
 - B. Forest fires
 - C. Human encroachments
 - D. Pollution

16. The most Northerly point of the African continent is?
 A. Cape Verde
 B. Cape Lopez
 C. Cape Blanco
 D. Cape Guardafui
17. The main road that joins Kenya to Lagos – Nigeria is known as?
 A. Great North Road
 B. Trans-Saharan Highway
 C. Trans-African Highway
 D. Oudja – Gao Highway
18. The time in Accra is 10.30a.m. What time will it be in Alexandria 30°E.
 A. 8.30a.m. B. 12.30p.m.
 C. 8.30p.m. D. 12.30a.m.

Use the map below to answer questions 21– 24



19. The dotted area marked U is sparsely populated because it
 A. is forested B. is hot and dry
 C. is mountainous D. experiences floods
20. The vegetation in the region marked Q is
 A. Temperate B. savannah
 C. Mediterranean D. Mountain
21. The country marked T was colonized by?
 A. Italy B. British
 C. French D. Portugal
22. The lake marked S was formed as a result of
 A. down warping B. erosion
 C. Volcanicity D. deposition by rivers
23. The world's leading cocoa producer is a country found in Africa. It is
 A. Ghana B. Nigeria
 C. South Africa D. Cote d' Ivoire

24. The party that led Tanganyika to Independence in 1957 was?
 A. CCM B. TAA
 C. TANU D. ASP
25. Which one of the following combinations of countries in Eastern Africa border the Red Sea?
 A. Sudan and Kenya
 B. Uganda and Eritrea
 C. Djibouti and Somalia
 D. Egypt and Libya
26. Which type of farming is described below:
 i. Uses family labour.
 ii. Farming activities are done in small scale.
 iii. Uses traditional tools in farming.
 iv. Farmer sub-divide his land into portion which he/she cultivate at a time.
 The method described above is?
 A. Plantation farming
 B. Bush fallowing
 C. Shifting cultivation
 D. Subsistence farming
27. The process of extracting trona in Lake Magadi is through?
 A. Dredging
 B. Quarrying
 C. Drilling
 D. Deep shaft
28. Which one of the following is **NOT** a problem faced by nomadic pastoralists in Kenya?
 A. Lack of labour
 B. Cattle rustling
 C. Drought
 D. Animal diseases
29. The largest inland fishing ground in Africa is?
 A. Lake Tanganyika
 B. Lake Magadi
 C. Lake Victoria
 D. Lake Nasser
30. The Kenana irrigation scheme in Sudan was mainly started to?
 A. Control floods in the area.
 B. Settle the landless people.
 C. Produce hydroelectric power.
 D. Increase sugarcane production.
31. Which of the following functions was **NOT** performed by religious leaders in traditional African society?
 A. Foretelling the future
 B. Blessing warriors
 C. Allocating land to clan members
 D. Presiding over important religious ceremonies

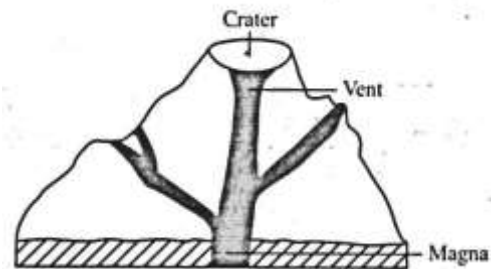
32. Which of the following correctly describes a family?
- A group of people who live together
 - A group of people who have a common origin.
 - A group of people related by blood or marriage
 - A group of people born at the same place
33. The main benefit Kenya get by trading with her neighbours is?
- obtain machinery
 - promotes friendly relationships
 - earns foreign exchange
 - promotes cultural exchange
34. The picture below represents a type of shelter used by a community in Kenya during the pre-colonial period.



- The community lived in such shelters because
- The area they lived in experienced winds
 - The people lacked skills for building a stronger shelters
 - The shelters were suitable to their way of life
 - The shelters were adequate for their small families
35. Which one of the following minerals is correctly matched with the method of its extraction?
- | | |
|---------------|-----------|
| A. Diatomite | Quarrying |
| B. Lime-stone | Shaft |
| C. Gold | Open cast |
| D. Copper | dredging |
36. The highest court in Kenya is the?
- Court of Appeal
 - High Court
 - Court Martial
 - Supreme Court
37. Below are minerals mined in Africa. Which is correctly matched with the country where it is produced?
- Copper – Kenya
 - Soda ash – Nigeria
 - Gold – South Africa
 - Petroleum – Zambia

38. The Aswan high dam was constructed mainly to
- produce HEP
 - Promote industrial development
 - regulate the flow of river Nile
 - promote crop production
39. Which one of the following factors has mainly influenced the location of Webuye Paper Mills in Webuye?
- Nearness to large market.
 - Availability of raw materials.
 - Availability of land.
 - Availability of power.

The diagram below shows structure of a type of mountain



40. The type of mountain shown in the diagram was formed as a result of
- faulting of the rock
 - folding of the rock
 - deposition of eroded materials
 - accumulation of lava on the earth's surface
41. Which combination of lakes below were formed using the above method?
- Nasser and Volta
 - Paradise and Shalla
 - Tana and Itasy
 - Gambi and Kanyaboli
42. Which of the following is celebrated to remember the Madaraka Day for Kenya?
- 1st January
 - 1st June
 - 1st December
 - 12th December
43. Paul planted maize and cypress trees on his piece of land. This kind of forest conservation measures that he is practicing?
- Deforestation
 - Agroforestry
 - Reafforestation
 - Afforestation
44. Which one of the following is not a member of IGAD?
- Kenya.
 - Eritrea.
 - Uganda.
 - Tanzania

45. Uncles, nieces, nephews and grandparents are members of?
 A. The single parent family
 B. The nuclear family.
 C. The adopted family
 D. The extended family.
46. The Berlin Conference of 1884 – 1885 was organized by?
 A. Otto Von Bismark
 B. Karl Peters
 C. Sir Everlyn Baring
 D. Sir William Mackinon
47. Which of the following type of fish is reared in most of the ponds in Kenya?
 A. Nile perch
 B. Tilapia
 C. Tuna
 D. Dagaa
48. The most suitable method of fishing in deep sea fishing is?
 A. net drifting
 B. long lining
 C. trawling
 D. purse seining
49. The following are problems facing Maasai pastoralists. Which one is not?
 A. drought
 B. hyena attack their animals
 C. pest and diseases
 D. cattle rustling
50. Who among the following represent a county in the Senate?
 A. Governor
 B. Senator
 C. Member of Parliament
 D. Women County Representative
51. The new constitution was promulgated in the year?
 A. 4th August 2010
 B. 27th August 2011
 C. 27th August 2010
 D. 4th August 2012
52. A by-election can be held due to three of the following **except**:
 A. Death of a seating member
 B. Member is declared bankrupt.
 C. Member is of unsound mind
 D. Member is jailed for 2 months.
53. The best way to control drug abuse among the youth is by?
 A. Employing more police officers.
 B. Arresting all drug traffickers.
 C. Harsh penalties on drug users.
 D. Creating awareness on effects of drugs.
54. The main benefit to Kenya for being a member of COMESA is?
 A. Increased trade in Kenya.
 B. Political stability.
 C. Improved health care.
 D. Development of infrastructure.
55. The rights and freedoms of an individual are found in the?
 A. Judiciary
 B. Constitution
 C. Hansard
 D. Manifesto
56. The first African in Kenya to be nominated to the Legco was?
 A. Alibhai Mulla Jevanjee
 B. Eliud Mathu
 C. B. A. Ohanga
 D. Harry Thuku
57. The following are sources of government revenue except?
 A. Taxes
 B. Loans
 C. Harambee contribution
 D. Court fines
58. Which one of the following is the main function of police in Kenya?
 A. Arresting criminals
 B. Making laws
 C. Punishing criminals
 D. Maintaining law and order
59. First aid is mainly administered to?
 A. Cure diseases
 B. Relief pain
 C. Save life
 D. Promote recovery
60. Who among the following members of the school administration chairs the staff meeting?
 A. head teacher
 B. chairperson
 C. deputy headteacher
 D. senior teacher

SECTION TWO
CHRISTIAN RELIGIOUS EDUCATION

61. Which one of the following **BEST** describes human beings as special?
A. They were created on the sixth day.
B. They were moulded from clay.
C. God breathed life into man's nostrils.
D. They were given power over all creation.
62. The father of Leah and Racheal was?
A. Amram
B. Jethro
C. Manoah
D. Laban
63. Which one of the following commandments shows that God expects us to be honest?
A. Do not commit murder.
B. Do not steal.
C. Obey the Sabbath day.
D. Do not accuse anyone falsely.
64. Prophet Jeremiah was **NOT** ready to accept to be a prophet because?
A. He was too young.
B. he was too old.
C. He was sinful.
D. He was not educated.
65. Where was Moses when God called him?
A. Haran
B. Ur
C. Midian
D. Gashen in Egypt
66. Which one of the following is a prophecy of Isaiah?
A. Coming of the Holy Spirit.
B. The new covenant of love.
C. Birth of Jesus in Bethlehem.
D. Ministry of Jesus
67. Which one of the following parables teaches on the use of our talents?
A. The three servants
B. The widow and the judge
C. The ten maidens
D. The Good Samaritan
68. Which one of the following is a teaching on forgiveness from the Lord's Prayer?
A. Forgive and forget.
B. We must forgive others to be forgiven.
C. To forgive as many times as we can.
D. To forgive and pray for our enemies.
69. Which one of the following is **NOT** a beatitude?
A. Blessed are those who are persecuted.
B. Blessed are the meek.
C. Blessed are the peace makers.
D. Blessed is he who comes in the Lord's name.
70. Who among the following committed her life to serve the poor?
A. Tabitha
B. Lydia
C. Mother Teresa
D. Priscilla and Aquilla
71. The church **MAINLY** started the rural and industrial centres in order to?
A. Improve the quality of life.
B. Train people to be evangelists.
C. Make people healthy.
D. Teach on bible reading.
72. Through which way did God tell Joseph to return to Israel with Jesus after the death of King Herod?
A. A dream
B. A star
C. The shepherds
D. The wisemen
73. Which title did John the Baptist give to Jesus?
A. Prince of Peace
B. Lamb of God
C. Saviour of the Jews
D. Son of David
74. The following are words of Jesus on the cross **except**?
A. My God, My God, why have you forsaken me
B. Into your hands Lord I place my Spirit.
C. Forgive them father for they don't know what they are doing.
D. Take this cup of suffering away from me.
75. Who among the following people prepared the body of Jesus for burial?
A. Joseph of Arimathea
B. Cleopas
C. Simon of Cyrene
D. Andrew
76. What lesson do Christians learn from the healing of the ten lepers?
A. To seek God in prayer.
B. To be grateful always.
C. To be righteous in their dealings.
D. To be happy in life.

77. Which Jewish feast was Jesus and the disciples celebrating during the Last Supper?
- Harvest feast
 - Passover feast
 - Feast of weeks
 - Feast of Pentecost
78. In which town was Jesus rejected by his own people after declaring his hope for mankind?
- Carpenaum
 - Jerusalem
 - Bethany
 - Nazareth
79. Why should we **MAINLY** obey the people in authority?
- Their power to punish is real.
 - They are God's representatives on earth.
 - They rule people with justice.
 - To help in maintaining peace.
80. "This is my body, which is given for you."
(Lk.2:19)
These words were said by Jesus during the?
- Last Supper
 - Crucifixion on the cross
 - Trial before Pilate.
 - Ascension of Jesus
81. What do we learn about God from the Lord's Prayer and the Apostles Creed? God is
- The Creator
 - Almighty
 - Our Father
 - Merciful
82. Which one of the following events took place **LAST** on the day of Pentecost?
- Tongues of fire rested on the disciples.
 - Noise like that of a mighty wind.
 - Disciples speaking in tongues.
 - Disciples were filled with the Holy Spirit.
83. Who among the following religious leaders is found Christianity and Africa Religion?
- Deacons
 - Herbalist
 - Diviners
 - Priests
84. African traditional communities did **NOT** practice:
- Female circumcision
 - Offering sacrifices
 - Sharing of the Holy Communion
 - Wife inheritance
85. Who among the following was **NOT** an apostle of Jesus before his death?
- Mathias
 - Judas Iscariot
 - Peter
 - Nathaniel
86. Which role was given to Stephen in the early church?
- Distributing funds to widows and orphans.
 - Preaching the gospel to non-Jews.
 - Taking care of the aged.
 - Comforting the sick.
87. The following are fruits of the Holy Spirit except?
- Faithfulness
 - Joy
 - Perseverance
 - Faith
88. Which one of the following is a cause of child labour?
- Being very hardworking.
 - Learning on the dangers of child labour.
 - Drug abuse among parents.
 - Having responsible parents.
89. John, a std. 7 boy does not want to work in the farm because he feels it is a dirty job. What advise would you give him?
- To do the work as there is payment.
 - To understand that such work is good.
 - To ask his parents to employ a worker.
 - To ask his brother to do it.
90. Which one of the following statements is **TRUE** about the early Christian Missionaries?
- They participated in the building of the railway.
 - They encouraged slave trade.
 - They taught African Religion in their schools.
 - They translated the bible into local languages.