

# GRADE 4 - 2020

## SCIENCE AND TECHNOLOGY

Name .....

School name .....

The teacher to fill the grid below after marking the learner's work.

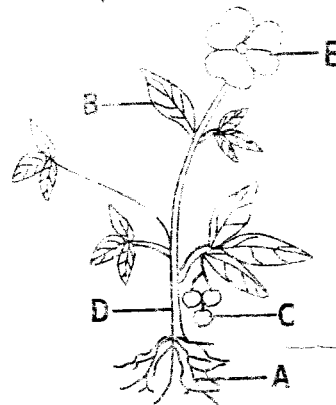
Below Expectations (0 - 15)	Approaching Expectations (16 - 24)	Meet Expectations (25 - 49)	Exceeds expectations (50 )

1. Things in our environment are grouped into two. These are \_\_\_\_\_ things and \_\_\_\_\_ things. (2mks)

2. What are the characteristics of a cow as a living thing? Name five. (10mks)

- a) \_\_\_\_\_
- b) \_\_\_\_\_
- c) \_\_\_\_\_
- d) \_\_\_\_\_
- e) \_\_\_\_\_

3. Name the following parts of a plant. (5mks)




- A. \_\_\_\_\_
- B. \_\_\_\_\_
- C. \_\_\_\_\_
- D. \_\_\_\_\_
- E. \_\_\_\_\_

4. What part of a plant do we eat? (5mks)

- a) Sugarcane - \_\_\_\_\_
- b) Spinach - \_\_\_\_\_
- c) Tomato - \_\_\_\_\_
- d) Kaies - \_\_\_\_\_
- e) Yams - \_\_\_\_\_



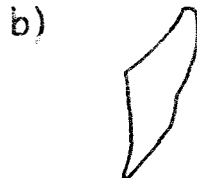

5. Draw and colour a chick. (2mks)



6. Name three things used when handling plants in order to ensure safety. (3mks)

- a) \_\_\_\_\_
- b) \_\_\_\_\_
- c) \_\_\_\_\_

7. What are the names of the following types of teeth? (4mks)



\_\_\_\_\_

(canine, incisor, molar, premolar)

8. Write three sources of water. (3mks)

- a) \_\_\_\_\_
- b) \_\_\_\_\_
- c) \_\_\_\_\_

9. \_\_\_\_\_ water is safe for drinking. (2mks)  
**(Clean, Rain, Boiled)**

10. Write whether it is living or non living thing. (5mks)

- a) Grass - \_\_\_\_\_
- b) Snake - \_\_\_\_\_
- c) Stone - \_\_\_\_\_
- d) Sisal - \_\_\_\_\_
- e) Cow - \_\_\_\_\_

11. Name three methods of making water clean. (3mks)

- a) \_\_\_\_\_
- b) \_\_\_\_\_
- c) \_\_\_\_\_

12. What are the five uses of water? (5mks)

- a) \_\_\_\_\_
- b) \_\_\_\_\_
- c) \_\_\_\_\_
- d) \_\_\_\_\_
- e) \_\_\_\_\_

13. Giving rise to a young one of the same kind is called \_\_\_\_\_. (1mk)

**(reproduction, feeding, response to changes)**