

MONITORING LEARNER'S PROGRESS
GRADE 4 - END OF TERM 1 - YEAR 2020
SCIENCE & TECHNOLOGY AND AGRICULTURE



Name _____

Learners Number

--	--	--	--	--

Gender

Male

☐

Female

☐

County Name _____ County code

--	--	--

Sub -County Name _____ Sub-county code

--	--	--

School Name _____ School code

--	--	--	--

Exceeds expectation	Meets expectation	Approaching expectation	Below expectation

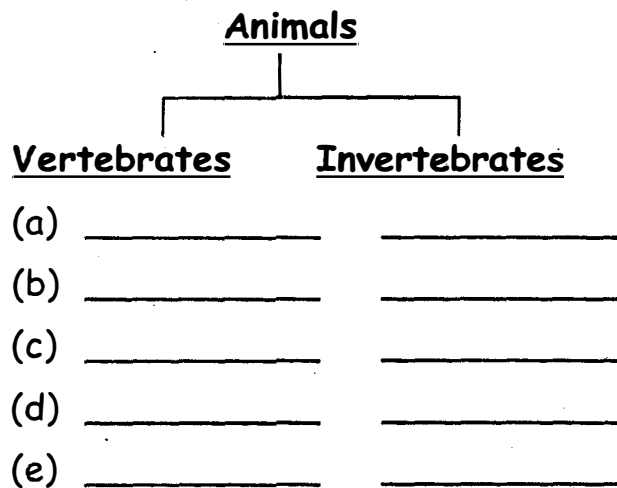
SCIENCE

1. Write down four plants that are found within your environment.

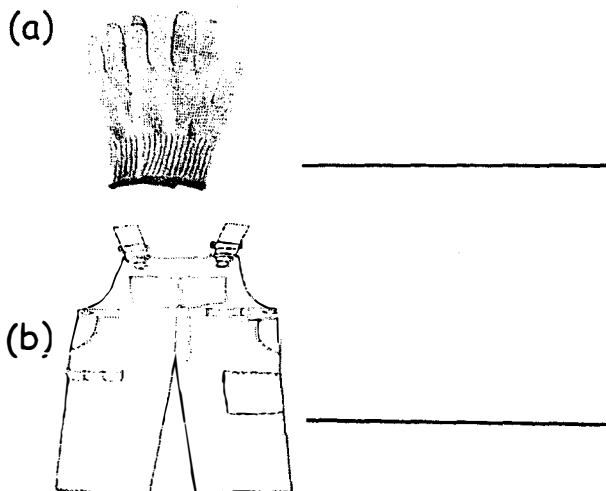
- (a) _____
 (b) _____
 (c) _____
 (d) _____

2. Group these animals.

(pig, bell, cow, goat, ant,
 butterfly, mosquito, tick, dog,
 snake)



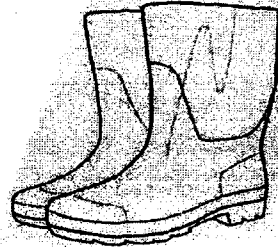
3. Write the names of these items.




(c)



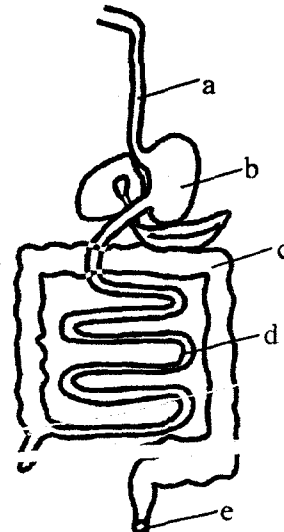
(d)



(e) Name this domestic animal.

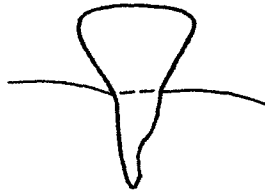


4. Name the parts of the digestive system.



(anus, oesophagus, stomach,
 large intestines, small intestines)

5. Name the parts of this tooth.



(a) _____

(b) _____

(root, crown)

6. Name four things we use to clean out teeth.

(a) _____

(b) _____

(c) _____

(d) _____

7. Name two sources of smoke.

(a) _____

(b) _____

8. Name three pollutants found in your environment.

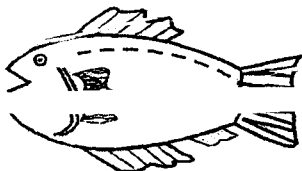
(a) _____

(b) _____


(c) _____

9. Name these types of foods.

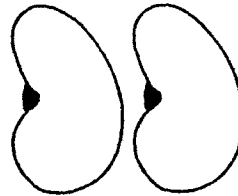
(a)



b)



(c)




(d)




AGRICULTURE

10. Name these tools used in a farm.


(a)



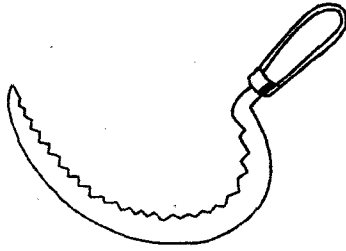
(b)



(c)



(d)



11. Name four crops grown in a farm

(a) _____

(b) _____


(c) _____

(d) _____


TECHNOLOGY

12. Name the following


(a)




(b)



(c)



(d)



(Computer, Radio, telephone, television)